

Name: _____

Week 1 Session 1

2020-21

3s 4s and 8s

3 a week

Times Tables Rock Stars

3 Times Tables

Licensed to Ashton Vale Primary School

1	$3 \times 12 =$ _____	21	$3 \times 11 =$ _____	41	$12 \times 3 =$ _____
2	$3 \times 9 =$ _____	22	$3 \times 6 =$ _____	42	$11 \times 3 =$ _____
3	$3 \times 7 =$ _____	23	$3 \times 5 =$ _____	43	$8 \times 3 =$ _____
4	$3 \times 11 =$ _____	24	$3 \times 9 =$ _____	44	$12 \times 3 =$ _____
5	$3 \times 2 =$ _____	25	$3 \times 10 =$ _____	45	$8 \times 3 =$ _____
6	$3 \times 1 =$ _____	26	$3 \times 2 =$ _____	46	$5 \times 3 =$ _____
7	$3 \times 9 =$ _____	27	$3 \times 7 =$ _____	47	$7 \times 3 =$ _____
8	$3 \times 4 =$ _____	28	$3 \times 12 =$ _____	48	$11 \times 3 =$ _____
9	$3 \times 6 =$ _____	29	$3 \times 10 =$ _____	49	$4 \times 3 =$ _____
10	$3 \times 8 =$ _____	30	$3 \times 9 =$ _____	50	$1 \times 3 =$ _____
11	$3 \times 7 =$ _____	31	$5 \times 3 =$ _____	51	$6 \times 3 =$ _____
12	$3 \times 5 =$ _____	32	$2 \times 3 =$ _____	52	$10 \times 3 =$ _____
13	$3 \times 2 =$ _____	33	$6 \times 3 =$ _____	53	$8 \times 3 =$ _____
14	$3 \times 12 =$ _____	34	$8 \times 3 =$ _____	54	$4 \times 3 =$ _____
15	$3 \times 3 =$ _____	35	$1 \times 3 =$ _____	55	$2 \times 3 =$ _____
16	$3 \times 12 =$ _____	36	$10 \times 3 =$ _____	56	$6 \times 3 =$ _____
17	$3 \times 8 =$ _____	37	$9 \times 3 =$ _____	57	$10 \times 3 =$ _____
18	$3 \times 12 =$ _____	38	$10 \times 3 =$ _____	58	$8 \times 3 =$ _____
19	$3 \times 7 =$ _____	39	$7 \times 3 =$ _____	59	$10 \times 3 =$ _____
20	$3 \times 12 =$ _____	40	$2 \times 3 =$ _____	60	$1 \times 3 =$ _____

Time taken

:

🕒 3 minute time limit 🕒

Score

60

What's your rock status?

WANNABE

< 18 correct in 3 mins

GARAGE ROCKER

18-19 correct in 3 mins

BUSKER

20-21 correct in 3 mins

GIGGER

22-24 correct in 3 mins

UNSIGNED ACT

25-29 correct in 3 mins

BREAKTHROUGH ARTIST

30-35 correct in 3 mins

SUPPORT ACT

36-44 correct in 3 mins

HEADLINER

45-59 correct in 3 mins

ROCK STAR

All correct in \leq 3mins

ROCK LEGEND

All correct in \leq 2min

ROCK HERO

All correct in \leq 1 min

**TIMES TABLES
ROCK STARS**

Name: _____

Week 1 Session 2

2020-21

3s 4s and 8s

3 a week

Times Tables Rock Stars

3 Times Tables

Licensed to Ashton Vale Primary School

1	$15 \div 3 =$ _____	21	$9 \div 3 =$ _____	41	$12 \div 3 =$ _____
2	$27 \div 3 =$ _____	22	$36 \div 3 =$ _____	42	$27 \div 3 =$ _____
3	$15 \div 3 =$ _____	23	$15 \div 3 =$ _____	43	$15 \div 3 =$ _____
4	$15 \div 3 =$ _____	24	$3 \div 3 =$ _____	44	$36 \div 3 =$ _____
5	$9 \div 3 =$ _____	25	$9 \div 3 =$ _____	45	$24 \div 3 =$ _____
6	$9 \div 3 =$ _____	26	$33 \div 3 =$ _____	46	$6 \div 3 =$ _____
7	$6 \div 3 =$ _____	27	$24 \div 3 =$ _____	47	$27 \div 3 =$ _____
8	$12 \div 3 =$ _____	28	$27 \div 3 =$ _____	48	$9 \div 3 =$ _____
9	$18 \div 3 =$ _____	29	$27 \div 3 =$ _____	49	$36 \div 3 =$ _____
10	$6 \div 3 =$ _____	30	$21 \div 3 =$ _____	50	$33 \div 3 =$ _____
11	$9 \div 3 =$ _____	31	$33 \div 3 =$ _____	51	$15 \div 3 =$ _____
12	$21 \div 3 =$ _____	32	$18 \div 3 =$ _____	52	$9 \div 3 =$ _____
13	$33 \div 3 =$ _____	33	$30 \div 3 =$ _____	53	$36 \div 3 =$ _____
14	$9 \div 3 =$ _____	34	$36 \div 3 =$ _____	54	$27 \div 3 =$ _____
15	$3 \div 3 =$ _____	35	$24 \div 3 =$ _____	55	$27 \div 3 =$ _____
16	$33 \div 3 =$ _____	36	$33 \div 3 =$ _____	56	$3 \div 3 =$ _____
17	$15 \div 3 =$ _____	37	$9 \div 3 =$ _____	57	$33 \div 3 =$ _____
18	$12 \div 3 =$ _____	38	$30 \div 3 =$ _____	58	$18 \div 3 =$ _____
19	$27 \div 3 =$ _____	39	$24 \div 3 =$ _____	59	$12 \div 3 =$ _____
20	$12 \div 3 =$ _____	40	$30 \div 3 =$ _____	60	$12 \div 3 =$ _____

Time taken

:

🕒 3 minute time limit 🕒

Score

60

What's your rock status?

WANNABE

< 18 correct in 3 mins

GARAGE ROCKER

18-19 correct in 3 mins

BUSKER

20-21 correct in 3 mins

GIGGER

22-24 correct in 3 mins

UNSIGNED ACT

25-29 correct in 3 mins

BREAKTHROUGH ARTIST

30-35 correct in 3 mins

SUPPORT ACT

36-44 correct in 3 mins

HEADLINER

45-59 correct in 3 mins

ROCK STAR

All correct in \leq 3mins

ROCK LEGEND

All correct in \leq 2min

ROCK HERO

All correct in \leq 1 min

**TIMES TABLES
ROCK STARS**

Name: _____

Week 1 Session 3

2020-21

3s 4s and 8s

3 a week

Times Tables Rock Stars

3 Times Tables

Licensed to Ashton Vale Primary School

1	$3 \times 7 =$ _____	21	$3 \times 9 =$ _____	41	$30 \div 3 =$ _____
2	$3 \times 5 =$ _____	22	$3 \times 11 =$ _____	42	$3 \div 3 =$ _____
3	$3 \times 9 =$ _____	23	$3 \times 7 =$ _____	43	$18 \div 3 =$ _____
4	$3 \times 3 =$ _____	24	$3 \times 10 =$ _____	44	$15 \div 3 =$ _____
5	$3 \times 2 =$ _____	25	$3 \times 4 =$ _____	45	$21 \div 3 =$ _____
6	$3 \times 4 =$ _____	26	$3 \times 4 =$ _____	46	$12 \div 3 =$ _____
7	$3 \times 10 =$ _____	27	$3 \times 2 =$ _____	47	$36 \div 3 =$ _____
8	$3 \times 11 =$ _____	28	$3 \times 7 =$ _____	48	$15 \div 3 =$ _____
9	$3 \times 4 =$ _____	29	$3 \times 11 =$ _____	49	$30 \div 3 =$ _____
10	$3 \times 8 =$ _____	30	$3 \times 3 =$ _____	50	$24 \div 3 =$ _____
11	$3 \times 5 =$ _____	31	$6 \div 3 =$ _____	51	$27 \div 3 =$ _____
12	$3 \times 10 =$ _____	32	$18 \div 3 =$ _____	52	$21 \div 3 =$ _____
13	$3 \times 7 =$ _____	33	$24 \div 3 =$ _____	53	$15 \div 3 =$ _____
14	$3 \times 2 =$ _____	34	$15 \div 3 =$ _____	54	$30 \div 3 =$ _____
15	$3 \times 6 =$ _____	35	$33 \div 3 =$ _____	55	$12 \div 3 =$ _____
16	$3 \times 1 =$ _____	36	$33 \div 3 =$ _____	56	$12 \div 3 =$ _____
17	$3 \times 7 =$ _____	37	$36 \div 3 =$ _____	57	$24 \div 3 =$ _____
18	$3 \times 10 =$ _____	38	$33 \div 3 =$ _____	58	$24 \div 3 =$ _____
19	$3 \times 7 =$ _____	39	$15 \div 3 =$ _____	59	$24 \div 3 =$ _____
20	$3 \times 7 =$ _____	40	$36 \div 3 =$ _____	60	$33 \div 3 =$ _____

Time taken

:

🕒 3 minute time limit 🕒

Score

60

Add up your time

Mins

S1 _____

S2 _____

S3 _____

Total _____

Secs

S1 _____

S2 _____

S3 _____

Total _____

Add up your score

S1 _____

S2 _____

S3 _____

Total _____

Name: _____

Week 2 Session 1

2020-21

3s 4s and 8s

3 a week

Times Tables Rock Stars

3 Times Tables

Licensed to Ashton Vale Primary School

1	$3 \times 9 =$ _____	21	$3 \times 10 =$ _____	41	$7 \times 3 =$ _____
2	$3 \times 10 =$ _____	22	$3 \times 11 =$ _____	42	$8 \times 3 =$ _____
3	$3 \times 8 =$ _____	23	$3 \times 4 =$ _____	43	$9 \times 3 =$ _____
4	$3 \times 1 =$ _____	24	$3 \times 2 =$ _____	44	$5 \times 3 =$ _____
5	$3 \times 4 =$ _____	25	$3 \times 11 =$ _____	45	$9 \times 3 =$ _____
6	$3 \times 11 =$ _____	26	$3 \times 4 =$ _____	46	$8 \times 3 =$ _____
7	$3 \times 10 =$ _____	27	$3 \times 5 =$ _____	47	$4 \times 3 =$ _____
8	$3 \times 5 =$ _____	28	$3 \times 8 =$ _____	48	$12 \times 3 =$ _____
9	$3 \times 10 =$ _____	29	$3 \times 4 =$ _____	49	$1 \times 3 =$ _____
10	$3 \times 5 =$ _____	30	$3 \times 2 =$ _____	50	$6 \times 3 =$ _____
11	$3 \times 10 =$ _____	31	$11 \times 3 =$ _____	51	$9 \times 3 =$ _____
12	$3 \times 12 =$ _____	32	$4 \times 3 =$ _____	52	$6 \times 3 =$ _____
13	$3 \times 12 =$ _____	33	$4 \times 3 =$ _____	53	$4 \times 3 =$ _____
14	$3 \times 3 =$ _____	34	$4 \times 3 =$ _____	54	$4 \times 3 =$ _____
15	$3 \times 11 =$ _____	35	$6 \times 3 =$ _____	55	$10 \times 3 =$ _____
16	$3 \times 10 =$ _____	36	$6 \times 3 =$ _____	56	$7 \times 3 =$ _____
17	$3 \times 4 =$ _____	37	$7 \times 3 =$ _____	57	$1 \times 3 =$ _____
18	$3 \times 5 =$ _____	38	$7 \times 3 =$ _____	58	$9 \times 3 =$ _____
19	$3 \times 12 =$ _____	39	$8 \times 3 =$ _____	59	$8 \times 3 =$ _____
20	$3 \times 4 =$ _____	40	$12 \times 3 =$ _____	60	$8 \times 3 =$ _____

Time taken

:

🕒 3 minute time limit 🕒

Score

60

What's your rock status?

WANNABE

< 18 correct in 3 mins

GARAGE ROCKER

18-19 correct in 3 mins

BUSKER

20-21 correct in 3 mins

GIGGER

22-24 correct in 3 mins

UNSIGNED ACT

25-29 correct in 3 mins

BREAKTHROUGH ARTIST

30-35 correct in 3 mins

SUPPORT ACT

36-44 correct in 3 mins

HEADLINER

45-59 correct in 3 mins

ROCK STAR

All correct in \leq 3mins

ROCK LEGEND

All correct in \leq 2min

ROCK HERO

All correct in \leq 1 min

**TIMES TABLES
ROCK STARS**

Name: _____

Week 2 Session 2

2020-21

3s 4s and 8s

3 a week

Times Tables Rock Stars

3 Times Tables

Licensed to Ashton Vale Primary School

1	$6 \div 3 =$ _____	21	$18 \div 3 =$ _____	41	$6 \div 3 =$ _____
2	$24 \div 3 =$ _____	22	$3 \div 3 =$ _____	42	$15 \div 3 =$ _____
3	$18 \div 3 =$ _____	23	$9 \div 3 =$ _____	43	$36 \div 3 =$ _____
4	$12 \div 3 =$ _____	24	$15 \div 3 =$ _____	44	$36 \div 3 =$ _____
5	$15 \div 3 =$ _____	25	$9 \div 3 =$ _____	45	$18 \div 3 =$ _____
6	$30 \div 3 =$ _____	26	$18 \div 3 =$ _____	46	$21 \div 3 =$ _____
7	$30 \div 3 =$ _____	27	$18 \div 3 =$ _____	47	$33 \div 3 =$ _____
8	$21 \div 3 =$ _____	28	$21 \div 3 =$ _____	48	$30 \div 3 =$ _____
9	$18 \div 3 =$ _____	29	$36 \div 3 =$ _____	49	$3 \div 3 =$ _____
10	$30 \div 3 =$ _____	30	$21 \div 3 =$ _____	50	$30 \div 3 =$ _____
11	$30 \div 3 =$ _____	31	$6 \div 3 =$ _____	51	$36 \div 3 =$ _____
12	$24 \div 3 =$ _____	32	$33 \div 3 =$ _____	52	$36 \div 3 =$ _____
13	$12 \div 3 =$ _____	33	$36 \div 3 =$ _____	53	$18 \div 3 =$ _____
14	$30 \div 3 =$ _____	34	$33 \div 3 =$ _____	54	$33 \div 3 =$ _____
15	$6 \div 3 =$ _____	35	$24 \div 3 =$ _____	55	$9 \div 3 =$ _____
16	$33 \div 3 =$ _____	36	$30 \div 3 =$ _____	56	$30 \div 3 =$ _____
17	$18 \div 3 =$ _____	37	$6 \div 3 =$ _____	57	$3 \div 3 =$ _____
18	$18 \div 3 =$ _____	38	$33 \div 3 =$ _____	58	$33 \div 3 =$ _____
19	$15 \div 3 =$ _____	39	$24 \div 3 =$ _____	59	$36 \div 3 =$ _____
20	$12 \div 3 =$ _____	40	$21 \div 3 =$ _____	60	$30 \div 3 =$ _____

Time taken

:

🕒 3 minute time limit 🕒

Score

60

What's your rock status?

WANNABE

< 18 correct in 3 mins

GARAGE ROCKER

18-19 correct in 3 mins

BUSKER

20-21 correct in 3 mins

GIGGER

22-24 correct in 3 mins

UNSIGNED ACT

25-29 correct in 3 mins

BREAKTHROUGH ARTIST

30-35 correct in 3 mins

SUPPORT ACT

36-44 correct in 3 mins

HEADLINER

45-59 correct in 3 mins

ROCK STAR

All correct in \leq 3mins

ROCK LEGEND

All correct in \leq 2min

ROCK HERO

All correct in \leq 1 min

**TIMES TABLES
ROCK STARS**

Name: _____

Week 2 Session 3

2020-21

3s 4s and 8s

3 a week

**Times Tables
Rock Stars**

3

Times Tables

Licensed to Ashton Vale Primary School

1	$3 \times 4 =$ _____	21	$3 \times 6 =$ _____	41	$33 \div 3 =$ _____
2	$3 \times 4 =$ _____	22	$3 \times 12 =$ _____	42	$18 \div 3 =$ _____
3	$3 \times 2 =$ _____	23	$3 \times 3 =$ _____	43	$36 \div 3 =$ _____
4	$3 \times 3 =$ _____	24	$3 \times 10 =$ _____	44	$6 \div 3 =$ _____
5	$3 \times 6 =$ _____	25	$3 \times 6 =$ _____	45	$21 \div 3 =$ _____
6	$3 \times 12 =$ _____	26	$3 \times 9 =$ _____	46	$6 \div 3 =$ _____
7	$3 \times 7 =$ _____	27	$3 \times 12 =$ _____	47	$6 \div 3 =$ _____
8	$3 \times 1 =$ _____	28	$3 \times 9 =$ _____	48	$15 \div 3 =$ _____
9	$3 \times 5 =$ _____	29	$3 \times 8 =$ _____	49	$3 \div 3 =$ _____
10	$3 \times 5 =$ _____	30	$3 \times 11 =$ _____	50	$6 \div 3 =$ _____
11	$3 \times 11 =$ _____	31	$18 \div 3 =$ _____	51	$3 \div 3 =$ _____
12	$3 \times 8 =$ _____	32	$33 \div 3 =$ _____	52	$6 \div 3 =$ _____
13	$3 \times 6 =$ _____	33	$3 \div 3 =$ _____	53	$24 \div 3 =$ _____
14	$3 \times 2 =$ _____	34	$15 \div 3 =$ _____	54	$12 \div 3 =$ _____
15	$3 \times 2 =$ _____	35	$3 \div 3 =$ _____	55	$18 \div 3 =$ _____
16	$3 \times 10 =$ _____	36	$12 \div 3 =$ _____	56	$24 \div 3 =$ _____
17	$3 \times 6 =$ _____	37	$9 \div 3 =$ _____	57	$36 \div 3 =$ _____
18	$3 \times 8 =$ _____	38	$3 \div 3 =$ _____	58	$24 \div 3 =$ _____
19	$3 \times 12 =$ _____	39	$30 \div 3 =$ _____	59	$36 \div 3 =$ _____
20	$3 \times 12 =$ _____	40	$36 \div 3 =$ _____	60	$12 \div 3 =$ _____

Time taken

:

🕒 3 minute time limit 🕒

Score

60

Add up your time

Mins
S1 _____
S2 _____
S3 _____
Total _____

Secs
S1 _____
S2 _____
S3 _____
Total _____

Add up your score
S1 _____
S2 _____
S3 _____
Total _____

Name: _____

Week 3 Session 1

2020-21

3s 4s and 8s

3 a week

Times Tables Rock Stars

4

Times Tables

Licensed to Ashton Vale Primary School

1	$4 \times 3 =$ _____	21	$4 \times 9 =$ _____	41	$1 \times 4 =$ _____
2	$4 \times 7 =$ _____	22	$4 \times 4 =$ _____	42	$9 \times 4 =$ _____
3	$4 \times 8 =$ _____	23	$4 \times 3 =$ _____	43	$1 \times 4 =$ _____
4	$4 \times 4 =$ _____	24	$4 \times 6 =$ _____	44	$5 \times 4 =$ _____
5	$4 \times 2 =$ _____	25	$4 \times 3 =$ _____	45	$2 \times 4 =$ _____
6	$4 \times 9 =$ _____	26	$4 \times 6 =$ _____	46	$6 \times 4 =$ _____
7	$4 \times 11 =$ _____	27	$4 \times 7 =$ _____	47	$6 \times 4 =$ _____
8	$4 \times 10 =$ _____	28	$4 \times 3 =$ _____	48	$8 \times 4 =$ _____
9	$4 \times 5 =$ _____	29	$4 \times 5 =$ _____	49	$4 \times 4 =$ _____
10	$4 \times 5 =$ _____	30	$4 \times 4 =$ _____	50	$3 \times 4 =$ _____
11	$4 \times 11 =$ _____	31	$8 \times 4 =$ _____	51	$1 \times 4 =$ _____
12	$4 \times 4 =$ _____	32	$11 \times 4 =$ _____	52	$8 \times 4 =$ _____
13	$4 \times 4 =$ _____	33	$7 \times 4 =$ _____	53	$7 \times 4 =$ _____
14	$4 \times 3 =$ _____	34	$6 \times 4 =$ _____	54	$1 \times 4 =$ _____
15	$4 \times 4 =$ _____	35	$1 \times 4 =$ _____	55	$1 \times 4 =$ _____
16	$4 \times 7 =$ _____	36	$8 \times 4 =$ _____	56	$1 \times 4 =$ _____
17	$4 \times 11 =$ _____	37	$5 \times 4 =$ _____	57	$8 \times 4 =$ _____
18	$4 \times 11 =$ _____	38	$12 \times 4 =$ _____	58	$10 \times 4 =$ _____
19	$4 \times 12 =$ _____	39	$5 \times 4 =$ _____	59	$4 \times 4 =$ _____
20	$4 \times 8 =$ _____	40	$1 \times 4 =$ _____	60	$9 \times 4 =$ _____

Time taken

:

🕒 3 minute time limit 🕒

Score

60

What's your rock status?

WANNABE

< 18 correct in 3 mins

GARAGE ROCKER

18-19 correct in 3 mins

BUSKER

20-21 correct in 3 mins

GIGGER

22-24 correct in 3 mins

UNSIGNED ACT

25-29 correct in 3 mins

BREAKTHROUGH ARTIST

30-35 correct in 3 mins

SUPPORT ACT

36-44 correct in 3 mins

HEADLINER

45-59 correct in 3 mins

ROCK STAR

All correct in \leq 3mins

ROCK LEGEND

All correct in \leq 2min

ROCK HERO

All correct in \leq 1 min

**TIMES TABLES
ROCK STARS**

Name: _____

Week 3 Session 2

2020-21

3s 4s and 8s

3 a week

Times Tables Rock Stars

4

Times Tables

Licensed to Ashton Vale Primary School

1	$48 \div 4 =$ _____	21	$12 \div 4 =$ _____	41	$36 \div 4 =$ _____
2	$8 \div 4 =$ _____	22	$40 \div 4 =$ _____	42	$8 \div 4 =$ _____
3	$44 \div 4 =$ _____	23	$20 \div 4 =$ _____	43	$44 \div 4 =$ _____
4	$44 \div 4 =$ _____	24	$20 \div 4 =$ _____	44	$24 \div 4 =$ _____
5	$4 \div 4 =$ _____	25	$8 \div 4 =$ _____	45	$24 \div 4 =$ _____
6	$16 \div 4 =$ _____	26	$36 \div 4 =$ _____	46	$12 \div 4 =$ _____
7	$24 \div 4 =$ _____	27	$20 \div 4 =$ _____	47	$24 \div 4 =$ _____
8	$32 \div 4 =$ _____	28	$20 \div 4 =$ _____	48	$40 \div 4 =$ _____
9	$20 \div 4 =$ _____	29	$44 \div 4 =$ _____	49	$20 \div 4 =$ _____
10	$16 \div 4 =$ _____	30	$48 \div 4 =$ _____	50	$28 \div 4 =$ _____
11	$32 \div 4 =$ _____	31	$12 \div 4 =$ _____	51	$40 \div 4 =$ _____
12	$28 \div 4 =$ _____	32	$8 \div 4 =$ _____	52	$36 \div 4 =$ _____
13	$8 \div 4 =$ _____	33	$8 \div 4 =$ _____	53	$16 \div 4 =$ _____
14	$48 \div 4 =$ _____	34	$28 \div 4 =$ _____	54	$44 \div 4 =$ _____
15	$12 \div 4 =$ _____	35	$48 \div 4 =$ _____	55	$4 \div 4 =$ _____
16	$48 \div 4 =$ _____	36	$20 \div 4 =$ _____	56	$4 \div 4 =$ _____
17	$20 \div 4 =$ _____	37	$40 \div 4 =$ _____	57	$4 \div 4 =$ _____
18	$36 \div 4 =$ _____	38	$44 \div 4 =$ _____	58	$16 \div 4 =$ _____
19	$36 \div 4 =$ _____	39	$16 \div 4 =$ _____	59	$48 \div 4 =$ _____
20	$44 \div 4 =$ _____	40	$36 \div 4 =$ _____	60	$44 \div 4 =$ _____

Time taken

:

🕒 3 minute time limit 🕒

Score

60

What's your rock status?

WANNABE

< 18 correct in 3 mins

GARAGE ROCKER

18-19 correct in 3 mins

BUSKER

20-21 correct in 3 mins

GIGGER

22-24 correct in 3 mins

UNSIGNED ACT

25-29 correct in 3 mins

BREAKTHROUGH ARTIST

30-35 correct in 3 mins

SUPPORT ACT

36-44 correct in 3 mins

HEADLINER

45-59 correct in 3 mins

ROCK STAR

All correct in \leq 3mins

ROCK LEGEND

All correct in \leq 2min

ROCK HERO

All correct in \leq 1 min

**TIMES TABLES
ROCK STARS**

Name: _____

Week 3 Session 3

2020-21

3s 4s and 8s

3 a week

Times Tables Rock Stars

4

Times Tables

Licensed to Ashton Vale Primary School

1	$4 \times 5 =$ _____	21	$4 \times 3 =$ _____	41	$36 \div 4 =$ _____
2	$4 \times 10 =$ _____	22	$4 \times 7 =$ _____	42	$28 \div 4 =$ _____
3	$4 \times 11 =$ _____	23	$4 \times 6 =$ _____	43	$32 \div 4 =$ _____
4	$4 \times 2 =$ _____	24	$4 \times 8 =$ _____	44	$36 \div 4 =$ _____
5	$4 \times 10 =$ _____	25	$4 \times 8 =$ _____	45	$16 \div 4 =$ _____
6	$4 \times 4 =$ _____	26	$4 \times 12 =$ _____	46	$4 \div 4 =$ _____
7	$4 \times 8 =$ _____	27	$4 \times 3 =$ _____	47	$28 \div 4 =$ _____
8	$4 \times 5 =$ _____	28	$4 \times 9 =$ _____	48	$20 \div 4 =$ _____
9	$4 \times 8 =$ _____	29	$4 \times 9 =$ _____	49	$12 \div 4 =$ _____
10	$4 \times 2 =$ _____	30	$4 \times 11 =$ _____	50	$4 \div 4 =$ _____
11	$4 \times 5 =$ _____	31	$24 \div 4 =$ _____	51	$40 \div 4 =$ _____
12	$4 \times 7 =$ _____	32	$20 \div 4 =$ _____	52	$32 \div 4 =$ _____
13	$4 \times 10 =$ _____	33	$8 \div 4 =$ _____	53	$28 \div 4 =$ _____
14	$4 \times 11 =$ _____	34	$40 \div 4 =$ _____	54	$4 \div 4 =$ _____
15	$4 \times 3 =$ _____	35	$36 \div 4 =$ _____	55	$4 \div 4 =$ _____
16	$4 \times 5 =$ _____	36	$12 \div 4 =$ _____	56	$20 \div 4 =$ _____
17	$4 \times 11 =$ _____	37	$16 \div 4 =$ _____	57	$4 \div 4 =$ _____
18	$4 \times 9 =$ _____	38	$12 \div 4 =$ _____	58	$12 \div 4 =$ _____
19	$4 \times 5 =$ _____	39	$24 \div 4 =$ _____	59	$12 \div 4 =$ _____
20	$4 \times 1 =$ _____	40	$4 \div 4 =$ _____	60	$4 \div 4 =$ _____

Time taken

:

🕒 3 minute time limit 🕒

Score

60

Add up your time

Mins

S1 _____

S2 _____

S3 _____

Total _____

Secs

S1 _____

S2 _____

S3 _____

Total _____

Add up your score

S1 _____

S2 _____

S3 _____

Total _____

Name: _____

Week 4 Session 1

2020-21

3s 4s and 8s

3 a week

Times Tables Rock Stars

4

Times Tables

Licensed to Ashton Vale Primary School

1	$4 \times 9 =$ _____	21	$4 \times 4 =$ _____	41	$9 \times 4 =$ _____
2	$4 \times 12 =$ _____	22	$4 \times 10 =$ _____	42	$3 \times 4 =$ _____
3	$4 \times 3 =$ _____	23	$4 \times 2 =$ _____	43	$2 \times 4 =$ _____
4	$4 \times 7 =$ _____	24	$4 \times 2 =$ _____	44	$9 \times 4 =$ _____
5	$4 \times 12 =$ _____	25	$4 \times 10 =$ _____	45	$11 \times 4 =$ _____
6	$4 \times 5 =$ _____	26	$4 \times 7 =$ _____	46	$11 \times 4 =$ _____
7	$4 \times 9 =$ _____	27	$4 \times 6 =$ _____	47	$3 \times 4 =$ _____
8	$4 \times 3 =$ _____	28	$4 \times 8 =$ _____	48	$6 \times 4 =$ _____
9	$4 \times 10 =$ _____	29	$4 \times 10 =$ _____	49	$3 \times 4 =$ _____
10	$4 \times 3 =$ _____	30	$4 \times 2 =$ _____	50	$1 \times 4 =$ _____
11	$4 \times 5 =$ _____	31	$11 \times 4 =$ _____	51	$6 \times 4 =$ _____
12	$4 \times 10 =$ _____	32	$9 \times 4 =$ _____	52	$5 \times 4 =$ _____
13	$4 \times 10 =$ _____	33	$5 \times 4 =$ _____	53	$1 \times 4 =$ _____
14	$4 \times 4 =$ _____	34	$5 \times 4 =$ _____	54	$6 \times 4 =$ _____
15	$4 \times 6 =$ _____	35	$6 \times 4 =$ _____	55	$11 \times 4 =$ _____
16	$4 \times 7 =$ _____	36	$11 \times 4 =$ _____	56	$3 \times 4 =$ _____
17	$4 \times 8 =$ _____	37	$3 \times 4 =$ _____	57	$8 \times 4 =$ _____
18	$4 \times 12 =$ _____	38	$4 \times 4 =$ _____	58	$5 \times 4 =$ _____
19	$4 \times 4 =$ _____	39	$7 \times 4 =$ _____	59	$8 \times 4 =$ _____
20	$4 \times 9 =$ _____	40	$11 \times 4 =$ _____	60	$1 \times 4 =$ _____

Time taken

:

🕒 3 minute time limit 🕒

Score

60

What's your rock status?

WANNABE

< 18 correct in 3 mins

GARAGE ROCKER

18-19 correct in 3 mins

BUSKER

20-21 correct in 3 mins

GIGGER

22-24 correct in 3 mins

UNSIGNED ACT

25-29 correct in 3 mins

BREAKTHROUGH ARTIST

30-35 correct in 3 mins

SUPPORT ACT

36-44 correct in 3 mins

HEADLINER

45-59 correct in 3 mins

ROCK STAR

All correct in \leq 3mins

ROCK LEGEND

All correct in \leq 2min

ROCK HERO

All correct in \leq 1 min

**TIMES TABLES
ROCK STARS**

Name: _____

Week 4 Session 2

2020-21

3s 4s and 8s

3 a week

Times Tables Rock Stars

4

Times Tables

Licensed to Ashton Vale Primary School

1	$8 \div 4 =$ _____	21	$24 \div 4 =$ _____	41	$24 \div 4 =$ _____
2	$8 \div 4 =$ _____	22	$36 \div 4 =$ _____	42	$32 \div 4 =$ _____
3	$8 \div 4 =$ _____	23	$36 \div 4 =$ _____	43	$8 \div 4 =$ _____
4	$44 \div 4 =$ _____	24	$24 \div 4 =$ _____	44	$44 \div 4 =$ _____
5	$24 \div 4 =$ _____	25	$48 \div 4 =$ _____	45	$28 \div 4 =$ _____
6	$48 \div 4 =$ _____	26	$4 \div 4 =$ _____	46	$32 \div 4 =$ _____
7	$48 \div 4 =$ _____	27	$12 \div 4 =$ _____	47	$32 \div 4 =$ _____
8	$12 \div 4 =$ _____	28	$32 \div 4 =$ _____	48	$24 \div 4 =$ _____
9	$48 \div 4 =$ _____	29	$40 \div 4 =$ _____	49	$24 \div 4 =$ _____
10	$40 \div 4 =$ _____	30	$12 \div 4 =$ _____	50	$12 \div 4 =$ _____
11	$12 \div 4 =$ _____	31	$44 \div 4 =$ _____	51	$28 \div 4 =$ _____
12	$16 \div 4 =$ _____	32	$8 \div 4 =$ _____	52	$40 \div 4 =$ _____
13	$28 \div 4 =$ _____	33	$32 \div 4 =$ _____	53	$28 \div 4 =$ _____
14	$32 \div 4 =$ _____	34	$28 \div 4 =$ _____	54	$20 \div 4 =$ _____
15	$40 \div 4 =$ _____	35	$40 \div 4 =$ _____	55	$36 \div 4 =$ _____
16	$4 \div 4 =$ _____	36	$4 \div 4 =$ _____	56	$24 \div 4 =$ _____
17	$20 \div 4 =$ _____	37	$24 \div 4 =$ _____	57	$48 \div 4 =$ _____
18	$24 \div 4 =$ _____	38	$44 \div 4 =$ _____	58	$32 \div 4 =$ _____
19	$16 \div 4 =$ _____	39	$24 \div 4 =$ _____	59	$36 \div 4 =$ _____
20	$32 \div 4 =$ _____	40	$16 \div 4 =$ _____	60	$12 \div 4 =$ _____

Time taken

:

🕒 3 minute time limit 🕒

Score

60

What's your rock status?

WANNABE

< 18 correct in 3 mins

GARAGE ROCKER

18-19 correct in 3 mins

BUSKER

20-21 correct in 3 mins

GIGGER

22-24 correct in 3 mins

UNSIGNED ACT

25-29 correct in 3 mins

BREAKTHROUGH ARTIST

30-35 correct in 3 mins

SUPPORT ACT

36-44 correct in 3 mins

HEADLINER

45-59 correct in 3 mins

ROCK STAR

All correct in \leq 3mins

ROCK LEGEND

All correct in \leq 2min

ROCK HERO

All correct in \leq 1 min

**TIMES TABLES
ROCK STARS**

Name: _____

Week 4 Session 3

2020-21

3s 4s and 8s

3 a week

Times Tables Rock Stars

4



Times Tables

Licensed to Ashton Vale Primary School

1	$4 \times 11 =$ _____	21	$4 \times 10 =$ _____	41	$4 \div 4 =$ _____
2	$4 \times 1 =$ _____	22	$4 \times 1 =$ _____	42	$8 \div 4 =$ _____
3	$4 \times 4 =$ _____	23	$4 \times 2 =$ _____	43	$40 \div 4 =$ _____
4	$4 \times 10 =$ _____	24	$4 \times 4 =$ _____	44	$36 \div 4 =$ _____
5	$4 \times 3 =$ _____	25	$4 \times 11 =$ _____	45	$36 \div 4 =$ _____
6	$4 \times 8 =$ _____	26	$4 \times 6 =$ _____	46	$48 \div 4 =$ _____
7	$4 \times 3 =$ _____	27	$4 \times 3 =$ _____	47	$24 \div 4 =$ _____
8	$4 \times 10 =$ _____	28	$4 \times 10 =$ _____	48	$8 \div 4 =$ _____
9	$4 \times 2 =$ _____	29	$4 \times 11 =$ _____	49	$24 \div 4 =$ _____
10	$4 \times 9 =$ _____	30	$4 \times 9 =$ _____	50	$40 \div 4 =$ _____
11	$4 \times 12 =$ _____	31	$48 \div 4 =$ _____	51	$16 \div 4 =$ _____
12	$4 \times 8 =$ _____	32	$20 \div 4 =$ _____	52	$40 \div 4 =$ _____
13	$4 \times 2 =$ _____	33	$40 \div 4 =$ _____	53	$44 \div 4 =$ _____
14	$4 \times 5 =$ _____	34	$12 \div 4 =$ _____	54	$24 \div 4 =$ _____
15	$4 \times 12 =$ _____	35	$20 \div 4 =$ _____	55	$24 \div 4 =$ _____
16	$4 \times 2 =$ _____	36	$16 \div 4 =$ _____	56	$48 \div 4 =$ _____
17	$4 \times 7 =$ _____	37	$20 \div 4 =$ _____	57	$20 \div 4 =$ _____
18	$4 \times 11 =$ _____	38	$24 \div 4 =$ _____	58	$44 \div 4 =$ _____
19	$4 \times 3 =$ _____	39	$20 \div 4 =$ _____	59	$16 \div 4 =$ _____
20	$4 \times 6 =$ _____	40	$20 \div 4 =$ _____	60	$44 \div 4 =$ _____

Time taken

:

 3 minute time limit 

Score

60

Add up your time

Mins

S1 _____

S2 _____

S3 _____

Total _____

Secs

S1 _____

S2 _____

S3 _____

Total _____

Add up your score

S1 _____

S2 _____

S3 _____

Total _____

Name: _____

Week 5 Session 1

2020-21

3s 4s and 8s

3 a week

Times Tables Rock Stars

8

Times Tables

Licensed to Ashton Vale Primary School

1	$8 \times 6 =$ _____	21	$8 \times 7 =$ _____	41	$9 \times 8 =$ _____
2	$8 \times 8 =$ _____	22	$8 \times 8 =$ _____	42	$5 \times 8 =$ _____
3	$8 \times 11 =$ _____	23	$8 \times 9 =$ _____	43	$8 \times 8 =$ _____
4	$8 \times 3 =$ _____	24	$8 \times 9 =$ _____	44	$7 \times 8 =$ _____
5	$8 \times 2 =$ _____	25	$8 \times 6 =$ _____	45	$9 \times 8 =$ _____
6	$8 \times 10 =$ _____	26	$8 \times 6 =$ _____	46	$8 \times 8 =$ _____
7	$8 \times 4 =$ _____	27	$8 \times 8 =$ _____	47	$1 \times 8 =$ _____
8	$8 \times 5 =$ _____	28	$8 \times 3 =$ _____	48	$9 \times 8 =$ _____
9	$8 \times 9 =$ _____	29	$8 \times 3 =$ _____	49	$6 \times 8 =$ _____
10	$8 \times 5 =$ _____	30	$8 \times 4 =$ _____	50	$7 \times 8 =$ _____
11	$8 \times 6 =$ _____	31	$3 \times 8 =$ _____	51	$7 \times 8 =$ _____
12	$8 \times 6 =$ _____	32	$12 \times 8 =$ _____	52	$3 \times 8 =$ _____
13	$8 \times 5 =$ _____	33	$2 \times 8 =$ _____	53	$7 \times 8 =$ _____
14	$8 \times 5 =$ _____	34	$5 \times 8 =$ _____	54	$1 \times 8 =$ _____
15	$8 \times 7 =$ _____	35	$5 \times 8 =$ _____	55	$4 \times 8 =$ _____
16	$8 \times 2 =$ _____	36	$1 \times 8 =$ _____	56	$6 \times 8 =$ _____
17	$8 \times 10 =$ _____	37	$9 \times 8 =$ _____	57	$7 \times 8 =$ _____
18	$8 \times 5 =$ _____	38	$12 \times 8 =$ _____	58	$3 \times 8 =$ _____
19	$8 \times 8 =$ _____	39	$1 \times 8 =$ _____	59	$8 \times 8 =$ _____
20	$8 \times 1 =$ _____	40	$3 \times 8 =$ _____	60	$7 \times 8 =$ _____

Time taken

:

🕒 3 minute time limit 🕒

Score

60

What's your rock status?

WANNABE

< 18 correct in 3 mins

GARAGE ROCKER

18-19 correct in 3 mins

BUSKER

20-21 correct in 3 mins

GIGGER

22-24 correct in 3 mins

UNSIGNED ACT

25-29 correct in 3 mins

BREAKTHROUGH ARTIST

30-35 correct in 3 mins

SUPPORT ACT

36-44 correct in 3 mins

HEADLINER

45-59 correct in 3 mins

ROCK STAR

All correct in \leq 3mins

ROCK LEGEND

All correct in \leq 2min

ROCK HERO

All correct in \leq 1 min

**TIMES TABLES
ROCK STARS**

Name: _____

Week 5 Session 2

2020-21

3s 4s and 8s

3 a week

Times Tables Rock Stars

8

Times Tables

Licensed to Ashton Vale Primary School

1	$32 \div 8 =$ _____	21	$80 \div 8 =$ _____	41	$24 \div 8 =$ _____
2	$32 \div 8 =$ _____	22	$80 \div 8 =$ _____	42	$96 \div 8 =$ _____
3	$80 \div 8 =$ _____	23	$24 \div 8 =$ _____	43	$48 \div 8 =$ _____
4	$88 \div 8 =$ _____	24	$16 \div 8 =$ _____	44	$64 \div 8 =$ _____
5	$48 \div 8 =$ _____	25	$8 \div 8 =$ _____	45	$32 \div 8 =$ _____
6	$88 \div 8 =$ _____	26	$96 \div 8 =$ _____	46	$96 \div 8 =$ _____
7	$40 \div 8 =$ _____	27	$72 \div 8 =$ _____	47	$88 \div 8 =$ _____
8	$72 \div 8 =$ _____	28	$88 \div 8 =$ _____	48	$40 \div 8 =$ _____
9	$88 \div 8 =$ _____	29	$16 \div 8 =$ _____	49	$40 \div 8 =$ _____
10	$24 \div 8 =$ _____	30	$72 \div 8 =$ _____	50	$40 \div 8 =$ _____
11	$16 \div 8 =$ _____	31	$32 \div 8 =$ _____	51	$56 \div 8 =$ _____
12	$40 \div 8 =$ _____	32	$48 \div 8 =$ _____	52	$88 \div 8 =$ _____
13	$56 \div 8 =$ _____	33	$56 \div 8 =$ _____	53	$8 \div 8 =$ _____
14	$16 \div 8 =$ _____	34	$8 \div 8 =$ _____	54	$16 \div 8 =$ _____
15	$88 \div 8 =$ _____	35	$64 \div 8 =$ _____	55	$80 \div 8 =$ _____
16	$80 \div 8 =$ _____	36	$88 \div 8 =$ _____	56	$24 \div 8 =$ _____
17	$56 \div 8 =$ _____	37	$96 \div 8 =$ _____	57	$24 \div 8 =$ _____
18	$56 \div 8 =$ _____	38	$80 \div 8 =$ _____	58	$8 \div 8 =$ _____
19	$32 \div 8 =$ _____	39	$8 \div 8 =$ _____	59	$40 \div 8 =$ _____
20	$72 \div 8 =$ _____	40	$24 \div 8 =$ _____	60	$48 \div 8 =$ _____

Time taken

:

🕒 3 minute time limit 🕒

Score

60

What's your rock status?

WANNABE

< 18 correct in 3 mins

GARAGE ROCKER

18-19 correct in 3 mins

BUSKER

20-21 correct in 3 mins

GIGGER

22-24 correct in 3 mins

UNSIGNED ACT

25-29 correct in 3 mins

BREAKTHROUGH ARTIST

30-35 correct in 3 mins

SUPPORT ACT

36-44 correct in 3 mins

HEADLINER

45-59 correct in 3 mins

ROCK STAR

All correct in \leq 3mins

ROCK LEGEND

All correct in \leq 2min

ROCK HERO

All correct in \leq 1 min

**TIMES TABLES
ROCK STARS**

Name: _____

Week 5 Session 3

2020-21

3s 4s and 8s

3 a week

Times Tables Rock Stars

8 Times Tables

Licensed to Ashton Vale Primary School

1	$8 \times 6 =$ _____	21	$8 \times 1 =$ _____	41	$8 \div 8 =$ _____
2	$8 \times 1 =$ _____	22	$8 \times 8 =$ _____	42	$16 \div 8 =$ _____
3	$8 \times 11 =$ _____	23	$8 \times 8 =$ _____	43	$56 \div 8 =$ _____
4	$8 \times 4 =$ _____	24	$8 \times 2 =$ _____	44	$24 \div 8 =$ _____
5	$8 \times 4 =$ _____	25	$8 \times 10 =$ _____	45	$16 \div 8 =$ _____
6	$8 \times 1 =$ _____	26	$8 \times 9 =$ _____	46	$32 \div 8 =$ _____
7	$8 \times 3 =$ _____	27	$8 \times 1 =$ _____	47	$88 \div 8 =$ _____
8	$8 \times 10 =$ _____	28	$8 \times 2 =$ _____	48	$8 \div 8 =$ _____
9	$8 \times 6 =$ _____	29	$8 \times 3 =$ _____	49	$96 \div 8 =$ _____
10	$8 \times 12 =$ _____	30	$8 \times 11 =$ _____	50	$88 \div 8 =$ _____
11	$8 \times 2 =$ _____	31	$88 \div 8 =$ _____	51	$48 \div 8 =$ _____
12	$8 \times 9 =$ _____	32	$88 \div 8 =$ _____	52	$32 \div 8 =$ _____
13	$8 \times 7 =$ _____	33	$32 \div 8 =$ _____	53	$8 \div 8 =$ _____
14	$8 \times 3 =$ _____	34	$56 \div 8 =$ _____	54	$88 \div 8 =$ _____
15	$8 \times 12 =$ _____	35	$72 \div 8 =$ _____	55	$72 \div 8 =$ _____
16	$8 \times 11 =$ _____	36	$32 \div 8 =$ _____	56	$64 \div 8 =$ _____
17	$8 \times 7 =$ _____	37	$32 \div 8 =$ _____	57	$96 \div 8 =$ _____
18	$8 \times 10 =$ _____	38	$96 \div 8 =$ _____	58	$96 \div 8 =$ _____
19	$8 \times 10 =$ _____	39	$16 \div 8 =$ _____	59	$24 \div 8 =$ _____
20	$8 \times 2 =$ _____	40	$16 \div 8 =$ _____	60	$8 \div 8 =$ _____

Time taken

:

🕒 3 minute time limit 🕒

Score

60

Add up your time

Mins
S1 _____
S2 _____
S3 _____
Total _____

Secs
S1 _____
S2 _____
S3 _____
Total _____

Add up your score
S1 _____
S2 _____
S3 _____
Total _____

Name: _____

Week 6 Session 1

2020-21

3s 4s and 8s

3 a week

Times Tables Rock Stars

3,8 Times Tables

Licensed to Ashton Vale Primary School

1	$3 \times 1 =$ _____	21	$3 \times 4 =$ _____	41	$7 \times 3 =$ _____
2	$8 \times 9 =$ _____	22	$8 \times 10 =$ _____	42	$1 \times 8 =$ _____
3	$3 \times 5 =$ _____	23	$8 \times 11 =$ _____	43	$7 \times 8 =$ _____
4	$8 \times 3 =$ _____	24	$3 \times 3 =$ _____	44	$4 \times 8 =$ _____
5	$3 \times 5 =$ _____	25	$8 \times 4 =$ _____	45	$5 \times 8 =$ _____
6	$8 \times 9 =$ _____	26	$8 \times 11 =$ _____	46	$10 \times 8 =$ _____
7	$8 \times 12 =$ _____	27	$8 \times 5 =$ _____	47	$2 \times 8 =$ _____
8	$8 \times 3 =$ _____	28	$8 \times 7 =$ _____	48	$4 \times 8 =$ _____
9	$3 \times 6 =$ _____	29	$3 \times 1 =$ _____	49	$9 \times 8 =$ _____
10	$8 \times 2 =$ _____	30	$3 \times 1 =$ _____	50	$1 \times 3 =$ _____
11	$8 \times 2 =$ _____	31	$10 \times 3 =$ _____	51	$10 \times 8 =$ _____
12	$8 \times 9 =$ _____	32	$10 \times 3 =$ _____	52	$1 \times 3 =$ _____
13	$3 \times 2 =$ _____	33	$4 \times 8 =$ _____	53	$2 \times 3 =$ _____
14	$8 \times 9 =$ _____	34	$10 \times 8 =$ _____	54	$1 \times 3 =$ _____
15	$3 \times 2 =$ _____	35	$12 \times 8 =$ _____	55	$1 \times 3 =$ _____
16	$8 \times 6 =$ _____	36	$11 \times 3 =$ _____	56	$7 \times 3 =$ _____
17	$8 \times 11 =$ _____	37	$6 \times 8 =$ _____	57	$5 \times 8 =$ _____
18	$3 \times 1 =$ _____	38	$10 \times 3 =$ _____	58	$9 \times 3 =$ _____
19	$8 \times 9 =$ _____	39	$6 \times 8 =$ _____	59	$6 \times 8 =$ _____
20	$8 \times 10 =$ _____	40	$2 \times 8 =$ _____	60	$9 \times 3 =$ _____

Time taken

:

🕒 3 minute time limit 🕒

Score

60

What's your rock status?

WANNABE

< 18 correct in 3 mins

GARAGE ROCKER

18-19 correct in 3 mins

BUSKER

20-21 correct in 3 mins

GIGGER

22-24 correct in 3 mins

UNSIGNED ACT

25-29 correct in 3 mins

BREAKTHROUGH ARTIST

30-35 correct in 3 mins

SUPPORT ACT

36-44 correct in 3 mins

HEADLINER

45-59 correct in 3 mins

ROCK STAR

All correct in ≤ 3 mins

ROCK LEGEND

All correct in ≤ 2 min

ROCK HERO

All correct in ≤ 1 min

**TIMES TABLES
ROCK STARS**

Name: _____

Week 6 Session 2

2020-21

3s 4s and 8s

3 a week

Times Tables Rock Stars

3,8 Times Tables

Licensed to Ashton Vale Primary School

1	$27 \div 3 =$ _____	21	$24 \div 8 =$ _____	41	$40 \div 8 =$ _____
2	$33 \div 3 =$ _____	22	$56 \div 8 =$ _____	42	$96 \div 8 =$ _____
3	$21 \div 3 =$ _____	23	$12 \div 3 =$ _____	43	$30 \div 3 =$ _____
4	$56 \div 8 =$ _____	24	$12 \div 3 =$ _____	44	$16 \div 8 =$ _____
5	$12 \div 3 =$ _____	25	$18 \div 3 =$ _____	45	$24 \div 8 =$ _____
6	$56 \div 8 =$ _____	26	$36 \div 3 =$ _____	46	$15 \div 3 =$ _____
7	$24 \div 8 =$ _____	27	$21 \div 3 =$ _____	47	$72 \div 8 =$ _____
8	$16 \div 8 =$ _____	28	$15 \div 3 =$ _____	48	$12 \div 3 =$ _____
9	$15 \div 3 =$ _____	29	$15 \div 3 =$ _____	49	$24 \div 3 =$ _____
10	$40 \div 8 =$ _____	30	$9 \div 3 =$ _____	50	$6 \div 3 =$ _____
11	$24 \div 3 =$ _____	31	$88 \div 8 =$ _____	51	$80 \div 8 =$ _____
12	$96 \div 8 =$ _____	32	$27 \div 3 =$ _____	52	$56 \div 8 =$ _____
13	$15 \div 3 =$ _____	33	$15 \div 3 =$ _____	53	$40 \div 8 =$ _____
14	$15 \div 3 =$ _____	34	$24 \div 3 =$ _____	54	$96 \div 8 =$ _____
15	$56 \div 8 =$ _____	35	$24 \div 8 =$ _____	55	$27 \div 3 =$ _____
16	$3 \div 3 =$ _____	36	$32 \div 8 =$ _____	56	$32 \div 8 =$ _____
17	$30 \div 3 =$ _____	37	$12 \div 3 =$ _____	57	$21 \div 3 =$ _____
18	$72 \div 8 =$ _____	38	$6 \div 3 =$ _____	58	$24 \div 3 =$ _____
19	$64 \div 8 =$ _____	39	$27 \div 3 =$ _____	59	$30 \div 3 =$ _____
20	$30 \div 3 =$ _____	40	$24 \div 8 =$ _____	60	$56 \div 8 =$ _____

Time taken

:

🕒 3 minute time limit 🕒

Score

60

What's your rock status?

WANNABE

< 18 correct in 3 mins

GARAGE ROCKER

18-19 correct in 3 mins

BUSKER

20-21 correct in 3 mins

GIGGER

22-24 correct in 3 mins

UNSIGNED ACT

25-29 correct in 3 mins

BREAKTHROUGH ARTIST

30-35 correct in 3 mins

SUPPORT ACT

36-44 correct in 3 mins

HEADLINER

45-59 correct in 3 mins

ROCK STAR

All correct in \leq 3mins

ROCK LEGEND

All correct in \leq 2min

ROCK HERO

All correct in \leq 1 min

**TIMES TABLES
ROCK STARS**

Name: _____

Week 6 Session 3

2020-21

3s 4s and 8s

3 a week

Times Tables Rock Stars

3,8 Times Tables

Licensed to Ashton Vale Primary School

1	$3 \times 3 =$ _____	21	$3 \times 3 =$ _____	41	$64 \div 8 =$ _____
2	$8 \times 7 =$ _____	22	$3 \times 1 =$ _____	42	$24 \div 8 =$ _____
3	$8 \times 4 =$ _____	23	$3 \times 7 =$ _____	43	$24 \div 8 =$ _____
4	$8 \times 7 =$ _____	24	$3 \times 6 =$ _____	44	$12 \div 3 =$ _____
5	$3 \times 12 =$ _____	25	$8 \times 9 =$ _____	45	$24 \div 8 =$ _____
6	$3 \times 7 =$ _____	26	$8 \times 6 =$ _____	46	$9 \div 3 =$ _____
7	$8 \times 3 =$ _____	27	$3 \times 12 =$ _____	47	$24 \div 3 =$ _____
8	$3 \times 6 =$ _____	28	$3 \times 1 =$ _____	48	$8 \div 8 =$ _____
9	$8 \times 5 =$ _____	29	$8 \times 12 =$ _____	49	$16 \div 8 =$ _____
10	$3 \times 3 =$ _____	30	$8 \times 10 =$ _____	50	$88 \div 8 =$ _____
11	$3 \times 9 =$ _____	31	$6 \div 3 =$ _____	51	$64 \div 8 =$ _____
12	$3 \times 7 =$ _____	32	$6 \div 3 =$ _____	52	$72 \div 8 =$ _____
13	$8 \times 5 =$ _____	33	$18 \div 3 =$ _____	53	$36 \div 3 =$ _____
14	$3 \times 12 =$ _____	34	$96 \div 8 =$ _____	54	$15 \div 3 =$ _____
15	$8 \times 10 =$ _____	35	$33 \div 3 =$ _____	55	$36 \div 3 =$ _____
16	$3 \times 1 =$ _____	36	$72 \div 8 =$ _____	56	$15 \div 3 =$ _____
17	$8 \times 4 =$ _____	37	$16 \div 8 =$ _____	57	$16 \div 8 =$ _____
18	$8 \times 9 =$ _____	38	$12 \div 3 =$ _____	58	$3 \div 3 =$ _____
19	$8 \times 3 =$ _____	39	$33 \div 3 =$ _____	59	$15 \div 3 =$ _____
20	$8 \times 4 =$ _____	40	$56 \div 8 =$ _____	60	$72 \div 8 =$ _____

Time taken

:

🕒 3 minute time limit 🕒

Score

60

Add up your time

Mins

S1 _____

S2 _____

S3 _____

Total _____

Secs

S1 _____

S2 _____

S3 _____

Total _____

Add up your score

S1 _____

S2 _____

S3 _____

Total _____

Name: _____

Week 7 Session 1

2020-21

3s 4s and 8s

3 a week

Times Tables Rock Stars

4

Times Tables

Licensed to Ashton Vale Primary School

1	$4 \times 9 =$ _____	21	$4 \times 12 =$ _____	41	$7 \times 4 =$ _____
2	$4 \times 3 =$ _____	22	$4 \times 8 =$ _____	42	$10 \times 4 =$ _____
3	$4 \times 6 =$ _____	23	$4 \times 7 =$ _____	43	$8 \times 4 =$ _____
4	$4 \times 4 =$ _____	24	$4 \times 9 =$ _____	44	$10 \times 4 =$ _____
5	$4 \times 7 =$ _____	25	$4 \times 2 =$ _____	45	$3 \times 4 =$ _____
6	$4 \times 1 =$ _____	26	$4 \times 9 =$ _____	46	$10 \times 4 =$ _____
7	$4 \times 12 =$ _____	27	$4 \times 1 =$ _____	47	$10 \times 4 =$ _____
8	$4 \times 3 =$ _____	28	$4 \times 9 =$ _____	48	$4 \times 4 =$ _____
9	$4 \times 9 =$ _____	29	$4 \times 7 =$ _____	49	$7 \times 4 =$ _____
10	$4 \times 10 =$ _____	30	$4 \times 5 =$ _____	50	$11 \times 4 =$ _____
11	$4 \times 7 =$ _____	31	$5 \times 4 =$ _____	51	$5 \times 4 =$ _____
12	$4 \times 5 =$ _____	32	$12 \times 4 =$ _____	52	$1 \times 4 =$ _____
13	$4 \times 7 =$ _____	33	$12 \times 4 =$ _____	53	$7 \times 4 =$ _____
14	$4 \times 5 =$ _____	34	$3 \times 4 =$ _____	54	$2 \times 4 =$ _____
15	$4 \times 2 =$ _____	35	$7 \times 4 =$ _____	55	$1 \times 4 =$ _____
16	$4 \times 7 =$ _____	36	$10 \times 4 =$ _____	56	$4 \times 4 =$ _____
17	$4 \times 6 =$ _____	37	$11 \times 4 =$ _____	57	$12 \times 4 =$ _____
18	$4 \times 2 =$ _____	38	$1 \times 4 =$ _____	58	$8 \times 4 =$ _____
19	$4 \times 8 =$ _____	39	$9 \times 4 =$ _____	59	$6 \times 4 =$ _____
20	$4 \times 5 =$ _____	40	$2 \times 4 =$ _____	60	$7 \times 4 =$ _____

Time taken

:

🕒 3 minute time limit 🕒

Score

60

What's your rock status?

WANNABE

< 18 correct in 3 mins

GARAGE ROCKER

18-19 correct in 3 mins

BUSKER

20-21 correct in 3 mins

GIGGER

22-24 correct in 3 mins

UNSIGNED ACT

25-29 correct in 3 mins

BREAKTHROUGH ARTIST

30-35 correct in 3 mins

SUPPORT ACT

36-44 correct in 3 mins

HEADLINER

45-59 correct in 3 mins

ROCK STAR

All correct in \leq 3mins

ROCK LEGEND

All correct in \leq 2min

ROCK HERO

All correct in \leq 1 min

**TIMES TABLES
ROCK STARS**

Name: _____

Week 7 Session 2

2020-21

3s 4s and 8s

3 a week

Times Tables Rock Stars

4

Times Tables

Licensed to Ashton Vale Primary School

1	$28 \div 4 =$ _____	21	$48 \div 4 =$ _____	41	$16 \div 4 =$ _____
2	$20 \div 4 =$ _____	22	$20 \div 4 =$ _____	42	$32 \div 4 =$ _____
3	$32 \div 4 =$ _____	23	$32 \div 4 =$ _____	43	$28 \div 4 =$ _____
4	$16 \div 4 =$ _____	24	$4 \div 4 =$ _____	44	$4 \div 4 =$ _____
5	$4 \div 4 =$ _____	25	$16 \div 4 =$ _____	45	$12 \div 4 =$ _____
6	$48 \div 4 =$ _____	26	$4 \div 4 =$ _____	46	$20 \div 4 =$ _____
7	$20 \div 4 =$ _____	27	$28 \div 4 =$ _____	47	$40 \div 4 =$ _____
8	$32 \div 4 =$ _____	28	$20 \div 4 =$ _____	48	$12 \div 4 =$ _____
9	$40 \div 4 =$ _____	29	$40 \div 4 =$ _____	49	$20 \div 4 =$ _____
10	$48 \div 4 =$ _____	30	$8 \div 4 =$ _____	50	$20 \div 4 =$ _____
11	$28 \div 4 =$ _____	31	$20 \div 4 =$ _____	51	$16 \div 4 =$ _____
12	$8 \div 4 =$ _____	32	$16 \div 4 =$ _____	52	$4 \div 4 =$ _____
13	$48 \div 4 =$ _____	33	$44 \div 4 =$ _____	53	$28 \div 4 =$ _____
14	$36 \div 4 =$ _____	34	$24 \div 4 =$ _____	54	$16 \div 4 =$ _____
15	$12 \div 4 =$ _____	35	$20 \div 4 =$ _____	55	$8 \div 4 =$ _____
16	$48 \div 4 =$ _____	36	$16 \div 4 =$ _____	56	$16 \div 4 =$ _____
17	$32 \div 4 =$ _____	37	$32 \div 4 =$ _____	57	$36 \div 4 =$ _____
18	$40 \div 4 =$ _____	38	$24 \div 4 =$ _____	58	$16 \div 4 =$ _____
19	$24 \div 4 =$ _____	39	$8 \div 4 =$ _____	59	$28 \div 4 =$ _____
20	$16 \div 4 =$ _____	40	$44 \div 4 =$ _____	60	$16 \div 4 =$ _____

Time taken

:

🕒 3 minute time limit 🕒

Score

60

What's your rock status?

WANNABE

< 18 correct in 3 mins

GARAGE ROCKER

18-19 correct in 3 mins

BUSKER

20-21 correct in 3 mins

GIGGER

22-24 correct in 3 mins

UNSIGNED ACT

25-29 correct in 3 mins

BREAKTHROUGH ARTIST

30-35 correct in 3 mins

SUPPORT ACT

36-44 correct in 3 mins

HEADLINER

45-59 correct in 3 mins

ROCK STAR

All correct in \leq 3mins

ROCK LEGEND

All correct in \leq 2min

ROCK HERO

All correct in \leq 1 min

**TIMES TABLES
ROCK STARS**

Name: _____

Week 7 Session 3

2020-21

3s 4s and 8s

3 a week

Times Tables Rock Stars

4

Times Tables

Licensed to Ashton Vale Primary School

1	$4 \times 12 =$ _____	21	$4 \times 5 =$ _____	41	$4 \div 4 =$ _____
2	$4 \times 11 =$ _____	22	$4 \times 4 =$ _____	42	$44 \div 4 =$ _____
3	$4 \times 11 =$ _____	23	$4 \times 10 =$ _____	43	$40 \div 4 =$ _____
4	$4 \times 12 =$ _____	24	$4 \times 3 =$ _____	44	$20 \div 4 =$ _____
5	$4 \times 7 =$ _____	25	$4 \times 1 =$ _____	45	$44 \div 4 =$ _____
6	$4 \times 8 =$ _____	26	$4 \times 7 =$ _____	46	$16 \div 4 =$ _____
7	$4 \times 11 =$ _____	27	$4 \times 7 =$ _____	47	$8 \div 4 =$ _____
8	$4 \times 4 =$ _____	28	$4 \times 9 =$ _____	48	$28 \div 4 =$ _____
9	$4 \times 5 =$ _____	29	$4 \times 4 =$ _____	49	$12 \div 4 =$ _____
10	$4 \times 1 =$ _____	30	$4 \times 7 =$ _____	50	$8 \div 4 =$ _____
11	$4 \times 10 =$ _____	31	$8 \div 4 =$ _____	51	$44 \div 4 =$ _____
12	$4 \times 5 =$ _____	32	$48 \div 4 =$ _____	52	$8 \div 4 =$ _____
13	$4 \times 12 =$ _____	33	$12 \div 4 =$ _____	53	$32 \div 4 =$ _____
14	$4 \times 9 =$ _____	34	$20 \div 4 =$ _____	54	$32 \div 4 =$ _____
15	$4 \times 11 =$ _____	35	$40 \div 4 =$ _____	55	$12 \div 4 =$ _____
16	$4 \times 1 =$ _____	36	$32 \div 4 =$ _____	56	$32 \div 4 =$ _____
17	$4 \times 2 =$ _____	37	$16 \div 4 =$ _____	57	$28 \div 4 =$ _____
18	$4 \times 2 =$ _____	38	$44 \div 4 =$ _____	58	$8 \div 4 =$ _____
19	$4 \times 8 =$ _____	39	$36 \div 4 =$ _____	59	$16 \div 4 =$ _____
20	$4 \times 8 =$ _____	40	$24 \div 4 =$ _____	60	$20 \div 4 =$ _____

Time taken

:

🕒 3 minute time limit 🕒

Score

60

Add up your time

Mins

S1 _____

S2 _____

S3 _____

Total _____

Secs

S1 _____

S2 _____

S3 _____

Total _____

Add up your score

S1 _____

S2 _____

S3 _____

Total _____

Name: _____

Week 8 Session 1

2020-21

3s 4s and 8s

3 a week

Times Tables Rock Stars

8

Times Tables

Licensed to Ashton Vale Primary School

1	$8 \times 10 =$ _____	21	$8 \times 4 =$ _____	41	$4 \times 8 =$ _____
2	$8 \times 9 =$ _____	22	$8 \times 5 =$ _____	42	$6 \times 8 =$ _____
3	$8 \times 2 =$ _____	23	$8 \times 3 =$ _____	43	$10 \times 8 =$ _____
4	$8 \times 11 =$ _____	24	$8 \times 1 =$ _____	44	$12 \times 8 =$ _____
5	$8 \times 9 =$ _____	25	$8 \times 11 =$ _____	45	$3 \times 8 =$ _____
6	$8 \times 9 =$ _____	26	$8 \times 12 =$ _____	46	$2 \times 8 =$ _____
7	$8 \times 3 =$ _____	27	$8 \times 10 =$ _____	47	$8 \times 8 =$ _____
8	$8 \times 1 =$ _____	28	$8 \times 4 =$ _____	48	$6 \times 8 =$ _____
9	$8 \times 1 =$ _____	29	$8 \times 5 =$ _____	49	$1 \times 8 =$ _____
10	$8 \times 2 =$ _____	30	$8 \times 1 =$ _____	50	$10 \times 8 =$ _____
11	$8 \times 7 =$ _____	31	$10 \times 8 =$ _____	51	$10 \times 8 =$ _____
12	$8 \times 6 =$ _____	32	$3 \times 8 =$ _____	52	$6 \times 8 =$ _____
13	$8 \times 4 =$ _____	33	$8 \times 8 =$ _____	53	$5 \times 8 =$ _____
14	$8 \times 11 =$ _____	34	$9 \times 8 =$ _____	54	$9 \times 8 =$ _____
15	$8 \times 7 =$ _____	35	$9 \times 8 =$ _____	55	$4 \times 8 =$ _____
16	$8 \times 8 =$ _____	36	$8 \times 8 =$ _____	56	$4 \times 8 =$ _____
17	$8 \times 11 =$ _____	37	$11 \times 8 =$ _____	57	$7 \times 8 =$ _____
18	$8 \times 4 =$ _____	38	$2 \times 8 =$ _____	58	$2 \times 8 =$ _____
19	$8 \times 7 =$ _____	39	$11 \times 8 =$ _____	59	$12 \times 8 =$ _____
20	$8 \times 6 =$ _____	40	$2 \times 8 =$ _____	60	$8 \times 8 =$ _____

Time taken

:

🕒 3 minute time limit 🕒

Score

60

What's your rock status?

WANNABE

< 18 correct in 3 mins

GARAGE ROCKER

18-19 correct in 3 mins

BUSKER

20-21 correct in 3 mins

GIGGER

22-24 correct in 3 mins

UNSIGNED ACT

25-29 correct in 3 mins

BREAKTHROUGH ARTIST

30-35 correct in 3 mins

SUPPORT ACT

36-44 correct in 3 mins

HEADLINER

45-59 correct in 3 mins

ROCK STAR

All correct in \leq 3mins

ROCK LEGEND

All correct in \leq 2min

ROCK HERO

All correct in \leq 1 min

**TIMES TABLES
ROCK STARS**

Name: _____

Week 8 Session 2

2020-21

3s 4s and 8s

3 a week

Times Tables Rock Stars

8

Times Tables

Licensed to Ashton Vale Primary School

1	$64 \div 8 =$ _____	21	$8 \div 8 =$ _____	41	$88 \div 8 =$ _____
2	$88 \div 8 =$ _____	22	$16 \div 8 =$ _____	42	$40 \div 8 =$ _____
3	$40 \div 8 =$ _____	23	$72 \div 8 =$ _____	43	$32 \div 8 =$ _____
4	$96 \div 8 =$ _____	24	$16 \div 8 =$ _____	44	$88 \div 8 =$ _____
5	$8 \div 8 =$ _____	25	$96 \div 8 =$ _____	45	$88 \div 8 =$ _____
6	$96 \div 8 =$ _____	26	$88 \div 8 =$ _____	46	$72 \div 8 =$ _____
7	$16 \div 8 =$ _____	27	$24 \div 8 =$ _____	47	$56 \div 8 =$ _____
8	$72 \div 8 =$ _____	28	$72 \div 8 =$ _____	48	$80 \div 8 =$ _____
9	$64 \div 8 =$ _____	29	$72 \div 8 =$ _____	49	$96 \div 8 =$ _____
10	$48 \div 8 =$ _____	30	$64 \div 8 =$ _____	50	$80 \div 8 =$ _____
11	$88 \div 8 =$ _____	31	$40 \div 8 =$ _____	51	$16 \div 8 =$ _____
12	$16 \div 8 =$ _____	32	$64 \div 8 =$ _____	52	$88 \div 8 =$ _____
13	$32 \div 8 =$ _____	33	$88 \div 8 =$ _____	53	$56 \div 8 =$ _____
14	$80 \div 8 =$ _____	34	$40 \div 8 =$ _____	54	$56 \div 8 =$ _____
15	$48 \div 8 =$ _____	35	$72 \div 8 =$ _____	55	$40 \div 8 =$ _____
16	$80 \div 8 =$ _____	36	$96 \div 8 =$ _____	56	$48 \div 8 =$ _____
17	$48 \div 8 =$ _____	37	$80 \div 8 =$ _____	57	$16 \div 8 =$ _____
18	$72 \div 8 =$ _____	38	$16 \div 8 =$ _____	58	$40 \div 8 =$ _____
19	$48 \div 8 =$ _____	39	$72 \div 8 =$ _____	59	$16 \div 8 =$ _____
20	$88 \div 8 =$ _____	40	$64 \div 8 =$ _____	60	$88 \div 8 =$ _____

Time taken

:

🕒 3 minute time limit 🕒

Score

60

What's your rock status?

WANNABE

< 18 correct in 3 mins

GARAGE ROCKER

18-19 correct in 3 mins

BUSKER

20-21 correct in 3 mins

GIGGER

22-24 correct in 3 mins

UNSIGNED ACT

25-29 correct in 3 mins

BREAKTHROUGH ARTIST

30-35 correct in 3 mins

SUPPORT ACT

36-44 correct in 3 mins

HEADLINER

45-59 correct in 3 mins

ROCK STAR

All correct in \leq 3mins

ROCK LEGEND

All correct in \leq 2min

ROCK HERO

All correct in \leq 1 min

**TIMES TABLES
ROCK STARS**

Name: _____

Week 8 Session 3

2020-21

3s 4s and 8s

3 a week

Times Tables Rock Stars

8 Times Tables

Licensed to Ashton Vale Primary School

1	$8 \times 5 =$ _____	21	$8 \times 9 =$ _____	41	$96 \div 8 =$ _____
2	$8 \times 3 =$ _____	22	$8 \times 1 =$ _____	42	$72 \div 8 =$ _____
3	$8 \times 12 =$ _____	23	$8 \times 8 =$ _____	43	$24 \div 8 =$ _____
4	$8 \times 11 =$ _____	24	$8 \times 6 =$ _____	44	$16 \div 8 =$ _____
5	$8 \times 12 =$ _____	25	$8 \times 9 =$ _____	45	$64 \div 8 =$ _____
6	$8 \times 5 =$ _____	26	$8 \times 1 =$ _____	46	$32 \div 8 =$ _____
7	$8 \times 4 =$ _____	27	$8 \times 5 =$ _____	47	$48 \div 8 =$ _____
8	$8 \times 4 =$ _____	28	$8 \times 7 =$ _____	48	$56 \div 8 =$ _____
9	$8 \times 8 =$ _____	29	$8 \times 5 =$ _____	49	$96 \div 8 =$ _____
10	$8 \times 12 =$ _____	30	$8 \times 3 =$ _____	50	$48 \div 8 =$ _____
11	$8 \times 11 =$ _____	31	$96 \div 8 =$ _____	51	$48 \div 8 =$ _____
12	$8 \times 1 =$ _____	32	$72 \div 8 =$ _____	52	$80 \div 8 =$ _____
13	$8 \times 1 =$ _____	33	$88 \div 8 =$ _____	53	$8 \div 8 =$ _____
14	$8 \times 7 =$ _____	34	$72 \div 8 =$ _____	54	$24 \div 8 =$ _____
15	$8 \times 4 =$ _____	35	$96 \div 8 =$ _____	55	$80 \div 8 =$ _____
16	$8 \times 3 =$ _____	36	$16 \div 8 =$ _____	56	$40 \div 8 =$ _____
17	$8 \times 5 =$ _____	37	$88 \div 8 =$ _____	57	$96 \div 8 =$ _____
18	$8 \times 11 =$ _____	38	$56 \div 8 =$ _____	58	$80 \div 8 =$ _____
19	$8 \times 11 =$ _____	39	$48 \div 8 =$ _____	59	$32 \div 8 =$ _____
20	$8 \times 10 =$ _____	40	$96 \div 8 =$ _____	60	$96 \div 8 =$ _____

Time taken

:

🕒 3 minute time limit 🕒

Score

60

Add up your time

Mins

S1 _____

S2 _____

S3 _____

Total _____

Secs

S1 _____

S2 _____

S3 _____

Total _____

Add up your score

S1 _____

S2 _____

S3 _____

Total _____

Name: _____

Week 9 Session 1

2020-21

3s 4s and 8s

3 a week

Times Tables Rock Stars

3,4,8 Times Tables

Licensed to Ashton Vale Primary School

1	$4 \times 5 =$ _____	21	$4 \times 11 =$ _____	41	$5 \times 3 =$ _____
2	$8 \times 2 =$ _____	22	$8 \times 7 =$ _____	42	$11 \times 8 =$ _____
3	$3 \times 1 =$ _____	23	$4 \times 7 =$ _____	43	$3 \times 8 =$ _____
4	$8 \times 6 =$ _____	24	$4 \times 10 =$ _____	44	$2 \times 3 =$ _____
5	$8 \times 11 =$ _____	25	$8 \times 1 =$ _____	45	$11 \times 8 =$ _____
6	$3 \times 9 =$ _____	26	$3 \times 8 =$ _____	46	$1 \times 8 =$ _____
7	$4 \times 11 =$ _____	27	$4 \times 10 =$ _____	47	$12 \times 8 =$ _____
8	$4 \times 5 =$ _____	28	$3 \times 10 =$ _____	48	$10 \times 4 =$ _____
9	$8 \times 4 =$ _____	29	$8 \times 11 =$ _____	49	$5 \times 3 =$ _____
10	$3 \times 1 =$ _____	30	$4 \times 1 =$ _____	50	$5 \times 8 =$ _____
11	$3 \times 11 =$ _____	31	$11 \times 4 =$ _____	51	$10 \times 4 =$ _____
12	$8 \times 10 =$ _____	32	$8 \times 8 =$ _____	52	$11 \times 4 =$ _____
13	$4 \times 6 =$ _____	33	$9 \times 4 =$ _____	53	$11 \times 4 =$ _____
14	$8 \times 5 =$ _____	34	$1 \times 3 =$ _____	54	$2 \times 8 =$ _____
15	$4 \times 11 =$ _____	35	$5 \times 3 =$ _____	55	$1 \times 8 =$ _____
16	$4 \times 2 =$ _____	36	$7 \times 3 =$ _____	56	$3 \times 8 =$ _____
17	$3 \times 5 =$ _____	37	$9 \times 4 =$ _____	57	$8 \times 3 =$ _____
18	$3 \times 7 =$ _____	38	$6 \times 8 =$ _____	58	$11 \times 4 =$ _____
19	$8 \times 8 =$ _____	39	$2 \times 3 =$ _____	59	$2 \times 4 =$ _____
20	$3 \times 9 =$ _____	40	$5 \times 8 =$ _____	60	$8 \times 3 =$ _____

Time taken

:

🕒 3 minute time limit 🕒

Score

60

What's your rock status?

WANNABE

< 18 correct in 3 mins

GARAGE ROCKER

18-19 correct in 3 mins

BUSKER

20-21 correct in 3 mins

GIGGER

22-24 correct in 3 mins

UNSIGNED ACT

25-29 correct in 3 mins

BREAKTHROUGH ARTIST

30-35 correct in 3 mins

SUPPORT ACT

36-44 correct in 3 mins

HEADLINER

45-59 correct in 3 mins

ROCK STAR

All correct in \leq 3mins

ROCK LEGEND

All correct in \leq 2min

ROCK HERO

All correct in \leq 1 min

**TIMES TABLES
ROCK STARS**

Name: _____

Week 9 Session 2

2020-21

3s 4s and 8s

3 a week

Times Tables Rock Stars

3,4,8 Times Tables

Licensed to Ashton Vale Primary School

1	$8 \div 4 =$ _____	21	$96 \div 8 =$ _____	41	$4 \div 4 =$ _____
2	$3 \div 3 =$ _____	22	$72 \div 8 =$ _____	42	$32 \div 4 =$ _____
3	$9 \div 3 =$ _____	23	$36 \div 3 =$ _____	43	$12 \div 4 =$ _____
4	$12 \div 4 =$ _____	24	$48 \div 8 =$ _____	44	$48 \div 4 =$ _____
5	$28 \div 4 =$ _____	25	$4 \div 4 =$ _____	45	$24 \div 8 =$ _____
6	$16 \div 4 =$ _____	26	$36 \div 4 =$ _____	46	$56 \div 8 =$ _____
7	$96 \div 8 =$ _____	27	$33 \div 3 =$ _____	47	$16 \div 4 =$ _____
8	$40 \div 8 =$ _____	28	$28 \div 4 =$ _____	48	$8 \div 4 =$ _____
9	$12 \div 3 =$ _____	29	$15 \div 3 =$ _____	49	$16 \div 8 =$ _____
10	$72 \div 8 =$ _____	30	$32 \div 4 =$ _____	50	$64 \div 8 =$ _____
11	$24 \div 4 =$ _____	31	$6 \div 3 =$ _____	51	$6 \div 3 =$ _____
12	$36 \div 4 =$ _____	32	$16 \div 8 =$ _____	52	$48 \div 8 =$ _____
13	$56 \div 8 =$ _____	33	$16 \div 4 =$ _____	53	$9 \div 3 =$ _____
14	$33 \div 3 =$ _____	34	$28 \div 4 =$ _____	54	$36 \div 4 =$ _____
15	$3 \div 3 =$ _____	35	$96 \div 8 =$ _____	55	$12 \div 3 =$ _____
16	$30 \div 3 =$ _____	36	$18 \div 3 =$ _____	56	$32 \div 4 =$ _____
17	$3 \div 3 =$ _____	37	$9 \div 3 =$ _____	57	$40 \div 8 =$ _____
18	$8 \div 4 =$ _____	38	$3 \div 3 =$ _____	58	$32 \div 8 =$ _____
19	$48 \div 8 =$ _____	39	$28 \div 4 =$ _____	59	$32 \div 4 =$ _____
20	$3 \div 3 =$ _____	40	$6 \div 3 =$ _____	60	$32 \div 8 =$ _____

Time taken

:

🕒 3 minute time limit 🕒

Score

60

What's your rock status?

WANNABE

< 18 correct in 3 mins

GARAGE ROCKER

18-19 correct in 3 mins

BUSKER

20-21 correct in 3 mins

GIGGER

22-24 correct in 3 mins

UNSIGNED ACT

25-29 correct in 3 mins

BREAKTHROUGH ARTIST

30-35 correct in 3 mins

SUPPORT ACT

36-44 correct in 3 mins

HEADLINER

45-59 correct in 3 mins

ROCK STAR

All correct in \leq 3mins

ROCK LEGEND

All correct in \leq 2min

ROCK HERO

All correct in \leq 1 min

**TIMES TABLES
ROCK STARS**

Name: _____

Week 9 Session 3

2020-21

3s 4s and 8s

3 a week

Times Tables Rock Stars

3,4,8 Times Tables

Licensed to Ashton Vale Primary School

1	$4 \times 1 =$ _____	21	$3 \times 11 =$ _____	41	$12 \div 3 =$ _____
2	$3 \times 8 =$ _____	22	$8 \times 8 =$ _____	42	$56 \div 8 =$ _____
3	$4 \times 1 =$ _____	23	$4 \times 11 =$ _____	43	$40 \div 4 =$ _____
4	$4 \times 3 =$ _____	24	$4 \times 1 =$ _____	44	$36 \div 4 =$ _____
5	$8 \times 12 =$ _____	25	$8 \times 9 =$ _____	45	$27 \div 3 =$ _____
6	$8 \times 6 =$ _____	26	$8 \times 5 =$ _____	46	$9 \div 3 =$ _____
7	$8 \times 11 =$ _____	27	$4 \times 3 =$ _____	47	$8 \div 8 =$ _____
8	$4 \times 1 =$ _____	28	$4 \times 1 =$ _____	48	$40 \div 8 =$ _____
9	$4 \times 8 =$ _____	29	$8 \times 11 =$ _____	49	$6 \div 3 =$ _____
10	$4 \times 2 =$ _____	30	$8 \times 9 =$ _____	50	$72 \div 8 =$ _____
11	$4 \times 7 =$ _____	31	$64 \div 8 =$ _____	51	$18 \div 3 =$ _____
12	$4 \times 12 =$ _____	32	$8 \div 4 =$ _____	52	$32 \div 8 =$ _____
13	$8 \times 5 =$ _____	33	$24 \div 3 =$ _____	53	$4 \div 4 =$ _____
14	$8 \times 12 =$ _____	34	$15 \div 3 =$ _____	54	$8 \div 8 =$ _____
15	$3 \times 2 =$ _____	35	$9 \div 3 =$ _____	55	$27 \div 3 =$ _____
16	$8 \times 8 =$ _____	36	$64 \div 8 =$ _____	56	$48 \div 4 =$ _____
17	$4 \times 4 =$ _____	37	$96 \div 8 =$ _____	57	$12 \div 3 =$ _____
18	$4 \times 11 =$ _____	38	$48 \div 4 =$ _____	58	$18 \div 3 =$ _____
19	$4 \times 10 =$ _____	39	$40 \div 4 =$ _____	59	$32 \div 4 =$ _____
20	$4 \times 10 =$ _____	40	$9 \div 3 =$ _____	60	$33 \div 3 =$ _____

Time taken

:

🕒 3 minute time limit 🕒

Score

60

Add up your time

Mins

S1 _____

S2 _____

S3 _____

Total _____

Secs

S1 _____

S2 _____

S3 _____

Total _____

Add up your score

S1 _____

S2 _____

S3 _____

Total _____

Name: _____

Week 10 Session 1

2020-21

3s 4s and 8s

3 a week

Times Tables Rock Stars

3,4,8 Times Tables

Licensed to Ashton Vale Primary School

1	$3 \times 8 =$ _____	21	$8 \times 10 =$ _____	41	$6 \times 3 =$ _____
2	$4 \times 9 =$ _____	22	$4 \times 1 =$ _____	42	$11 \times 3 =$ _____
3	$3 \times 3 =$ _____	23	$4 \times 10 =$ _____	43	$10 \times 8 =$ _____
4	$8 \times 3 =$ _____	24	$4 \times 12 =$ _____	44	$4 \times 8 =$ _____
5	$3 \times 8 =$ _____	25	$8 \times 3 =$ _____	45	$6 \times 8 =$ _____
6	$3 \times 3 =$ _____	26	$8 \times 11 =$ _____	46	$2 \times 4 =$ _____
7	$4 \times 12 =$ _____	27	$4 \times 12 =$ _____	47	$5 \times 8 =$ _____
8	$4 \times 6 =$ _____	28	$4 \times 4 =$ _____	48	$10 \times 4 =$ _____
9	$4 \times 8 =$ _____	29	$8 \times 4 =$ _____	49	$9 \times 8 =$ _____
10	$3 \times 8 =$ _____	30	$4 \times 8 =$ _____	50	$1 \times 4 =$ _____
11	$4 \times 12 =$ _____	31	$7 \times 3 =$ _____	51	$9 \times 8 =$ _____
12	$4 \times 1 =$ _____	32	$10 \times 8 =$ _____	52	$9 \times 4 =$ _____
13	$3 \times 5 =$ _____	33	$11 \times 4 =$ _____	53	$2 \times 3 =$ _____
14	$8 \times 10 =$ _____	34	$10 \times 8 =$ _____	54	$6 \times 4 =$ _____
15	$4 \times 2 =$ _____	35	$3 \times 8 =$ _____	55	$12 \times 3 =$ _____
16	$8 \times 8 =$ _____	36	$8 \times 8 =$ _____	56	$9 \times 8 =$ _____
17	$8 \times 2 =$ _____	37	$5 \times 3 =$ _____	57	$2 \times 3 =$ _____
18	$8 \times 10 =$ _____	38	$6 \times 3 =$ _____	58	$7 \times 8 =$ _____
19	$8 \times 7 =$ _____	39	$2 \times 8 =$ _____	59	$11 \times 4 =$ _____
20	$8 \times 11 =$ _____	40	$11 \times 3 =$ _____	60	$11 \times 3 =$ _____

Time taken

:

3 minute time limit

Score

60

What's your rock status?

WANNABE

< 18 correct in 3 mins

GARAGE ROCKER

18-19 correct in 3 mins

BUSKER

20-21 correct in 3 mins

GIGGER

22-24 correct in 3 mins

UNSIGNED ACT

25-29 correct in 3 mins

BREAKTHROUGH ARTIST

30-35 correct in 3 mins

SUPPORT ACT

36-44 correct in 3 mins

HEADLINER

45-59 correct in 3 mins

ROCK STAR

All correct in \leq 3mins

ROCK LEGEND

All correct in \leq 2min

ROCK HERO

All correct in \leq 1 min

**TIMES TABLES
ROCK STARS**

Name: _____

Week 10 Session 2

2020-21

3s 4s and 8s

3 a week

Times Tables Rock Stars

3,4,8 Times Tables

Licensed to Ashton Vale Primary School

1	$24 \div 4 =$ _____	21	$6 \div 3 =$ _____	41	$8 \div 4 =$ _____
2	$48 \div 8 =$ _____	22	$8 \div 8 =$ _____	42	$3 \div 3 =$ _____
3	$44 \div 4 =$ _____	23	$3 \div 3 =$ _____	43	$32 \div 4 =$ _____
4	$18 \div 3 =$ _____	24	$32 \div 8 =$ _____	44	$28 \div 4 =$ _____
5	$6 \div 3 =$ _____	25	$72 \div 8 =$ _____	45	$18 \div 3 =$ _____
6	$27 \div 3 =$ _____	26	$32 \div 4 =$ _____	46	$88 \div 8 =$ _____
7	$4 \div 4 =$ _____	27	$12 \div 3 =$ _____	47	$48 \div 4 =$ _____
8	$12 \div 3 =$ _____	28	$88 \div 8 =$ _____	48	$36 \div 3 =$ _____
9	$40 \div 8 =$ _____	29	$28 \div 4 =$ _____	49	$64 \div 8 =$ _____
10	$88 \div 8 =$ _____	30	$6 \div 3 =$ _____	50	$88 \div 8 =$ _____
11	$12 \div 4 =$ _____	31	$36 \div 4 =$ _____	51	$18 \div 3 =$ _____
12	$4 \div 4 =$ _____	32	$40 \div 4 =$ _____	52	$6 \div 3 =$ _____
13	$21 \div 3 =$ _____	33	$33 \div 3 =$ _____	53	$56 \div 8 =$ _____
14	$36 \div 4 =$ _____	34	$40 \div 8 =$ _____	54	$32 \div 8 =$ _____
15	$24 \div 4 =$ _____	35	$9 \div 3 =$ _____	55	$12 \div 3 =$ _____
16	$20 \div 4 =$ _____	36	$12 \div 3 =$ _____	56	$64 \div 8 =$ _____
17	$15 \div 3 =$ _____	37	$48 \div 4 =$ _____	57	$4 \div 4 =$ _____
18	$48 \div 4 =$ _____	38	$8 \div 4 =$ _____	58	$24 \div 4 =$ _____
19	$15 \div 3 =$ _____	39	$28 \div 4 =$ _____	59	$48 \div 4 =$ _____
20	$24 \div 8 =$ _____	40	$28 \div 4 =$ _____	60	$80 \div 8 =$ _____

Time taken

:

🕒 3 minute time limit 🕒

Score

60

What's your rock status?

WANNABE

< 18 correct in 3 mins

GARAGE ROCKER

18-19 correct in 3 mins

BUSKER

20-21 correct in 3 mins

GIGGER

22-24 correct in 3 mins

UNSIGNED ACT

25-29 correct in 3 mins

BREAKTHROUGH ARTIST

30-35 correct in 3 mins

SUPPORT ACT

36-44 correct in 3 mins

HEADLINER

45-59 correct in 3 mins

ROCK STAR

All correct in \leq 3mins

ROCK LEGEND

All correct in \leq 2min

ROCK HERO

All correct in \leq 1 min

**TIMES TABLES
ROCK STARS**

Name: _____

Week 10 Session 3

2020-21

3s 4s and 8s

3 a week

Times Tables Rock Stars



3,4,8 Times Tables

Licensed to Ashton Vale Primary School

1	$8 \times 11 =$ _____	21	$8 \times 1 =$ _____	41	$27 \div 3 =$ _____
2	$4 \times 7 =$ _____	22	$8 \times 10 =$ _____	42	$27 \div 3 =$ _____
3	$4 \times 10 =$ _____	23	$8 \times 1 =$ _____	43	$44 \div 4 =$ _____
4	$3 \times 4 =$ _____	24	$4 \times 1 =$ _____	44	$20 \div 4 =$ _____
5	$8 \times 6 =$ _____	25	$4 \times 5 =$ _____	45	$27 \div 3 =$ _____
6	$4 \times 5 =$ _____	26	$8 \times 4 =$ _____	46	$40 \div 8 =$ _____
7	$4 \times 1 =$ _____	27	$8 \times 3 =$ _____	47	$20 \div 4 =$ _____
8	$3 \times 8 =$ _____	28	$3 \times 9 =$ _____	48	$48 \div 8 =$ _____
9	$8 \times 2 =$ _____	29	$4 \times 8 =$ _____	49	$30 \div 3 =$ _____
10	$3 \times 11 =$ _____	30	$8 \times 9 =$ _____	50	$8 \div 8 =$ _____
11	$4 \times 2 =$ _____	31	$24 \div 4 =$ _____	51	$8 \div 8 =$ _____
12	$4 \times 4 =$ _____	32	$12 \div 3 =$ _____	52	$36 \div 4 =$ _____
13	$8 \times 10 =$ _____	33	$96 \div 8 =$ _____	53	$40 \div 8 =$ _____
14	$8 \times 2 =$ _____	34	$32 \div 8 =$ _____	54	$64 \div 8 =$ _____
15	$8 \times 12 =$ _____	35	$9 \div 3 =$ _____	55	$16 \div 4 =$ _____
16	$3 \times 10 =$ _____	36	$3 \div 3 =$ _____	56	$20 \div 4 =$ _____
17	$4 \times 11 =$ _____	37	$8 \div 8 =$ _____	57	$40 \div 8 =$ _____
18	$4 \times 12 =$ _____	38	$44 \div 4 =$ _____	58	$96 \div 8 =$ _____
19	$3 \times 12 =$ _____	39	$56 \div 8 =$ _____	59	$40 \div 8 =$ _____
20	$8 \times 11 =$ _____	40	$56 \div 8 =$ _____	60	$8 \div 8 =$ _____

Time taken

:

 3 minute time limit 

Score

60

Add up your time

Mins

S1 _____

S2 _____

S3 _____

Total _____

Secs

S1 _____

S2 _____

S3 _____

Total _____

Add up your score

S1 _____

S2 _____

S3 _____

Total _____

Name: _____

Week 11 Session 1

2020-21

3s 4s and 8s

3 a week

Times Tables Rock Stars

3,4,8 Times Tables

Licensed to Ashton Vale Primary School

1	$4 \times 8 =$ _____	21	$4 \times 8 =$ _____	41	$7 \times 3 =$ _____
2	$4 \times 12 =$ _____	22	$3 \times 12 =$ _____	42	$11 \times 8 =$ _____
3	$3 \times 11 =$ _____	23	$8 \times 11 =$ _____	43	$6 \times 8 =$ _____
4	$8 \times 1 =$ _____	24	$4 \times 6 =$ _____	44	$8 \times 4 =$ _____
5	$3 \times 6 =$ _____	25	$3 \times 7 =$ _____	45	$12 \times 4 =$ _____
6	$4 \times 5 =$ _____	26	$8 \times 12 =$ _____	46	$8 \times 4 =$ _____
7	$4 \times 5 =$ _____	27	$4 \times 11 =$ _____	47	$11 \times 4 =$ _____
8	$3 \times 8 =$ _____	28	$4 \times 12 =$ _____	48	$9 \times 8 =$ _____
9	$4 \times 9 =$ _____	29	$8 \times 3 =$ _____	49	$3 \times 3 =$ _____
10	$4 \times 6 =$ _____	30	$8 \times 4 =$ _____	50	$3 \times 8 =$ _____
11	$3 \times 10 =$ _____	31	$9 \times 8 =$ _____	51	$12 \times 4 =$ _____
12	$8 \times 4 =$ _____	32	$12 \times 3 =$ _____	52	$2 \times 4 =$ _____
13	$8 \times 2 =$ _____	33	$5 \times 8 =$ _____	53	$2 \times 4 =$ _____
14	$3 \times 5 =$ _____	34	$8 \times 4 =$ _____	54	$6 \times 4 =$ _____
15	$8 \times 6 =$ _____	35	$6 \times 4 =$ _____	55	$12 \times 4 =$ _____
16	$4 \times 4 =$ _____	36	$12 \times 4 =$ _____	56	$3 \times 4 =$ _____
17	$3 \times 1 =$ _____	37	$5 \times 4 =$ _____	57	$2 \times 8 =$ _____
18	$4 \times 2 =$ _____	38	$11 \times 4 =$ _____	58	$4 \times 3 =$ _____
19	$8 \times 7 =$ _____	39	$9 \times 8 =$ _____	59	$10 \times 3 =$ _____
20	$8 \times 6 =$ _____	40	$2 \times 3 =$ _____	60	$2 \times 4 =$ _____

Time taken

:

🕒 3 minute time limit 🕒

Score

60

What's your rock status?

WANNABE

< 18 correct in 3 mins

GARAGE ROCKER

18-19 correct in 3 mins

BUSKER

20-21 correct in 3 mins

GIGGER

22-24 correct in 3 mins

UNSIGNED ACT

25-29 correct in 3 mins

BREAKTHROUGH ARTIST

30-35 correct in 3 mins

SUPPORT ACT

36-44 correct in 3 mins

HEADLINER

45-59 correct in 3 mins

ROCK STAR

All correct in \leq 3mins

ROCK LEGEND

All correct in \leq 2min

ROCK HERO

All correct in \leq 1 min

**TIMES TABLES
ROCK STARS**

Name: _____

Week 11 Session 2

2020-21

3s 4s and 8s

3 a week

Times Tables Rock Stars

3,4,8 Times Tables

Licensed to Ashton Vale Primary School

1	$28 \div 4 =$ _____	21	$12 \div 3 =$ _____	41	$32 \div 8 =$ _____
2	$16 \div 8 =$ _____	22	$3 \div 3 =$ _____	42	$24 \div 3 =$ _____
3	$36 \div 4 =$ _____	23	$16 \div 8 =$ _____	43	$27 \div 3 =$ _____
4	$48 \div 4 =$ _____	24	$80 \div 8 =$ _____	44	$44 \div 4 =$ _____
5	$24 \div 8 =$ _____	25	$24 \div 3 =$ _____	45	$6 \div 3 =$ _____
6	$40 \div 8 =$ _____	26	$3 \div 3 =$ _____	46	$21 \div 3 =$ _____
7	$16 \div 8 =$ _____	27	$9 \div 3 =$ _____	47	$16 \div 8 =$ _____
8	$48 \div 4 =$ _____	28	$72 \div 8 =$ _____	48	$4 \div 4 =$ _____
9	$12 \div 3 =$ _____	29	$8 \div 4 =$ _____	49	$32 \div 8 =$ _____
10	$32 \div 8 =$ _____	30	$24 \div 8 =$ _____	50	$36 \div 3 =$ _____
11	$12 \div 4 =$ _____	31	$24 \div 3 =$ _____	51	$30 \div 3 =$ _____
12	$40 \div 8 =$ _____	32	$15 \div 3 =$ _____	52	$6 \div 3 =$ _____
13	$56 \div 8 =$ _____	33	$16 \div 8 =$ _____	53	$32 \div 4 =$ _____
14	$36 \div 4 =$ _____	34	$36 \div 3 =$ _____	54	$8 \div 4 =$ _____
15	$40 \div 4 =$ _____	35	$24 \div 3 =$ _____	55	$16 \div 8 =$ _____
16	$8 \div 8 =$ _____	36	$72 \div 8 =$ _____	56	$96 \div 8 =$ _____
17	$32 \div 8 =$ _____	37	$88 \div 8 =$ _____	57	$24 \div 4 =$ _____
18	$56 \div 8 =$ _____	38	$80 \div 8 =$ _____	58	$24 \div 8 =$ _____
19	$64 \div 8 =$ _____	39	$16 \div 8 =$ _____	59	$48 \div 8 =$ _____
20	$8 \div 4 =$ _____	40	$24 \div 4 =$ _____	60	$18 \div 3 =$ _____

Time taken

:

🕒 3 minute time limit 🕒

Score

60

What's your rock status?

WANNABE

< 18 correct in 3 mins

GARAGE ROCKER

18-19 correct in 3 mins

BUSKER

20-21 correct in 3 mins

GIGGER

22-24 correct in 3 mins

UNSIGNED ACT

25-29 correct in 3 mins

BREAKTHROUGH ARTIST

30-35 correct in 3 mins

SUPPORT ACT

36-44 correct in 3 mins

HEADLINER

45-59 correct in 3 mins

ROCK STAR

All correct in \leq 3mins

ROCK LEGEND

All correct in \leq 2min

ROCK HERO

All correct in \leq 1 min

**TIMES TABLES
ROCK STARS**

Name: _____

Week 11 Session 3

2020-21

3s 4s and 8s

3 a week

Times Tables Rock Stars

3,4,8 Times Tables

Licensed to Ashton Vale Primary School

1	$4 \times 3 =$ _____	21	$3 \times 6 =$ _____	41	$18 \div 3 =$ _____
2	$3 \times 4 =$ _____	22	$3 \times 1 =$ _____	42	$72 \div 8 =$ _____
3	$8 \times 11 =$ _____	23	$4 \times 5 =$ _____	43	$33 \div 3 =$ _____
4	$3 \times 1 =$ _____	24	$8 \times 2 =$ _____	44	$32 \div 4 =$ _____
5	$3 \times 12 =$ _____	25	$8 \times 4 =$ _____	45	$8 \div 4 =$ _____
6	$8 \times 7 =$ _____	26	$4 \times 12 =$ _____	46	$28 \div 4 =$ _____
7	$8 \times 11 =$ _____	27	$4 \times 3 =$ _____	47	$24 \div 3 =$ _____
8	$3 \times 4 =$ _____	28	$8 \times 6 =$ _____	48	$8 \div 8 =$ _____
9	$3 \times 4 =$ _____	29	$8 \times 11 =$ _____	49	$20 \div 4 =$ _____
10	$8 \times 2 =$ _____	30	$4 \times 9 =$ _____	50	$72 \div 8 =$ _____
11	$8 \times 7 =$ _____	31	$72 \div 8 =$ _____	51	$32 \div 4 =$ _____
12	$4 \times 7 =$ _____	32	$27 \div 3 =$ _____	52	$8 \div 4 =$ _____
13	$8 \times 1 =$ _____	33	$48 \div 8 =$ _____	53	$64 \div 8 =$ _____
14	$8 \times 11 =$ _____	34	$28 \div 4 =$ _____	54	$56 \div 8 =$ _____
15	$4 \times 12 =$ _____	35	$9 \div 3 =$ _____	55	$48 \div 8 =$ _____
16	$3 \times 1 =$ _____	36	$32 \div 4 =$ _____	56	$40 \div 4 =$ _____
17	$3 \times 11 =$ _____	37	$28 \div 4 =$ _____	57	$24 \div 4 =$ _____
18	$3 \times 6 =$ _____	38	$6 \div 3 =$ _____	58	$9 \div 3 =$ _____
19	$4 \times 7 =$ _____	39	$88 \div 8 =$ _____	59	$56 \div 8 =$ _____
20	$3 \times 2 =$ _____	40	$40 \div 8 =$ _____	60	$16 \div 4 =$ _____

Time taken

:

🕒 3 minute time limit 🕒

Score

60

Add up your time

Mins
S1 _____
S2 _____
S3 _____
Total _____

Secs
S1 _____
S2 _____
S3 _____
Total _____

Add up your score
S1 _____
S2 _____
S3 _____
Total _____

Name: _____

Week 12 Session 1

2020-21

3s 4s and 8s

3 a week

**Times Tables
Rock Stars**

**3
Times Tables**

Licensed to Ashton Vale Primary School

1	$3 \times 8 =$ _____	21	$3 \times 5 =$ _____	41	$4 \times 3 =$ _____
2	$3 \times 8 =$ _____	22	$3 \times 6 =$ _____	42	$2 \times 3 =$ _____
3	$3 \times 11 =$ _____	23	$3 \times 11 =$ _____	43	$8 \times 3 =$ _____
4	$3 \times 4 =$ _____	24	$3 \times 9 =$ _____	44	$6 \times 3 =$ _____
5	$3 \times 12 =$ _____	25	$3 \times 5 =$ _____	45	$12 \times 3 =$ _____
6	$3 \times 1 =$ _____	26	$3 \times 5 =$ _____	46	$12 \times 3 =$ _____
7	$3 \times 6 =$ _____	27	$3 \times 2 =$ _____	47	$3 \times 3 =$ _____
8	$3 \times 11 =$ _____	28	$3 \times 2 =$ _____	48	$10 \times 3 =$ _____
9	$3 \times 4 =$ _____	29	$3 \times 7 =$ _____	49	$9 \times 3 =$ _____
10	$3 \times 10 =$ _____	30	$3 \times 5 =$ _____	50	$8 \times 3 =$ _____
11	$3 \times 11 =$ _____	31	$2 \times 3 =$ _____	51	$7 \times 3 =$ _____
12	$3 \times 1 =$ _____	32	$2 \times 3 =$ _____	52	$3 \times 3 =$ _____
13	$3 \times 2 =$ _____	33	$7 \times 3 =$ _____	53	$4 \times 3 =$ _____
14	$3 \times 7 =$ _____	34	$8 \times 3 =$ _____	54	$4 \times 3 =$ _____
15	$3 \times 1 =$ _____	35	$2 \times 3 =$ _____	55	$4 \times 3 =$ _____
16	$3 \times 10 =$ _____	36	$5 \times 3 =$ _____	56	$1 \times 3 =$ _____
17	$3 \times 1 =$ _____	37	$11 \times 3 =$ _____	57	$5 \times 3 =$ _____
18	$3 \times 5 =$ _____	38	$11 \times 3 =$ _____	58	$1 \times 3 =$ _____
19	$3 \times 4 =$ _____	39	$1 \times 3 =$ _____	59	$9 \times 3 =$ _____
20	$3 \times 5 =$ _____	40	$7 \times 3 =$ _____	60	$1 \times 3 =$ _____

Time taken

:

3 minute time limit

Score

60

What's your rock status?

WANNABE

< 18 correct in 3 mins

GARAGE ROCKER

18-19 correct in 3 mins

BUSKER

20-21 correct in 3 mins

GIGGER

22-24 correct in 3 mins

UNSIGNED ACT

25-29 correct in 3 mins

BREAKTHROUGH ARTIST

30-35 correct in 3 mins

SUPPORT ACT

36-44 correct in 3 mins

HEADLINER

45-59 correct in 3 mins

ROCK STAR

All correct in \leq 3mins

ROCK LEGEND

All correct in \leq 2min

ROCK HERO

All correct in \leq 1 min

**TIMES TABLES
ROCK STARS**

Name: _____

Week 12 Session 2

2020-21

3s 4s and 8s

3 a week

Times Tables Rock Stars

3 Times Tables

Licensed to Ashton Vale Primary School

1	$6 \div 3 =$ _____	21	$27 \div 3 =$ _____	41	$36 \div 3 =$ _____
2	$3 \div 3 =$ _____	22	$12 \div 3 =$ _____	42	$21 \div 3 =$ _____
3	$33 \div 3 =$ _____	23	$27 \div 3 =$ _____	43	$6 \div 3 =$ _____
4	$18 \div 3 =$ _____	24	$30 \div 3 =$ _____	44	$30 \div 3 =$ _____
5	$27 \div 3 =$ _____	25	$30 \div 3 =$ _____	45	$3 \div 3 =$ _____
6	$6 \div 3 =$ _____	26	$36 \div 3 =$ _____	46	$21 \div 3 =$ _____
7	$33 \div 3 =$ _____	27	$24 \div 3 =$ _____	47	$21 \div 3 =$ _____
8	$6 \div 3 =$ _____	28	$9 \div 3 =$ _____	48	$9 \div 3 =$ _____
9	$9 \div 3 =$ _____	29	$27 \div 3 =$ _____	49	$36 \div 3 =$ _____
10	$3 \div 3 =$ _____	30	$6 \div 3 =$ _____	50	$24 \div 3 =$ _____
11	$12 \div 3 =$ _____	31	$9 \div 3 =$ _____	51	$12 \div 3 =$ _____
12	$9 \div 3 =$ _____	32	$36 \div 3 =$ _____	52	$18 \div 3 =$ _____
13	$15 \div 3 =$ _____	33	$36 \div 3 =$ _____	53	$36 \div 3 =$ _____
14	$27 \div 3 =$ _____	34	$18 \div 3 =$ _____	54	$36 \div 3 =$ _____
15	$21 \div 3 =$ _____	35	$24 \div 3 =$ _____	55	$30 \div 3 =$ _____
16	$33 \div 3 =$ _____	36	$33 \div 3 =$ _____	56	$21 \div 3 =$ _____
17	$33 \div 3 =$ _____	37	$9 \div 3 =$ _____	57	$15 \div 3 =$ _____
18	$9 \div 3 =$ _____	38	$12 \div 3 =$ _____	58	$24 \div 3 =$ _____
19	$12 \div 3 =$ _____	39	$3 \div 3 =$ _____	59	$27 \div 3 =$ _____
20	$24 \div 3 =$ _____	40	$15 \div 3 =$ _____	60	$33 \div 3 =$ _____

Time taken

:

🕒 3 minute time limit 🕒

Score

60

What's your rock status?

WANNABE

< 18 correct in 3 mins

GARAGE ROCKER

18-19 correct in 3 mins

BUSKER

20-21 correct in 3 mins

GIGGER

22-24 correct in 3 mins

UNSIGNED ACT

25-29 correct in 3 mins

BREAKTHROUGH ARTIST

30-35 correct in 3 mins

SUPPORT ACT

36-44 correct in 3 mins

HEADLINER

45-59 correct in 3 mins

ROCK STAR

All correct in ≤ 3 mins

ROCK LEGEND

All correct in ≤ 2 min

ROCK HERO

All correct in ≤ 1 min

**TIMES TABLES
ROCK STARS**

Name: _____

Week 12 Session 3

2020-21

3s 4s and 8s

3 a week

Times Tables Rock Stars

3 Times Tables

Licensed to Ashton Vale Primary School

1	$3 \times 10 =$ _____	21	$3 \times 6 =$ _____	41	$36 \div 3 =$ _____
2	$3 \times 10 =$ _____	22	$3 \times 10 =$ _____	42	$36 \div 3 =$ _____
3	$3 \times 5 =$ _____	23	$3 \times 11 =$ _____	43	$33 \div 3 =$ _____
4	$3 \times 2 =$ _____	24	$3 \times 4 =$ _____	44	$33 \div 3 =$ _____
5	$3 \times 12 =$ _____	25	$3 \times 4 =$ _____	45	$36 \div 3 =$ _____
6	$3 \times 1 =$ _____	26	$3 \times 6 =$ _____	46	$6 \div 3 =$ _____
7	$3 \times 11 =$ _____	27	$3 \times 1 =$ _____	47	$9 \div 3 =$ _____
8	$3 \times 3 =$ _____	28	$3 \times 5 =$ _____	48	$3 \div 3 =$ _____
9	$3 \times 1 =$ _____	29	$3 \times 6 =$ _____	49	$30 \div 3 =$ _____
10	$3 \times 12 =$ _____	30	$3 \times 2 =$ _____	50	$9 \div 3 =$ _____
11	$3 \times 8 =$ _____	31	$27 \div 3 =$ _____	51	$33 \div 3 =$ _____
12	$3 \times 4 =$ _____	32	$12 \div 3 =$ _____	52	$6 \div 3 =$ _____
13	$3 \times 2 =$ _____	33	$33 \div 3 =$ _____	53	$24 \div 3 =$ _____
14	$3 \times 9 =$ _____	34	$6 \div 3 =$ _____	54	$6 \div 3 =$ _____
15	$3 \times 8 =$ _____	35	$3 \div 3 =$ _____	55	$18 \div 3 =$ _____
16	$3 \times 12 =$ _____	36	$27 \div 3 =$ _____	56	$12 \div 3 =$ _____
17	$3 \times 2 =$ _____	37	$36 \div 3 =$ _____	57	$18 \div 3 =$ _____
18	$3 \times 8 =$ _____	38	$36 \div 3 =$ _____	58	$30 \div 3 =$ _____
19	$3 \times 9 =$ _____	39	$21 \div 3 =$ _____	59	$6 \div 3 =$ _____
20	$3 \times 11 =$ _____	40	$18 \div 3 =$ _____	60	$9 \div 3 =$ _____

Time taken

:

🕒 3 minute time limit 🕒

Score

60

Add up your time

Mins	
S1	_____
S2	_____
S3	_____
Total	_____

Secs	
S1	_____
S2	_____
S3	_____
Total	_____

Add up your score	
S1	_____
S2	_____
S3	_____
Total	_____

Name: _____

Week 13 Session 1

2020-21

3s 4s and 8s

3 a week

Times Tables Rock Stars

3

Times Tables

Licensed to Ashton Vale Primary School

1	$3 \times 11 =$ _____	21	$3 \times 12 =$ _____	41	$1 \times 3 =$ _____
2	$3 \times 12 =$ _____	22	$3 \times 10 =$ _____	42	$11 \times 3 =$ _____
3	$3 \times 9 =$ _____	23	$3 \times 1 =$ _____	43	$6 \times 3 =$ _____
4	$3 \times 7 =$ _____	24	$3 \times 4 =$ _____	44	$11 \times 3 =$ _____
5	$3 \times 2 =$ _____	25	$3 \times 12 =$ _____	45	$9 \times 3 =$ _____
6	$3 \times 3 =$ _____	26	$3 \times 12 =$ _____	46	$11 \times 3 =$ _____
7	$3 \times 10 =$ _____	27	$3 \times 3 =$ _____	47	$7 \times 3 =$ _____
8	$3 \times 9 =$ _____	28	$3 \times 5 =$ _____	48	$5 \times 3 =$ _____
9	$3 \times 8 =$ _____	29	$3 \times 12 =$ _____	49	$9 \times 3 =$ _____
10	$3 \times 1 =$ _____	30	$3 \times 8 =$ _____	50	$11 \times 3 =$ _____
11	$3 \times 11 =$ _____	31	$2 \times 3 =$ _____	51	$7 \times 3 =$ _____
12	$3 \times 3 =$ _____	32	$6 \times 3 =$ _____	52	$10 \times 3 =$ _____
13	$3 \times 10 =$ _____	33	$9 \times 3 =$ _____	53	$10 \times 3 =$ _____
14	$3 \times 7 =$ _____	34	$7 \times 3 =$ _____	54	$7 \times 3 =$ _____
15	$3 \times 1 =$ _____	35	$8 \times 3 =$ _____	55	$10 \times 3 =$ _____
16	$3 \times 2 =$ _____	36	$6 \times 3 =$ _____	56	$5 \times 3 =$ _____
17	$3 \times 6 =$ _____	37	$11 \times 3 =$ _____	57	$7 \times 3 =$ _____
18	$3 \times 12 =$ _____	38	$5 \times 3 =$ _____	58	$2 \times 3 =$ _____
19	$3 \times 1 =$ _____	39	$4 \times 3 =$ _____	59	$5 \times 3 =$ _____
20	$3 \times 3 =$ _____	40	$12 \times 3 =$ _____	60	$8 \times 3 =$ _____

Time taken

:

🕒 3 minute time limit 🕒

Score

60

What's your rock status?

WANNABE

< 18 correct in 3 mins

GARAGE ROCKER

18-19 correct in 3 mins

BUSKER

20-21 correct in 3 mins

GIGGER

22-24 correct in 3 mins

UNSIGNED ACT

25-29 correct in 3 mins

BREAKTHROUGH ARTIST

30-35 correct in 3 mins

SUPPORT ACT

36-44 correct in 3 mins

HEADLINER

45-59 correct in 3 mins

ROCK STAR

All correct in ≤ 3 mins

ROCK LEGEND

All correct in ≤ 2 min

ROCK HERO

All correct in ≤ 1 min

**TIMES TABLES
ROCK STARS**

Name: _____

Week 13 Session 2

2020-21

3s 4s and 8s

3 a week

Times Tables Rock Stars

3

Times Tables

Licensed to Ashton Vale Primary School

1	$3 \div 3 =$ _____	21	$24 \div 3 =$ _____	41	$27 \div 3 =$ _____
2	$15 \div 3 =$ _____	22	$3 \div 3 =$ _____	42	$36 \div 3 =$ _____
3	$18 \div 3 =$ _____	23	$15 \div 3 =$ _____	43	$15 \div 3 =$ _____
4	$30 \div 3 =$ _____	24	$3 \div 3 =$ _____	44	$33 \div 3 =$ _____
5	$24 \div 3 =$ _____	25	$18 \div 3 =$ _____	45	$27 \div 3 =$ _____
6	$18 \div 3 =$ _____	26	$12 \div 3 =$ _____	46	$33 \div 3 =$ _____
7	$24 \div 3 =$ _____	27	$30 \div 3 =$ _____	47	$24 \div 3 =$ _____
8	$36 \div 3 =$ _____	28	$21 \div 3 =$ _____	48	$30 \div 3 =$ _____
9	$15 \div 3 =$ _____	29	$3 \div 3 =$ _____	49	$12 \div 3 =$ _____
10	$15 \div 3 =$ _____	30	$36 \div 3 =$ _____	50	$27 \div 3 =$ _____
11	$3 \div 3 =$ _____	31	$3 \div 3 =$ _____	51	$33 \div 3 =$ _____
12	$30 \div 3 =$ _____	32	$12 \div 3 =$ _____	52	$24 \div 3 =$ _____
13	$21 \div 3 =$ _____	33	$36 \div 3 =$ _____	53	$18 \div 3 =$ _____
14	$6 \div 3 =$ _____	34	$33 \div 3 =$ _____	54	$21 \div 3 =$ _____
15	$24 \div 3 =$ _____	35	$18 \div 3 =$ _____	55	$27 \div 3 =$ _____
16	$30 \div 3 =$ _____	36	$15 \div 3 =$ _____	56	$9 \div 3 =$ _____
17	$33 \div 3 =$ _____	37	$24 \div 3 =$ _____	57	$24 \div 3 =$ _____
18	$36 \div 3 =$ _____	38	$21 \div 3 =$ _____	58	$36 \div 3 =$ _____
19	$12 \div 3 =$ _____	39	$33 \div 3 =$ _____	59	$15 \div 3 =$ _____
20	$12 \div 3 =$ _____	40	$18 \div 3 =$ _____	60	$6 \div 3 =$ _____

Time taken

:

🕒 3 minute time limit 🕒

Score

60

What's your rock status?

WANNABE

< 18 correct in 3 mins

GARAGE ROCKER

18-19 correct in 3 mins

BUSKER

20-21 correct in 3 mins

GIGGER

22-24 correct in 3 mins

UNSIGNED ACT

25-29 correct in 3 mins

BREAKTHROUGH ARTIST

30-35 correct in 3 mins

SUPPORT ACT

36-44 correct in 3 mins

HEADLINER

45-59 correct in 3 mins

ROCK STAR

All correct in ≤ 3 mins

ROCK LEGEND

All correct in ≤ 2 min

ROCK HERO

All correct in ≤ 1 min

**TIMES TABLES
ROCK STARS**

Name: _____

Week 13 Session 3

2020-21

3s 4s and 8s

3 a week

Times Tables Rock Stars

3 Times Tables

Licensed to Ashton Vale Primary School

1	$3 \times 10 =$ _____	21	$3 \times 5 =$ _____	41	$6 \div 3 =$ _____
2	$3 \times 11 =$ _____	22	$3 \times 7 =$ _____	42	$30 \div 3 =$ _____
3	$3 \times 9 =$ _____	23	$3 \times 5 =$ _____	43	$21 \div 3 =$ _____
4	$3 \times 2 =$ _____	24	$3 \times 8 =$ _____	44	$36 \div 3 =$ _____
5	$3 \times 9 =$ _____	25	$3 \times 1 =$ _____	45	$27 \div 3 =$ _____
6	$3 \times 9 =$ _____	26	$3 \times 12 =$ _____	46	$24 \div 3 =$ _____
7	$3 \times 1 =$ _____	27	$3 \times 11 =$ _____	47	$3 \div 3 =$ _____
8	$3 \times 4 =$ _____	28	$3 \times 6 =$ _____	48	$30 \div 3 =$ _____
9	$3 \times 9 =$ _____	29	$3 \times 12 =$ _____	49	$27 \div 3 =$ _____
10	$3 \times 9 =$ _____	30	$3 \times 5 =$ _____	50	$21 \div 3 =$ _____
11	$3 \times 3 =$ _____	31	$33 \div 3 =$ _____	51	$12 \div 3 =$ _____
12	$3 \times 10 =$ _____	32	$21 \div 3 =$ _____	52	$9 \div 3 =$ _____
13	$3 \times 1 =$ _____	33	$36 \div 3 =$ _____	53	$9 \div 3 =$ _____
14	$3 \times 4 =$ _____	34	$27 \div 3 =$ _____	54	$15 \div 3 =$ _____
15	$3 \times 1 =$ _____	35	$15 \div 3 =$ _____	55	$30 \div 3 =$ _____
16	$3 \times 12 =$ _____	36	$27 \div 3 =$ _____	56	$3 \div 3 =$ _____
17	$3 \times 10 =$ _____	37	$6 \div 3 =$ _____	57	$9 \div 3 =$ _____
18	$3 \times 5 =$ _____	38	$24 \div 3 =$ _____	58	$6 \div 3 =$ _____
19	$3 \times 8 =$ _____	39	$3 \div 3 =$ _____	59	$36 \div 3 =$ _____
20	$3 \times 9 =$ _____	40	$9 \div 3 =$ _____	60	$12 \div 3 =$ _____

Time taken

:

🕒 3 minute time limit 🕒

Score

60

Add up your time

Mins

S1 _____

S2 _____

S3 _____

Total _____

Secs

S1 _____

S2 _____

S3 _____

Total _____

Add up your score

S1 _____

S2 _____

S3 _____

Total _____

Name: _____

Week 14 Session 1

2020-21

3s 4s and 8s

3 a week

Times Tables Rock Stars

4



Times Tables

Licensed to Ashton Vale Primary School

1	$4 \times 9 =$ _____	21	$4 \times 8 =$ _____	41	$7 \times 4 =$ _____
2	$4 \times 9 =$ _____	22	$4 \times 10 =$ _____	42	$1 \times 4 =$ _____
3	$4 \times 6 =$ _____	23	$4 \times 7 =$ _____	43	$5 \times 4 =$ _____
4	$4 \times 2 =$ _____	24	$4 \times 11 =$ _____	44	$1 \times 4 =$ _____
5	$4 \times 11 =$ _____	25	$4 \times 7 =$ _____	45	$6 \times 4 =$ _____
6	$4 \times 1 =$ _____	26	$4 \times 1 =$ _____	46	$11 \times 4 =$ _____
7	$4 \times 6 =$ _____	27	$4 \times 2 =$ _____	47	$9 \times 4 =$ _____
8	$4 \times 12 =$ _____	28	$4 \times 7 =$ _____	48	$11 \times 4 =$ _____
9	$4 \times 11 =$ _____	29	$4 \times 1 =$ _____	49	$2 \times 4 =$ _____
10	$4 \times 3 =$ _____	30	$4 \times 5 =$ _____	50	$8 \times 4 =$ _____
11	$4 \times 10 =$ _____	31	$1 \times 4 =$ _____	51	$3 \times 4 =$ _____
12	$4 \times 12 =$ _____	32	$9 \times 4 =$ _____	52	$1 \times 4 =$ _____
13	$4 \times 2 =$ _____	33	$6 \times 4 =$ _____	53	$4 \times 4 =$ _____
14	$4 \times 4 =$ _____	34	$3 \times 4 =$ _____	54	$4 \times 4 =$ _____
15	$4 \times 1 =$ _____	35	$3 \times 4 =$ _____	55	$11 \times 4 =$ _____
16	$4 \times 12 =$ _____	36	$3 \times 4 =$ _____	56	$2 \times 4 =$ _____
17	$4 \times 4 =$ _____	37	$8 \times 4 =$ _____	57	$6 \times 4 =$ _____
18	$4 \times 8 =$ _____	38	$3 \times 4 =$ _____	58	$9 \times 4 =$ _____
19	$4 \times 1 =$ _____	39	$3 \times 4 =$ _____	59	$7 \times 4 =$ _____
20	$4 \times 10 =$ _____	40	$10 \times 4 =$ _____	60	$7 \times 4 =$ _____

Time taken

:

 3 minute time limit 

Score

60

What's your rock status?

WANNABE

< 18 correct in 3 mins

GARAGE ROCKER

18-19 correct in 3 mins

BUSKER

20-21 correct in 3 mins

GIGGER

22-24 correct in 3 mins

UNSIGNED ACT

25-29 correct in 3 mins

BREAKTHROUGH ARTIST

30-35 correct in 3 mins

SUPPORT ACT

36-44 correct in 3 mins

HEADLINER

45-59 correct in 3 mins

ROCK STAR

All correct in \leq 3mins

ROCK LEGEND

All correct in \leq 2min

ROCK HERO

All correct in \leq 1 min

**TIMES TABLES
ROCK STARS**

Name: _____

Week 14 Session 2

2020-21

3s 4s and 8s

3 a week

Times Tables Rock Stars

4

Times Tables

Licensed to Ashton Vale Primary School

1	$12 \div 4 =$ _____	21	$28 \div 4 =$ _____	41	$28 \div 4 =$ _____
2	$36 \div 4 =$ _____	22	$32 \div 4 =$ _____	42	$32 \div 4 =$ _____
3	$32 \div 4 =$ _____	23	$48 \div 4 =$ _____	43	$24 \div 4 =$ _____
4	$28 \div 4 =$ _____	24	$36 \div 4 =$ _____	44	$40 \div 4 =$ _____
5	$24 \div 4 =$ _____	25	$32 \div 4 =$ _____	45	$44 \div 4 =$ _____
6	$4 \div 4 =$ _____	26	$40 \div 4 =$ _____	46	$40 \div 4 =$ _____
7	$44 \div 4 =$ _____	27	$44 \div 4 =$ _____	47	$44 \div 4 =$ _____
8	$40 \div 4 =$ _____	28	$36 \div 4 =$ _____	48	$36 \div 4 =$ _____
9	$40 \div 4 =$ _____	29	$8 \div 4 =$ _____	49	$4 \div 4 =$ _____
10	$32 \div 4 =$ _____	30	$44 \div 4 =$ _____	50	$8 \div 4 =$ _____
11	$24 \div 4 =$ _____	31	$36 \div 4 =$ _____	51	$4 \div 4 =$ _____
12	$44 \div 4 =$ _____	32	$8 \div 4 =$ _____	52	$36 \div 4 =$ _____
13	$48 \div 4 =$ _____	33	$40 \div 4 =$ _____	53	$20 \div 4 =$ _____
14	$4 \div 4 =$ _____	34	$20 \div 4 =$ _____	54	$20 \div 4 =$ _____
15	$36 \div 4 =$ _____	35	$12 \div 4 =$ _____	55	$12 \div 4 =$ _____
16	$24 \div 4 =$ _____	36	$4 \div 4 =$ _____	56	$8 \div 4 =$ _____
17	$36 \div 4 =$ _____	37	$44 \div 4 =$ _____	57	$4 \div 4 =$ _____
18	$12 \div 4 =$ _____	38	$32 \div 4 =$ _____	58	$4 \div 4 =$ _____
19	$44 \div 4 =$ _____	39	$4 \div 4 =$ _____	59	$36 \div 4 =$ _____
20	$40 \div 4 =$ _____	40	$32 \div 4 =$ _____	60	$20 \div 4 =$ _____

Time taken

:

🕒 3 minute time limit 🕒

Score

60

What's your rock status?

WANNABE

< 18 correct in 3 mins

GARAGE ROCKER

18-19 correct in 3 mins

BUSKER

20-21 correct in 3 mins

GIGGER

22-24 correct in 3 mins

UNSIGNED ACT

25-29 correct in 3 mins

BREAKTHROUGH ARTIST

30-35 correct in 3 mins

SUPPORT ACT

36-44 correct in 3 mins

HEADLINER

45-59 correct in 3 mins

ROCK STAR

All correct in \leq 3mins

ROCK LEGEND

All correct in \leq 2min

ROCK HERO

All correct in \leq 1 min

**TIMES TABLES
ROCK STARS**

Name: _____

Week 14 Session 3

2020-21

3s 4s and 8s

3 a week

**Times Tables
Rock Stars**

4



Times Tables

Licensed to Ashton Vale Primary School

1	$4 \times 7 =$ _____	21	$4 \times 2 =$ _____	41	$24 \div 4 =$ _____
2	$4 \times 4 =$ _____	22	$4 \times 11 =$ _____	42	$28 \div 4 =$ _____
3	$4 \times 12 =$ _____	23	$4 \times 1 =$ _____	43	$36 \div 4 =$ _____
4	$4 \times 6 =$ _____	24	$4 \times 11 =$ _____	44	$44 \div 4 =$ _____
5	$4 \times 2 =$ _____	25	$4 \times 2 =$ _____	45	$44 \div 4 =$ _____
6	$4 \times 6 =$ _____	26	$4 \times 10 =$ _____	46	$44 \div 4 =$ _____
7	$4 \times 9 =$ _____	27	$4 \times 12 =$ _____	47	$20 \div 4 =$ _____
8	$4 \times 10 =$ _____	28	$4 \times 2 =$ _____	48	$12 \div 4 =$ _____
9	$4 \times 10 =$ _____	29	$4 \times 12 =$ _____	49	$48 \div 4 =$ _____
10	$4 \times 10 =$ _____	30	$4 \times 11 =$ _____	50	$16 \div 4 =$ _____
11	$4 \times 7 =$ _____	31	$24 \div 4 =$ _____	51	$12 \div 4 =$ _____
12	$4 \times 11 =$ _____	32	$32 \div 4 =$ _____	52	$44 \div 4 =$ _____
13	$4 \times 9 =$ _____	33	$4 \div 4 =$ _____	53	$44 \div 4 =$ _____
14	$4 \times 4 =$ _____	34	$28 \div 4 =$ _____	54	$44 \div 4 =$ _____
15	$4 \times 7 =$ _____	35	$28 \div 4 =$ _____	55	$12 \div 4 =$ _____
16	$4 \times 12 =$ _____	36	$4 \div 4 =$ _____	56	$4 \div 4 =$ _____
17	$4 \times 5 =$ _____	37	$32 \div 4 =$ _____	57	$12 \div 4 =$ _____
18	$4 \times 3 =$ _____	38	$4 \div 4 =$ _____	58	$44 \div 4 =$ _____
19	$4 \times 9 =$ _____	39	$12 \div 4 =$ _____	59	$24 \div 4 =$ _____
20	$4 \times 10 =$ _____	40	$24 \div 4 =$ _____	60	$12 \div 4 =$ _____

Time taken

:

 3 minute time limit 

Score

60

Add up your time

Mins

S1 _____

S2 _____

S3 _____

Total _____

Secs

S1 _____

S2 _____

S3 _____

Total _____

Add up your score

S1 _____

S2 _____

S3 _____

Total _____

Name: _____

Week 15 Session 1

2020-21

3s 4s and 8s

3 a week

Times Tables Rock Stars

4

Times Tables

Licensed to Ashton Vale Primary School

1	$4 \times 10 =$ _____	21	$4 \times 4 =$ _____	41	$9 \times 4 =$ _____
2	$4 \times 4 =$ _____	22	$4 \times 9 =$ _____	42	$3 \times 4 =$ _____
3	$4 \times 6 =$ _____	23	$4 \times 2 =$ _____	43	$3 \times 4 =$ _____
4	$4 \times 2 =$ _____	24	$4 \times 6 =$ _____	44	$12 \times 4 =$ _____
5	$4 \times 2 =$ _____	25	$4 \times 11 =$ _____	45	$8 \times 4 =$ _____
6	$4 \times 9 =$ _____	26	$4 \times 11 =$ _____	46	$1 \times 4 =$ _____
7	$4 \times 12 =$ _____	27	$4 \times 4 =$ _____	47	$9 \times 4 =$ _____
8	$4 \times 1 =$ _____	28	$4 \times 3 =$ _____	48	$11 \times 4 =$ _____
9	$4 \times 11 =$ _____	29	$4 \times 10 =$ _____	49	$10 \times 4 =$ _____
10	$4 \times 4 =$ _____	30	$4 \times 7 =$ _____	50	$3 \times 4 =$ _____
11	$4 \times 4 =$ _____	31	$2 \times 4 =$ _____	51	$1 \times 4 =$ _____
12	$4 \times 4 =$ _____	32	$5 \times 4 =$ _____	52	$11 \times 4 =$ _____
13	$4 \times 10 =$ _____	33	$2 \times 4 =$ _____	53	$5 \times 4 =$ _____
14	$4 \times 10 =$ _____	34	$4 \times 4 =$ _____	54	$6 \times 4 =$ _____
15	$4 \times 2 =$ _____	35	$2 \times 4 =$ _____	55	$4 \times 4 =$ _____
16	$4 \times 7 =$ _____	36	$10 \times 4 =$ _____	56	$11 \times 4 =$ _____
17	$4 \times 7 =$ _____	37	$8 \times 4 =$ _____	57	$11 \times 4 =$ _____
18	$4 \times 2 =$ _____	38	$3 \times 4 =$ _____	58	$11 \times 4 =$ _____
19	$4 \times 1 =$ _____	39	$10 \times 4 =$ _____	59	$9 \times 4 =$ _____
20	$4 \times 3 =$ _____	40	$3 \times 4 =$ _____	60	$1 \times 4 =$ _____

Time taken

:

🕒 3 minute time limit 🕒

Score

60

What's your rock status?

WANNABE

< 18 correct in 3 mins

GARAGE ROCKER

18-19 correct in 3 mins

BUSKER

20-21 correct in 3 mins

GIGGER

22-24 correct in 3 mins

UNSIGNED ACT

25-29 correct in 3 mins

BREAKTHROUGH ARTIST

30-35 correct in 3 mins

SUPPORT ACT

36-44 correct in 3 mins

HEADLINER

45-59 correct in 3 mins

ROCK STAR

All correct in \leq 3mins

ROCK LEGEND

All correct in \leq 2min

ROCK HERO

All correct in \leq 1 min

**TIMES TABLES
ROCK STARS**

Name: _____

Week 15 Session 2

2020-21

3s 4s and 8s

3 a week

Times Tables Rock Stars

4

Times Tables

Licensed to Ashton Vale Primary School

1	$44 \div 4 =$ _____	21	$28 \div 4 =$ _____	41	$48 \div 4 =$ _____
2	$40 \div 4 =$ _____	22	$16 \div 4 =$ _____	42	$8 \div 4 =$ _____
3	$16 \div 4 =$ _____	23	$40 \div 4 =$ _____	43	$8 \div 4 =$ _____
4	$8 \div 4 =$ _____	24	$20 \div 4 =$ _____	44	$44 \div 4 =$ _____
5	$24 \div 4 =$ _____	25	$48 \div 4 =$ _____	45	$28 \div 4 =$ _____
6	$16 \div 4 =$ _____	26	$32 \div 4 =$ _____	46	$28 \div 4 =$ _____
7	$24 \div 4 =$ _____	27	$16 \div 4 =$ _____	47	$44 \div 4 =$ _____
8	$36 \div 4 =$ _____	28	$36 \div 4 =$ _____	48	$4 \div 4 =$ _____
9	$20 \div 4 =$ _____	29	$4 \div 4 =$ _____	49	$40 \div 4 =$ _____
10	$24 \div 4 =$ _____	30	$4 \div 4 =$ _____	50	$48 \div 4 =$ _____
11	$48 \div 4 =$ _____	31	$8 \div 4 =$ _____	51	$16 \div 4 =$ _____
12	$32 \div 4 =$ _____	32	$16 \div 4 =$ _____	52	$20 \div 4 =$ _____
13	$28 \div 4 =$ _____	33	$36 \div 4 =$ _____	53	$40 \div 4 =$ _____
14	$32 \div 4 =$ _____	34	$40 \div 4 =$ _____	54	$44 \div 4 =$ _____
15	$12 \div 4 =$ _____	35	$8 \div 4 =$ _____	55	$48 \div 4 =$ _____
16	$28 \div 4 =$ _____	36	$36 \div 4 =$ _____	56	$12 \div 4 =$ _____
17	$20 \div 4 =$ _____	37	$48 \div 4 =$ _____	57	$36 \div 4 =$ _____
18	$28 \div 4 =$ _____	38	$28 \div 4 =$ _____	58	$20 \div 4 =$ _____
19	$44 \div 4 =$ _____	39	$20 \div 4 =$ _____	59	$48 \div 4 =$ _____
20	$12 \div 4 =$ _____	40	$16 \div 4 =$ _____	60	$36 \div 4 =$ _____

Time taken

:

🕒 3 minute time limit 🕒

Score

60

What's your rock status?

WANNABE

< 18 correct in 3 mins

GARAGE ROCKER

18-19 correct in 3 mins

BUSKER

20-21 correct in 3 mins

GIGGER

22-24 correct in 3 mins

UNSIGNED ACT

25-29 correct in 3 mins

BREAKTHROUGH ARTIST

30-35 correct in 3 mins

SUPPORT ACT

36-44 correct in 3 mins

HEADLINER

45-59 correct in 3 mins

ROCK STAR

All correct in \leq 3mins

ROCK LEGEND

All correct in \leq 2min

ROCK HERO

All correct in \leq 1 min

**TIMES TABLES
ROCK STARS**

Name: _____

Week 15 Session 3

2020-21

3s 4s and 8s

3 a week

**Times Tables
Rock Stars**

4



Times Tables

Licensed to Ashton Vale Primary School

1	$4 \times 9 =$ _____	21	$4 \times 4 =$ _____	41	$12 \div 4 =$ _____
2	$4 \times 5 =$ _____	22	$4 \times 1 =$ _____	42	$8 \div 4 =$ _____
3	$4 \times 3 =$ _____	23	$4 \times 4 =$ _____	43	$28 \div 4 =$ _____
4	$4 \times 12 =$ _____	24	$4 \times 12 =$ _____	44	$12 \div 4 =$ _____
5	$4 \times 9 =$ _____	25	$4 \times 3 =$ _____	45	$4 \div 4 =$ _____
6	$4 \times 5 =$ _____	26	$4 \times 4 =$ _____	46	$24 \div 4 =$ _____
7	$4 \times 5 =$ _____	27	$4 \times 10 =$ _____	47	$8 \div 4 =$ _____
8	$4 \times 2 =$ _____	28	$4 \times 4 =$ _____	48	$28 \div 4 =$ _____
9	$4 \times 1 =$ _____	29	$4 \times 9 =$ _____	49	$16 \div 4 =$ _____
10	$4 \times 12 =$ _____	30	$4 \times 11 =$ _____	50	$8 \div 4 =$ _____
11	$4 \times 12 =$ _____	31	$48 \div 4 =$ _____	51	$8 \div 4 =$ _____
12	$4 \times 1 =$ _____	32	$4 \div 4 =$ _____	52	$28 \div 4 =$ _____
13	$4 \times 9 =$ _____	33	$4 \div 4 =$ _____	53	$8 \div 4 =$ _____
14	$4 \times 5 =$ _____	34	$28 \div 4 =$ _____	54	$24 \div 4 =$ _____
15	$4 \times 9 =$ _____	35	$40 \div 4 =$ _____	55	$40 \div 4 =$ _____
16	$4 \times 9 =$ _____	36	$40 \div 4 =$ _____	56	$44 \div 4 =$ _____
17	$4 \times 11 =$ _____	37	$40 \div 4 =$ _____	57	$32 \div 4 =$ _____
18	$4 \times 4 =$ _____	38	$36 \div 4 =$ _____	58	$20 \div 4 =$ _____
19	$4 \times 10 =$ _____	39	$40 \div 4 =$ _____	59	$20 \div 4 =$ _____
20	$4 \times 7 =$ _____	40	$16 \div 4 =$ _____	60	$36 \div 4 =$ _____

Time taken

:

 3 minute time limit 

Score

60

Add up your time

Mins

S1 _____

S2 _____

S3 _____

Total _____

Secs

S1 _____

S2 _____

S3 _____

Total _____

Add up your score

S1 _____

S2 _____

S3 _____

Total _____

Name: _____

Week 16 Session 1

2020-21

3s 4s and 8s

3 a week

Times Tables Rock Stars

8

Times Tables

Licensed to Ashton Vale Primary School

1	$8 \times 12 =$ _____	21	$8 \times 8 =$ _____	41	$10 \times 8 =$ _____
2	$8 \times 6 =$ _____	22	$8 \times 7 =$ _____	42	$9 \times 8 =$ _____
3	$8 \times 9 =$ _____	23	$8 \times 3 =$ _____	43	$8 \times 8 =$ _____
4	$8 \times 5 =$ _____	24	$8 \times 7 =$ _____	44	$11 \times 8 =$ _____
5	$8 \times 9 =$ _____	25	$8 \times 12 =$ _____	45	$8 \times 8 =$ _____
6	$8 \times 5 =$ _____	26	$8 \times 5 =$ _____	46	$8 \times 8 =$ _____
7	$8 \times 11 =$ _____	27	$8 \times 4 =$ _____	47	$4 \times 8 =$ _____
8	$8 \times 11 =$ _____	28	$8 \times 12 =$ _____	48	$5 \times 8 =$ _____
9	$8 \times 7 =$ _____	29	$8 \times 8 =$ _____	49	$1 \times 8 =$ _____
10	$8 \times 1 =$ _____	30	$8 \times 10 =$ _____	50	$5 \times 8 =$ _____
11	$8 \times 12 =$ _____	31	$12 \times 8 =$ _____	51	$8 \times 8 =$ _____
12	$8 \times 12 =$ _____	32	$7 \times 8 =$ _____	52	$12 \times 8 =$ _____
13	$8 \times 8 =$ _____	33	$3 \times 8 =$ _____	53	$8 \times 8 =$ _____
14	$8 \times 2 =$ _____	34	$5 \times 8 =$ _____	54	$10 \times 8 =$ _____
15	$8 \times 3 =$ _____	35	$5 \times 8 =$ _____	55	$9 \times 8 =$ _____
16	$8 \times 7 =$ _____	36	$11 \times 8 =$ _____	56	$1 \times 8 =$ _____
17	$8 \times 12 =$ _____	37	$12 \times 8 =$ _____	57	$11 \times 8 =$ _____
18	$8 \times 7 =$ _____	38	$9 \times 8 =$ _____	58	$7 \times 8 =$ _____
19	$8 \times 2 =$ _____	39	$6 \times 8 =$ _____	59	$5 \times 8 =$ _____
20	$8 \times 7 =$ _____	40	$6 \times 8 =$ _____	60	$10 \times 8 =$ _____

Time taken

:

🕒 3 minute time limit 🕒

Score

60

What's your rock status?

WANNABE

< 18 correct in 3 mins

GARAGE ROCKER

18-19 correct in 3 mins

BUSKER

20-21 correct in 3 mins

GIGGER

22-24 correct in 3 mins

UNSIGNED ACT

25-29 correct in 3 mins

BREAKTHROUGH ARTIST

30-35 correct in 3 mins

SUPPORT ACT

36-44 correct in 3 mins

HEADLINER

45-59 correct in 3 mins

ROCK STAR

All correct in \leq 3mins

ROCK LEGEND

All correct in \leq 2min

ROCK HERO

All correct in \leq 1 min

**TIMES TABLES
ROCK STARS**

Name: _____

Week 16 Session 2

2020-21

3s 4s and 8s

3 a week

Times Tables Rock Stars

8

Times Tables

Licensed to Ashton Vale Primary School

1	$80 \div 8 =$ _____	21	$64 \div 8 =$ _____	41	$8 \div 8 =$ _____
2	$32 \div 8 =$ _____	22	$72 \div 8 =$ _____	42	$16 \div 8 =$ _____
3	$80 \div 8 =$ _____	23	$32 \div 8 =$ _____	43	$80 \div 8 =$ _____
4	$48 \div 8 =$ _____	24	$48 \div 8 =$ _____	44	$80 \div 8 =$ _____
5	$48 \div 8 =$ _____	25	$16 \div 8 =$ _____	45	$80 \div 8 =$ _____
6	$88 \div 8 =$ _____	26	$56 \div 8 =$ _____	46	$80 \div 8 =$ _____
7	$96 \div 8 =$ _____	27	$8 \div 8 =$ _____	47	$64 \div 8 =$ _____
8	$40 \div 8 =$ _____	28	$24 \div 8 =$ _____	48	$80 \div 8 =$ _____
9	$24 \div 8 =$ _____	29	$64 \div 8 =$ _____	49	$40 \div 8 =$ _____
10	$64 \div 8 =$ _____	30	$32 \div 8 =$ _____	50	$32 \div 8 =$ _____
11	$56 \div 8 =$ _____	31	$48 \div 8 =$ _____	51	$96 \div 8 =$ _____
12	$8 \div 8 =$ _____	32	$48 \div 8 =$ _____	52	$88 \div 8 =$ _____
13	$80 \div 8 =$ _____	33	$80 \div 8 =$ _____	53	$48 \div 8 =$ _____
14	$96 \div 8 =$ _____	34	$72 \div 8 =$ _____	54	$72 \div 8 =$ _____
15	$40 \div 8 =$ _____	35	$24 \div 8 =$ _____	55	$64 \div 8 =$ _____
16	$80 \div 8 =$ _____	36	$64 \div 8 =$ _____	56	$80 \div 8 =$ _____
17	$48 \div 8 =$ _____	37	$96 \div 8 =$ _____	57	$48 \div 8 =$ _____
18	$88 \div 8 =$ _____	38	$8 \div 8 =$ _____	58	$32 \div 8 =$ _____
19	$48 \div 8 =$ _____	39	$72 \div 8 =$ _____	59	$64 \div 8 =$ _____
20	$72 \div 8 =$ _____	40	$32 \div 8 =$ _____	60	$96 \div 8 =$ _____

Time taken

:

🕒 3 minute time limit 🕒

Score

60

What's your rock status?

WANNABE

< 18 correct in 3 mins

GARAGE ROCKER

18-19 correct in 3 mins

BUSKER

20-21 correct in 3 mins

GIGGER

22-24 correct in 3 mins

UNSIGNED ACT

25-29 correct in 3 mins

BREAKTHROUGH ARTIST

30-35 correct in 3 mins

SUPPORT ACT

36-44 correct in 3 mins

HEADLINER

45-59 correct in 3 mins

ROCK STAR

All correct in \leq 3mins

ROCK LEGEND

All correct in \leq 2min

ROCK HERO

All correct in \leq 1 min

**TIMES TABLES
ROCK STARS**

Name: _____

Week 16 Session 3

2020-21

3s 4s and 8s

3 a week

Times Tables Rock Stars

8



Times Tables

Licensed to Ashton Vale Primary School

1	$8 \times 4 =$ _____	21	$8 \times 7 =$ _____	41	$40 \div 8 =$ _____
2	$8 \times 10 =$ _____	22	$8 \times 12 =$ _____	42	$88 \div 8 =$ _____
3	$8 \times 4 =$ _____	23	$8 \times 2 =$ _____	43	$56 \div 8 =$ _____
4	$8 \times 5 =$ _____	24	$8 \times 12 =$ _____	44	$40 \div 8 =$ _____
5	$8 \times 4 =$ _____	25	$8 \times 2 =$ _____	45	$56 \div 8 =$ _____
6	$8 \times 2 =$ _____	26	$8 \times 9 =$ _____	46	$72 \div 8 =$ _____
7	$8 \times 11 =$ _____	27	$8 \times 11 =$ _____	47	$64 \div 8 =$ _____
8	$8 \times 6 =$ _____	28	$8 \times 3 =$ _____	48	$56 \div 8 =$ _____
9	$8 \times 2 =$ _____	29	$8 \times 9 =$ _____	49	$72 \div 8 =$ _____
10	$8 \times 5 =$ _____	30	$8 \times 9 =$ _____	50	$16 \div 8 =$ _____
11	$8 \times 5 =$ _____	31	$72 \div 8 =$ _____	51	$80 \div 8 =$ _____
12	$8 \times 8 =$ _____	32	$56 \div 8 =$ _____	52	$24 \div 8 =$ _____
13	$8 \times 1 =$ _____	33	$72 \div 8 =$ _____	53	$40 \div 8 =$ _____
14	$8 \times 10 =$ _____	34	$96 \div 8 =$ _____	54	$8 \div 8 =$ _____
15	$8 \times 12 =$ _____	35	$64 \div 8 =$ _____	55	$32 \div 8 =$ _____
16	$8 \times 9 =$ _____	36	$96 \div 8 =$ _____	56	$56 \div 8 =$ _____
17	$8 \times 1 =$ _____	37	$88 \div 8 =$ _____	57	$88 \div 8 =$ _____
18	$8 \times 2 =$ _____	38	$72 \div 8 =$ _____	58	$16 \div 8 =$ _____
19	$8 \times 11 =$ _____	39	$64 \div 8 =$ _____	59	$80 \div 8 =$ _____
20	$8 \times 1 =$ _____	40	$96 \div 8 =$ _____	60	$64 \div 8 =$ _____

Time taken

:

 3 minute time limit 

Score

60

Add up your time

Mins

S1 _____

S2 _____

S3 _____

Total _____

Secs

S1 _____

S2 _____

S3 _____

Total _____

Add up your score

S1 _____

S2 _____

S3 _____

Total _____

Name: _____

Week 17 Session 1

2020-21

3s 4s and 8s

3 a week

Times Tables Rock Stars

3,8 Times Tables

Licensed to Ashton Vale Primary School

1	$3 \times 4 =$ _____	21	$3 \times 6 =$ _____	41	$10 \times 8 =$ _____
2	$3 \times 7 =$ _____	22	$8 \times 10 =$ _____	42	$11 \times 3 =$ _____
3	$3 \times 5 =$ _____	23	$3 \times 3 =$ _____	43	$3 \times 8 =$ _____
4	$8 \times 11 =$ _____	24	$3 \times 8 =$ _____	44	$5 \times 8 =$ _____
5	$8 \times 8 =$ _____	25	$8 \times 4 =$ _____	45	$2 \times 3 =$ _____
6	$3 \times 5 =$ _____	26	$3 \times 5 =$ _____	46	$4 \times 8 =$ _____
7	$3 \times 1 =$ _____	27	$3 \times 3 =$ _____	47	$9 \times 8 =$ _____
8	$8 \times 9 =$ _____	28	$3 \times 9 =$ _____	48	$12 \times 3 =$ _____
9	$8 \times 2 =$ _____	29	$3 \times 1 =$ _____	49	$12 \times 8 =$ _____
10	$3 \times 3 =$ _____	30	$8 \times 9 =$ _____	50	$8 \times 3 =$ _____
11	$3 \times 12 =$ _____	31	$2 \times 3 =$ _____	51	$4 \times 3 =$ _____
12	$8 \times 8 =$ _____	32	$3 \times 8 =$ _____	52	$4 \times 3 =$ _____
13	$3 \times 9 =$ _____	33	$9 \times 3 =$ _____	53	$6 \times 3 =$ _____
14	$8 \times 10 =$ _____	34	$5 \times 8 =$ _____	54	$4 \times 3 =$ _____
15	$3 \times 3 =$ _____	35	$5 \times 8 =$ _____	55	$12 \times 8 =$ _____
16	$3 \times 7 =$ _____	36	$8 \times 8 =$ _____	56	$12 \times 3 =$ _____
17	$8 \times 2 =$ _____	37	$2 \times 3 =$ _____	57	$4 \times 3 =$ _____
18	$3 \times 4 =$ _____	38	$11 \times 3 =$ _____	58	$2 \times 3 =$ _____
19	$8 \times 4 =$ _____	39	$2 \times 3 =$ _____	59	$2 \times 3 =$ _____
20	$3 \times 1 =$ _____	40	$4 \times 3 =$ _____	60	$10 \times 8 =$ _____

Time taken

:

🕒 3 minute time limit 🕒

Score

60

What's your rock status?

WANNABE

< 18 correct in 3 mins

GARAGE ROCKER

18-19 correct in 3 mins

BUSKER

20-21 correct in 3 mins

GIGGER

22-24 correct in 3 mins

UNSIGNED ACT

25-29 correct in 3 mins

BREAKTHROUGH ARTIST

30-35 correct in 3 mins

SUPPORT ACT

36-44 correct in 3 mins

HEADLINER

45-59 correct in 3 mins

ROCK STAR

All correct in \leq 3mins

ROCK LEGEND

All correct in \leq 2min

ROCK HERO

All correct in \leq 1 min

**TIMES TABLES
ROCK STARS**

Name: _____

Week 17 Session 2

2020-21

3s 4s and 8s

3 a week

Times Tables Rock Stars

3,8 Times Tables

Licensed to Ashton Vale Primary School

1	$27 \div 3 =$ _____	21	$32 \div 8 =$ _____	41	$24 \div 8 =$ _____
2	$33 \div 3 =$ _____	22	$3 \div 3 =$ _____	42	$72 \div 8 =$ _____
3	$9 \div 3 =$ _____	23	$33 \div 3 =$ _____	43	$40 \div 8 =$ _____
4	$9 \div 3 =$ _____	24	$16 \div 8 =$ _____	44	$88 \div 8 =$ _____
5	$56 \div 8 =$ _____	25	$6 \div 3 =$ _____	45	$21 \div 3 =$ _____
6	$6 \div 3 =$ _____	26	$27 \div 3 =$ _____	46	$40 \div 8 =$ _____
7	$6 \div 3 =$ _____	27	$15 \div 3 =$ _____	47	$27 \div 3 =$ _____
8	$30 \div 3 =$ _____	28	$96 \div 8 =$ _____	48	$40 \div 8 =$ _____
9	$15 \div 3 =$ _____	29	$15 \div 3 =$ _____	49	$32 \div 8 =$ _____
10	$15 \div 3 =$ _____	30	$24 \div 3 =$ _____	50	$27 \div 3 =$ _____
11	$30 \div 3 =$ _____	31	$36 \div 3 =$ _____	51	$64 \div 8 =$ _____
12	$32 \div 8 =$ _____	32	$72 \div 8 =$ _____	52	$9 \div 3 =$ _____
13	$56 \div 8 =$ _____	33	$48 \div 8 =$ _____	53	$72 \div 8 =$ _____
14	$16 \div 8 =$ _____	34	$33 \div 3 =$ _____	54	$96 \div 8 =$ _____
15	$15 \div 3 =$ _____	35	$18 \div 3 =$ _____	55	$27 \div 3 =$ _____
16	$24 \div 3 =$ _____	36	$27 \div 3 =$ _____	56	$15 \div 3 =$ _____
17	$12 \div 3 =$ _____	37	$32 \div 8 =$ _____	57	$36 \div 3 =$ _____
18	$16 \div 8 =$ _____	38	$9 \div 3 =$ _____	58	$96 \div 8 =$ _____
19	$33 \div 3 =$ _____	39	$72 \div 8 =$ _____	59	$56 \div 8 =$ _____
20	$64 \div 8 =$ _____	40	$6 \div 3 =$ _____	60	$80 \div 8 =$ _____

Time taken

:

🕒 3 minute time limit 🕒

Score

60

What's your rock status?

WANNABE

< 18 correct in 3 mins

GARAGE ROCKER

18-19 correct in 3 mins

BUSKER

20-21 correct in 3 mins

GIGGER

22-24 correct in 3 mins

UNSIGNED ACT

25-29 correct in 3 mins

BREAKTHROUGH ARTIST

30-35 correct in 3 mins

SUPPORT ACT

36-44 correct in 3 mins

HEADLINER

45-59 correct in 3 mins

ROCK STAR

All correct in \leq 3mins

ROCK LEGEND

All correct in \leq 2min

ROCK HERO

All correct in \leq 1 min

**TIMES TABLES
ROCK STARS**

Name: _____

Week 17 Session 3

2020-21

3s 4s and 8s

3 a week

Times Tables Rock Stars

3,8 Times Tables

Licensed to Ashton Vale Primary School

1	$3 \times 5 =$ _____	21	$3 \times 4 =$ _____	41	$18 \div 3 =$ _____
2	$8 \times 3 =$ _____	22	$3 \times 2 =$ _____	42	$88 \div 8 =$ _____
3	$3 \times 3 =$ _____	23	$8 \times 8 =$ _____	43	$64 \div 8 =$ _____
4	$8 \times 9 =$ _____	24	$3 \times 4 =$ _____	44	$8 \div 8 =$ _____
5	$3 \times 1 =$ _____	25	$3 \times 8 =$ _____	45	$30 \div 3 =$ _____
6	$3 \times 9 =$ _____	26	$3 \times 12 =$ _____	46	$72 \div 8 =$ _____
7	$8 \times 8 =$ _____	27	$3 \times 9 =$ _____	47	$16 \div 8 =$ _____
8	$8 \times 1 =$ _____	28	$3 \times 2 =$ _____	48	$21 \div 3 =$ _____
9	$8 \times 2 =$ _____	29	$3 \times 7 =$ _____	49	$72 \div 8 =$ _____
10	$3 \times 4 =$ _____	30	$8 \times 3 =$ _____	50	$21 \div 3 =$ _____
11	$8 \times 3 =$ _____	31	$36 \div 3 =$ _____	51	$8 \div 8 =$ _____
12	$8 \times 8 =$ _____	32	$24 \div 3 =$ _____	52	$24 \div 8 =$ _____
13	$8 \times 9 =$ _____	33	$24 \div 3 =$ _____	53	$16 \div 8 =$ _____
14	$3 \times 6 =$ _____	34	$30 \div 3 =$ _____	54	$80 \div 8 =$ _____
15	$3 \times 12 =$ _____	35	$40 \div 8 =$ _____	55	$30 \div 3 =$ _____
16	$8 \times 12 =$ _____	36	$3 \div 3 =$ _____	56	$15 \div 3 =$ _____
17	$8 \times 11 =$ _____	37	$9 \div 3 =$ _____	57	$80 \div 8 =$ _____
18	$3 \times 3 =$ _____	38	$80 \div 8 =$ _____	58	$96 \div 8 =$ _____
19	$8 \times 6 =$ _____	39	$16 \div 8 =$ _____	59	$21 \div 3 =$ _____
20	$3 \times 3 =$ _____	40	$33 \div 3 =$ _____	60	$64 \div 8 =$ _____

Time taken

:

🕒 3 minute time limit 🕒

Score

60

Add up your time

Mins	
S1	_____
S2	_____
S3	_____
Total	_____

Secs	
S1	_____
S2	_____
S3	_____
Total	_____

Add up your score	
S1	_____
S2	_____
S3	_____
Total	_____

Name: _____

Week 18 Session 1

2020-21

3s 4s and 8s

3 a week

Times Tables Rock Stars

4

Times Tables

Licensed to Ashton Vale Primary School

1	$4 \times 5 =$ _____	21	$4 \times 8 =$ _____	41	$11 \times 4 =$ _____
2	$4 \times 7 =$ _____	22	$4 \times 2 =$ _____	42	$1 \times 4 =$ _____
3	$4 \times 2 =$ _____	23	$4 \times 2 =$ _____	43	$3 \times 4 =$ _____
4	$4 \times 5 =$ _____	24	$4 \times 8 =$ _____	44	$10 \times 4 =$ _____
5	$4 \times 3 =$ _____	25	$4 \times 3 =$ _____	45	$6 \times 4 =$ _____
6	$4 \times 4 =$ _____	26	$4 \times 7 =$ _____	46	$9 \times 4 =$ _____
7	$4 \times 1 =$ _____	27	$4 \times 7 =$ _____	47	$7 \times 4 =$ _____
8	$4 \times 5 =$ _____	28	$4 \times 8 =$ _____	48	$8 \times 4 =$ _____
9	$4 \times 10 =$ _____	29	$4 \times 1 =$ _____	49	$1 \times 4 =$ _____
10	$4 \times 9 =$ _____	30	$4 \times 11 =$ _____	50	$5 \times 4 =$ _____
11	$4 \times 11 =$ _____	31	$6 \times 4 =$ _____	51	$5 \times 4 =$ _____
12	$4 \times 6 =$ _____	32	$8 \times 4 =$ _____	52	$2 \times 4 =$ _____
13	$4 \times 6 =$ _____	33	$10 \times 4 =$ _____	53	$7 \times 4 =$ _____
14	$4 \times 10 =$ _____	34	$8 \times 4 =$ _____	54	$1 \times 4 =$ _____
15	$4 \times 5 =$ _____	35	$7 \times 4 =$ _____	55	$12 \times 4 =$ _____
16	$4 \times 11 =$ _____	36	$3 \times 4 =$ _____	56	$7 \times 4 =$ _____
17	$4 \times 12 =$ _____	37	$7 \times 4 =$ _____	57	$9 \times 4 =$ _____
18	$4 \times 6 =$ _____	38	$1 \times 4 =$ _____	58	$3 \times 4 =$ _____
19	$4 \times 5 =$ _____	39	$3 \times 4 =$ _____	59	$4 \times 4 =$ _____
20	$4 \times 8 =$ _____	40	$9 \times 4 =$ _____	60	$10 \times 4 =$ _____

Time taken

:

🕒 3 minute time limit 🕒

Score

60

What's your rock status?

WANNABE

< 18 correct in 3 mins

GARAGE ROCKER

18-19 correct in 3 mins

BUSKER

20-21 correct in 3 mins

GIGGER

22-24 correct in 3 mins

UNSIGNED ACT

25-29 correct in 3 mins

BREAKTHROUGH ARTIST

30-35 correct in 3 mins

SUPPORT ACT

36-44 correct in 3 mins

HEADLINER

45-59 correct in 3 mins

ROCK STAR

All correct in \leq 3mins

ROCK LEGEND

All correct in \leq 2min

ROCK HERO

All correct in \leq 1 min

**TIMES TABLES
ROCK STARS**

Name: _____

Week 18 Session 2

2020-21

3s 4s and 8s

3 a week

Times Tables Rock Stars

4

Times Tables

Licensed to Ashton Vale Primary School

1	$28 \div 4 =$ _____	21	$8 \div 4 =$ _____	41	$12 \div 4 =$ _____
2	$8 \div 4 =$ _____	22	$8 \div 4 =$ _____	42	$36 \div 4 =$ _____
3	$48 \div 4 =$ _____	23	$8 \div 4 =$ _____	43	$12 \div 4 =$ _____
4	$40 \div 4 =$ _____	24	$12 \div 4 =$ _____	44	$48 \div 4 =$ _____
5	$12 \div 4 =$ _____	25	$16 \div 4 =$ _____	45	$44 \div 4 =$ _____
6	$24 \div 4 =$ _____	26	$12 \div 4 =$ _____	46	$12 \div 4 =$ _____
7	$48 \div 4 =$ _____	27	$8 \div 4 =$ _____	47	$4 \div 4 =$ _____
8	$4 \div 4 =$ _____	28	$12 \div 4 =$ _____	48	$28 \div 4 =$ _____
9	$16 \div 4 =$ _____	29	$4 \div 4 =$ _____	49	$20 \div 4 =$ _____
10	$8 \div 4 =$ _____	30	$12 \div 4 =$ _____	50	$8 \div 4 =$ _____
11	$24 \div 4 =$ _____	31	$44 \div 4 =$ _____	51	$8 \div 4 =$ _____
12	$32 \div 4 =$ _____	32	$40 \div 4 =$ _____	52	$44 \div 4 =$ _____
13	$28 \div 4 =$ _____	33	$8 \div 4 =$ _____	53	$44 \div 4 =$ _____
14	$32 \div 4 =$ _____	34	$24 \div 4 =$ _____	54	$20 \div 4 =$ _____
15	$40 \div 4 =$ _____	35	$12 \div 4 =$ _____	55	$44 \div 4 =$ _____
16	$16 \div 4 =$ _____	36	$16 \div 4 =$ _____	56	$20 \div 4 =$ _____
17	$28 \div 4 =$ _____	37	$8 \div 4 =$ _____	57	$4 \div 4 =$ _____
18	$8 \div 4 =$ _____	38	$36 \div 4 =$ _____	58	$20 \div 4 =$ _____
19	$36 \div 4 =$ _____	39	$32 \div 4 =$ _____	59	$24 \div 4 =$ _____
20	$28 \div 4 =$ _____	40	$12 \div 4 =$ _____	60	$44 \div 4 =$ _____

Time taken

:

🕒 3 minute time limit 🕒

Score

60

What's your rock status?

WANNABE

< 18 correct in 3 mins

GARAGE ROCKER

18-19 correct in 3 mins

BUSKER

20-21 correct in 3 mins

GIGGER

22-24 correct in 3 mins

UNSIGNED ACT

25-29 correct in 3 mins

BREAKTHROUGH ARTIST

30-35 correct in 3 mins

SUPPORT ACT

36-44 correct in 3 mins

HEADLINER

45-59 correct in 3 mins

ROCK STAR

All correct in \leq 3mins

ROCK LEGEND

All correct in \leq 2min

ROCK HERO

All correct in \leq 1 min

**TIMES TABLES
ROCK STARS**

Name: _____

Week 18 Session 3

2020-21

3s 4s and 8s

3 a week

Times Tables Rock Stars

4

Times Tables

Licensed to Ashton Vale Primary School

1	$4 \times 4 =$ _____	21	$4 \times 9 =$ _____	41	$32 \div 4 =$ _____
2	$4 \times 11 =$ _____	22	$4 \times 6 =$ _____	42	$20 \div 4 =$ _____
3	$4 \times 5 =$ _____	23	$4 \times 6 =$ _____	43	$16 \div 4 =$ _____
4	$4 \times 5 =$ _____	24	$4 \times 6 =$ _____	44	$28 \div 4 =$ _____
5	$4 \times 1 =$ _____	25	$4 \times 6 =$ _____	45	$36 \div 4 =$ _____
6	$4 \times 10 =$ _____	26	$4 \times 4 =$ _____	46	$36 \div 4 =$ _____
7	$4 \times 1 =$ _____	27	$4 \times 2 =$ _____	47	$4 \div 4 =$ _____
8	$4 \times 11 =$ _____	28	$4 \times 1 =$ _____	48	$4 \div 4 =$ _____
9	$4 \times 3 =$ _____	29	$4 \times 8 =$ _____	49	$48 \div 4 =$ _____
10	$4 \times 10 =$ _____	30	$4 \times 7 =$ _____	50	$4 \div 4 =$ _____
11	$4 \times 11 =$ _____	31	$12 \div 4 =$ _____	51	$48 \div 4 =$ _____
12	$4 \times 4 =$ _____	32	$32 \div 4 =$ _____	52	$4 \div 4 =$ _____
13	$4 \times 11 =$ _____	33	$20 \div 4 =$ _____	53	$4 \div 4 =$ _____
14	$4 \times 8 =$ _____	34	$8 \div 4 =$ _____	54	$24 \div 4 =$ _____
15	$4 \times 10 =$ _____	35	$40 \div 4 =$ _____	55	$16 \div 4 =$ _____
16	$4 \times 11 =$ _____	36	$24 \div 4 =$ _____	56	$28 \div 4 =$ _____
17	$4 \times 7 =$ _____	37	$8 \div 4 =$ _____	57	$8 \div 4 =$ _____
18	$4 \times 11 =$ _____	38	$44 \div 4 =$ _____	58	$44 \div 4 =$ _____
19	$4 \times 7 =$ _____	39	$40 \div 4 =$ _____	59	$24 \div 4 =$ _____
20	$4 \times 4 =$ _____	40	$44 \div 4 =$ _____	60	$4 \div 4 =$ _____

Time taken

:

🕒 3 minute time limit 🕒

Score

60

Add up your time

Mins

S1 _____

S2 _____

S3 _____

Total _____

Secs

S1 _____

S2 _____

S3 _____

Total _____

Add up your score

S1 _____

S2 _____

S3 _____

Total _____

Name: _____

Week 19 Session 1

2020-21

3s 4s and 8s

3 a week

Times Tables Rock Stars

8

Times Tables

Licensed to Ashton Vale Primary School

1	$8 \times 9 =$ _____	21	$8 \times 1 =$ _____	41	$11 \times 8 =$ _____
2	$8 \times 4 =$ _____	22	$8 \times 10 =$ _____	42	$1 \times 8 =$ _____
3	$8 \times 6 =$ _____	23	$8 \times 1 =$ _____	43	$1 \times 8 =$ _____
4	$8 \times 9 =$ _____	24	$8 \times 3 =$ _____	44	$12 \times 8 =$ _____
5	$8 \times 5 =$ _____	25	$8 \times 9 =$ _____	45	$7 \times 8 =$ _____
6	$8 \times 4 =$ _____	26	$8 \times 5 =$ _____	46	$5 \times 8 =$ _____
7	$8 \times 2 =$ _____	27	$8 \times 3 =$ _____	47	$10 \times 8 =$ _____
8	$8 \times 11 =$ _____	28	$8 \times 9 =$ _____	48	$2 \times 8 =$ _____
9	$8 \times 11 =$ _____	29	$8 \times 7 =$ _____	49	$11 \times 8 =$ _____
10	$8 \times 1 =$ _____	30	$8 \times 7 =$ _____	50	$10 \times 8 =$ _____
11	$8 \times 12 =$ _____	31	$10 \times 8 =$ _____	51	$9 \times 8 =$ _____
12	$8 \times 12 =$ _____	32	$1 \times 8 =$ _____	52	$10 \times 8 =$ _____
13	$8 \times 1 =$ _____	33	$4 \times 8 =$ _____	53	$6 \times 8 =$ _____
14	$8 \times 7 =$ _____	34	$5 \times 8 =$ _____	54	$11 \times 8 =$ _____
15	$8 \times 9 =$ _____	35	$7 \times 8 =$ _____	55	$11 \times 8 =$ _____
16	$8 \times 2 =$ _____	36	$9 \times 8 =$ _____	56	$10 \times 8 =$ _____
17	$8 \times 4 =$ _____	37	$2 \times 8 =$ _____	57	$8 \times 8 =$ _____
18	$8 \times 2 =$ _____	38	$11 \times 8 =$ _____	58	$8 \times 8 =$ _____
19	$8 \times 11 =$ _____	39	$12 \times 8 =$ _____	59	$5 \times 8 =$ _____
20	$8 \times 6 =$ _____	40	$5 \times 8 =$ _____	60	$10 \times 8 =$ _____

Time taken

:

🕒 3 minute time limit 🕒

Score

60

What's your rock status?

WANNABE

< 18 correct in 3 mins

GARAGE ROCKER

18-19 correct in 3 mins

BUSKER

20-21 correct in 3 mins

GIGGER

22-24 correct in 3 mins

UNSIGNED ACT

25-29 correct in 3 mins

BREAKTHROUGH ARTIST

30-35 correct in 3 mins

SUPPORT ACT

36-44 correct in 3 mins

HEADLINER

45-59 correct in 3 mins

ROCK STAR

All correct in \leq 3mins

ROCK LEGEND

All correct in \leq 2min

ROCK HERO

All correct in \leq 1 min

**TIMES TABLES
ROCK STARS**

Name: _____

Week 19 Session 2

2020-21

3s 4s and 8s

3 a week

Times Tables Rock Stars

8

Times Tables

Licensed to Ashton Vale Primary School

1	$32 \div 8 =$ _____	21	$8 \div 8 =$ _____	41	$16 \div 8 =$ _____
2	$88 \div 8 =$ _____	22	$24 \div 8 =$ _____	42	$16 \div 8 =$ _____
3	$64 \div 8 =$ _____	23	$24 \div 8 =$ _____	43	$96 \div 8 =$ _____
4	$64 \div 8 =$ _____	24	$88 \div 8 =$ _____	44	$24 \div 8 =$ _____
5	$32 \div 8 =$ _____	25	$48 \div 8 =$ _____	45	$80 \div 8 =$ _____
6	$64 \div 8 =$ _____	26	$8 \div 8 =$ _____	46	$88 \div 8 =$ _____
7	$16 \div 8 =$ _____	27	$96 \div 8 =$ _____	47	$32 \div 8 =$ _____
8	$32 \div 8 =$ _____	28	$8 \div 8 =$ _____	48	$80 \div 8 =$ _____
9	$64 \div 8 =$ _____	29	$16 \div 8 =$ _____	49	$32 \div 8 =$ _____
10	$96 \div 8 =$ _____	30	$24 \div 8 =$ _____	50	$24 \div 8 =$ _____
11	$64 \div 8 =$ _____	31	$56 \div 8 =$ _____	51	$32 \div 8 =$ _____
12	$24 \div 8 =$ _____	32	$16 \div 8 =$ _____	52	$80 \div 8 =$ _____
13	$32 \div 8 =$ _____	33	$24 \div 8 =$ _____	53	$40 \div 8 =$ _____
14	$80 \div 8 =$ _____	34	$80 \div 8 =$ _____	54	$40 \div 8 =$ _____
15	$16 \div 8 =$ _____	35	$64 \div 8 =$ _____	55	$72 \div 8 =$ _____
16	$56 \div 8 =$ _____	36	$32 \div 8 =$ _____	56	$64 \div 8 =$ _____
17	$40 \div 8 =$ _____	37	$72 \div 8 =$ _____	57	$48 \div 8 =$ _____
18	$16 \div 8 =$ _____	38	$80 \div 8 =$ _____	58	$56 \div 8 =$ _____
19	$96 \div 8 =$ _____	39	$80 \div 8 =$ _____	59	$80 \div 8 =$ _____
20	$88 \div 8 =$ _____	40	$56 \div 8 =$ _____	60	$48 \div 8 =$ _____

Time taken

:

🕒 3 minute time limit 🕒

Score

60

What's your rock status?

WANNABE

< 18 correct in 3 mins

GARAGE ROCKER

18-19 correct in 3 mins

BUSKER

20-21 correct in 3 mins

GIGGER

22-24 correct in 3 mins

UNSIGNED ACT

25-29 correct in 3 mins

BREAKTHROUGH ARTIST

30-35 correct in 3 mins

SUPPORT ACT

36-44 correct in 3 mins

HEADLINER

45-59 correct in 3 mins

ROCK STAR

All correct in \leq 3mins

ROCK LEGEND

All correct in \leq 2min

ROCK HERO

All correct in \leq 1 min

**TIMES TABLES
ROCK STARS**

Name: _____

Week 19 Session 3

2020-21

3s 4s and 8s

3 a week

**Times Tables
Rock Stars**

8



Times Tables

Licensed to Ashton Vale Primary School

1	$8 \times 9 =$ _____	21	$8 \times 10 =$ _____	41	$40 \div 8 =$ _____
2	$8 \times 7 =$ _____	22	$8 \times 3 =$ _____	42	$40 \div 8 =$ _____
3	$8 \times 6 =$ _____	23	$8 \times 12 =$ _____	43	$40 \div 8 =$ _____
4	$8 \times 6 =$ _____	24	$8 \times 3 =$ _____	44	$24 \div 8 =$ _____
5	$8 \times 2 =$ _____	25	$8 \times 1 =$ _____	45	$24 \div 8 =$ _____
6	$8 \times 8 =$ _____	26	$8 \times 7 =$ _____	46	$64 \div 8 =$ _____
7	$8 \times 2 =$ _____	27	$8 \times 4 =$ _____	47	$72 \div 8 =$ _____
8	$8 \times 4 =$ _____	28	$8 \times 5 =$ _____	48	$16 \div 8 =$ _____
9	$8 \times 1 =$ _____	29	$8 \times 4 =$ _____	49	$56 \div 8 =$ _____
10	$8 \times 4 =$ _____	30	$8 \times 10 =$ _____	50	$32 \div 8 =$ _____
11	$8 \times 5 =$ _____	31	$80 \div 8 =$ _____	51	$96 \div 8 =$ _____
12	$8 \times 3 =$ _____	32	$56 \div 8 =$ _____	52	$8 \div 8 =$ _____
13	$8 \times 2 =$ _____	33	$32 \div 8 =$ _____	53	$40 \div 8 =$ _____
14	$8 \times 1 =$ _____	34	$16 \div 8 =$ _____	54	$56 \div 8 =$ _____
15	$8 \times 8 =$ _____	35	$40 \div 8 =$ _____	55	$24 \div 8 =$ _____
16	$8 \times 9 =$ _____	36	$56 \div 8 =$ _____	56	$88 \div 8 =$ _____
17	$8 \times 11 =$ _____	37	$32 \div 8 =$ _____	57	$8 \div 8 =$ _____
18	$8 \times 11 =$ _____	38	$24 \div 8 =$ _____	58	$40 \div 8 =$ _____
19	$8 \times 6 =$ _____	39	$80 \div 8 =$ _____	59	$96 \div 8 =$ _____
20	$8 \times 9 =$ _____	40	$80 \div 8 =$ _____	60	$56 \div 8 =$ _____

Time taken

:

 3 minute time limit 

Score

60

Add up your time

Mins

S1 _____

S2 _____

S3 _____

Total _____

Secs

S1 _____

S2 _____

S3 _____

Total _____

Add up your score

S1 _____

S2 _____

S3 _____

Total _____

Name: _____

Week 20 Session 1

2020-21

3s 4s and 8s

3 a week

Times Tables Rock Stars

3,4,8 Times Tables

Licensed to Ashton Vale Primary School

1	$3 \times 8 =$ _____	21	$8 \times 1 =$ _____	41	$4 \times 4 =$ _____
2	$3 \times 3 =$ _____	22	$8 \times 4 =$ _____	42	$2 \times 4 =$ _____
3	$8 \times 3 =$ _____	23	$8 \times 5 =$ _____	43	$5 \times 3 =$ _____
4	$4 \times 7 =$ _____	24	$3 \times 8 =$ _____	44	$1 \times 4 =$ _____
5	$8 \times 11 =$ _____	25	$8 \times 2 =$ _____	45	$5 \times 3 =$ _____
6	$3 \times 5 =$ _____	26	$8 \times 12 =$ _____	46	$3 \times 4 =$ _____
7	$8 \times 11 =$ _____	27	$3 \times 6 =$ _____	47	$4 \times 4 =$ _____
8	$4 \times 7 =$ _____	28	$3 \times 1 =$ _____	48	$9 \times 4 =$ _____
9	$8 \times 2 =$ _____	29	$8 \times 6 =$ _____	49	$2 \times 8 =$ _____
10	$3 \times 2 =$ _____	30	$8 \times 6 =$ _____	50	$8 \times 8 =$ _____
11	$4 \times 1 =$ _____	31	$7 \times 8 =$ _____	51	$10 \times 4 =$ _____
12	$4 \times 4 =$ _____	32	$11 \times 4 =$ _____	52	$8 \times 3 =$ _____
13	$8 \times 3 =$ _____	33	$7 \times 3 =$ _____	53	$1 \times 4 =$ _____
14	$3 \times 6 =$ _____	34	$10 \times 3 =$ _____	54	$5 \times 8 =$ _____
15	$3 \times 3 =$ _____	35	$9 \times 4 =$ _____	55	$8 \times 8 =$ _____
16	$4 \times 6 =$ _____	36	$6 \times 3 =$ _____	56	$5 \times 8 =$ _____
17	$8 \times 6 =$ _____	37	$10 \times 3 =$ _____	57	$2 \times 8 =$ _____
18	$4 \times 5 =$ _____	38	$3 \times 4 =$ _____	58	$7 \times 3 =$ _____
19	$3 \times 4 =$ _____	39	$12 \times 3 =$ _____	59	$10 \times 4 =$ _____
20	$4 \times 8 =$ _____	40	$2 \times 4 =$ _____	60	$1 \times 3 =$ _____

Time taken

:

🕒 3 minute time limit 🕒

Score

60

What's your rock status?

WANNABE

< 18 correct in 3 mins

GARAGE ROCKER

18-19 correct in 3 mins

BUSKER

20-21 correct in 3 mins

GIGGER

22-24 correct in 3 mins

UNSIGNED ACT

25-29 correct in 3 mins

BREAKTHROUGH ARTIST

30-35 correct in 3 mins

SUPPORT ACT

36-44 correct in 3 mins

HEADLINER

45-59 correct in 3 mins

ROCK STAR

All correct in \leq 3mins

ROCK LEGEND

All correct in \leq 2min

ROCK HERO

All correct in \leq 1 min

**TIMES TABLES
ROCK STARS**

Name: _____

Week 20 Session 2

2020-21

3s 4s and 8s

3 a week

Times Tables Rock Stars

3,4,8 Times Tables

Licensed to Ashton Vale Primary School

1	$8 \div 4 =$ _____	21	$8 \div 8 =$ _____	41	$40 \div 4 =$ _____
2	$16 \div 8 =$ _____	22	$24 \div 8 =$ _____	42	$32 \div 8 =$ _____
3	$9 \div 3 =$ _____	23	$36 \div 3 =$ _____	43	$36 \div 4 =$ _____
4	$16 \div 8 =$ _____	24	$15 \div 3 =$ _____	44	$16 \div 4 =$ _____
5	$12 \div 4 =$ _____	25	$18 \div 3 =$ _____	45	$44 \div 4 =$ _____
6	$24 \div 3 =$ _____	26	$56 \div 8 =$ _____	46	$64 \div 8 =$ _____
7	$56 \div 8 =$ _____	27	$28 \div 4 =$ _____	47	$16 \div 4 =$ _____
8	$4 \div 4 =$ _____	28	$12 \div 4 =$ _____	48	$8 \div 8 =$ _____
9	$27 \div 3 =$ _____	29	$44 \div 4 =$ _____	49	$20 \div 4 =$ _____
10	$21 \div 3 =$ _____	30	$15 \div 3 =$ _____	50	$8 \div 4 =$ _____
11	$64 \div 8 =$ _____	31	$3 \div 3 =$ _____	51	$32 \div 4 =$ _____
12	$40 \div 8 =$ _____	32	$16 \div 8 =$ _____	52	$72 \div 8 =$ _____
13	$16 \div 8 =$ _____	33	$24 \div 4 =$ _____	53	$88 \div 8 =$ _____
14	$18 \div 3 =$ _____	34	$44 \div 4 =$ _____	54	$30 \div 3 =$ _____
15	$36 \div 3 =$ _____	35	$24 \div 3 =$ _____	55	$33 \div 3 =$ _____
16	$32 \div 4 =$ _____	36	$15 \div 3 =$ _____	56	$27 \div 3 =$ _____
17	$16 \div 4 =$ _____	37	$24 \div 3 =$ _____	57	$88 \div 8 =$ _____
18	$44 \div 4 =$ _____	38	$48 \div 4 =$ _____	58	$3 \div 3 =$ _____
19	$32 \div 8 =$ _____	39	$6 \div 3 =$ _____	59	$24 \div 3 =$ _____
20	$24 \div 3 =$ _____	40	$15 \div 3 =$ _____	60	$24 \div 3 =$ _____

Time taken

:

🕒 3 minute time limit 🕒

Score

60

What's your rock status?

WANNABE

< 18 correct in 3 mins

GARAGE ROCKER

18-19 correct in 3 mins

BUSKER

20-21 correct in 3 mins

GIGGER

22-24 correct in 3 mins

UNSIGNED ACT

25-29 correct in 3 mins

BREAKTHROUGH ARTIST

30-35 correct in 3 mins

SUPPORT ACT

36-44 correct in 3 mins

HEADLINER

45-59 correct in 3 mins

ROCK STAR

All correct in \leq 3mins

ROCK LEGEND

All correct in \leq 2min

ROCK HERO

All correct in \leq 1 min

**TIMES TABLES
ROCK STARS**

Name: _____

Week 20 Session 3

2020-21

3s 4s and 8s

3 a week

Times Tables Rock Stars

3,4,8 Times Tables

Licensed to Ashton Vale Primary School

1	$4 \times 6 =$ _____	21	$4 \times 8 =$ _____	41	$80 \div 8 =$ _____
2	$3 \times 6 =$ _____	22	$3 \times 4 =$ _____	42	$12 \div 3 =$ _____
3	$3 \times 6 =$ _____	23	$8 \times 11 =$ _____	43	$88 \div 8 =$ _____
4	$8 \times 6 =$ _____	24	$4 \times 10 =$ _____	44	$36 \div 3 =$ _____
5	$8 \times 6 =$ _____	25	$4 \times 8 =$ _____	45	$32 \div 8 =$ _____
6	$3 \times 4 =$ _____	26	$3 \times 8 =$ _____	46	$9 \div 3 =$ _____
7	$3 \times 9 =$ _____	27	$3 \times 7 =$ _____	47	$48 \div 8 =$ _____
8	$8 \times 7 =$ _____	28	$3 \times 5 =$ _____	48	$24 \div 4 =$ _____
9	$3 \times 10 =$ _____	29	$4 \times 9 =$ _____	49	$18 \div 3 =$ _____
10	$8 \times 8 =$ _____	30	$3 \times 1 =$ _____	50	$80 \div 8 =$ _____
11	$8 \times 7 =$ _____	31	$88 \div 8 =$ _____	51	$27 \div 3 =$ _____
12	$4 \times 4 =$ _____	32	$64 \div 8 =$ _____	52	$24 \div 4 =$ _____
13	$8 \times 1 =$ _____	33	$20 \div 4 =$ _____	53	$4 \div 4 =$ _____
14	$3 \times 12 =$ _____	34	$18 \div 3 =$ _____	54	$36 \div 3 =$ _____
15	$8 \times 5 =$ _____	35	$32 \div 4 =$ _____	55	$12 \div 3 =$ _____
16	$3 \times 7 =$ _____	36	$44 \div 4 =$ _____	56	$96 \div 8 =$ _____
17	$8 \times 8 =$ _____	37	$20 \div 4 =$ _____	57	$72 \div 8 =$ _____
18	$3 \times 6 =$ _____	38	$27 \div 3 =$ _____	58	$64 \div 8 =$ _____
19	$3 \times 10 =$ _____	39	$6 \div 3 =$ _____	59	$96 \div 8 =$ _____
20	$3 \times 8 =$ _____	40	$72 \div 8 =$ _____	60	$12 \div 4 =$ _____

Time taken

:

🕒 3 minute time limit 🕒

Score

60

Add up your time

Mins

S1 _____

S2 _____

S3 _____

Total _____

Secs

S1 _____

S2 _____

S3 _____

Total _____

Add up your score

S1 _____

S2 _____

S3 _____

Total _____

Name: _____

Week 21 Session 1

2020-21

3s 4s and 8s

3 a week

Times Tables Rock Stars

3,4,8 Times Tables

Licensed to Ashton Vale Primary School

1	$4 \times 11 =$ _____	21	$8 \times 12 =$ _____	41	$9 \times 8 =$ _____
2	$4 \times 7 =$ _____	22	$4 \times 7 =$ _____	42	$6 \times 4 =$ _____
3	$3 \times 12 =$ _____	23	$3 \times 4 =$ _____	43	$10 \times 8 =$ _____
4	$4 \times 11 =$ _____	24	$8 \times 6 =$ _____	44	$2 \times 4 =$ _____
5	$8 \times 12 =$ _____	25	$8 \times 6 =$ _____	45	$8 \times 3 =$ _____
6	$4 \times 12 =$ _____	26	$4 \times 11 =$ _____	46	$1 \times 4 =$ _____
7	$4 \times 5 =$ _____	27	$4 \times 12 =$ _____	47	$11 \times 8 =$ _____
8	$3 \times 7 =$ _____	28	$3 \times 5 =$ _____	48	$8 \times 4 =$ _____
9	$4 \times 11 =$ _____	29	$4 \times 8 =$ _____	49	$5 \times 3 =$ _____
10	$3 \times 2 =$ _____	30	$3 \times 1 =$ _____	50	$12 \times 3 =$ _____
11	$3 \times 5 =$ _____	31	$8 \times 4 =$ _____	51	$5 \times 8 =$ _____
12	$4 \times 5 =$ _____	32	$12 \times 8 =$ _____	52	$8 \times 8 =$ _____
13	$4 \times 11 =$ _____	33	$7 \times 8 =$ _____	53	$4 \times 3 =$ _____
14	$4 \times 3 =$ _____	34	$11 \times 8 =$ _____	54	$9 \times 3 =$ _____
15	$3 \times 1 =$ _____	35	$12 \times 3 =$ _____	55	$1 \times 3 =$ _____
16	$3 \times 7 =$ _____	36	$2 \times 8 =$ _____	56	$7 \times 3 =$ _____
17	$4 \times 6 =$ _____	37	$5 \times 8 =$ _____	57	$10 \times 8 =$ _____
18	$4 \times 10 =$ _____	38	$10 \times 3 =$ _____	58	$3 \times 4 =$ _____
19	$8 \times 6 =$ _____	39	$12 \times 4 =$ _____	59	$5 \times 4 =$ _____
20	$3 \times 11 =$ _____	40	$3 \times 8 =$ _____	60	$12 \times 8 =$ _____

Time taken

:

🕒 3 minute time limit 🕒

Score

60

What's your rock status?

WANNABE

< 18 correct in 3 mins

GARAGE ROCKER

18-19 correct in 3 mins

BUSKER

20-21 correct in 3 mins

GIGGER

22-24 correct in 3 mins

UNSIGNED ACT

25-29 correct in 3 mins

BREAKTHROUGH ARTIST

30-35 correct in 3 mins

SUPPORT ACT

36-44 correct in 3 mins

HEADLINER

45-59 correct in 3 mins

ROCK STAR

All correct in \leq 3mins

ROCK LEGEND

All correct in \leq 2min

ROCK HERO

All correct in \leq 1 min

**TIMES TABLES
ROCK STARS**

Name: _____

Week 21 Session 2

2020-21

3s 4s and 8s

3 a week

Times Tables Rock Stars

3,4,8 Times Tables

Licensed to Ashton Vale Primary School

1	$12 \div 3 =$ _____	21	$36 \div 4 =$ _____	41	$48 \div 4 =$ _____
2	$6 \div 3 =$ _____	22	$27 \div 3 =$ _____	42	$4 \div 4 =$ _____
3	$9 \div 3 =$ _____	23	$32 \div 4 =$ _____	43	$56 \div 8 =$ _____
4	$24 \div 3 =$ _____	24	$12 \div 3 =$ _____	44	$48 \div 4 =$ _____
5	$72 \div 8 =$ _____	25	$20 \div 4 =$ _____	45	$32 \div 4 =$ _____
6	$56 \div 8 =$ _____	26	$36 \div 3 =$ _____	46	$24 \div 8 =$ _____
7	$40 \div 4 =$ _____	27	$33 \div 3 =$ _____	47	$21 \div 3 =$ _____
8	$56 \div 8 =$ _____	28	$36 \div 4 =$ _____	48	$6 \div 3 =$ _____
9	$27 \div 3 =$ _____	29	$96 \div 8 =$ _____	49	$64 \div 8 =$ _____
10	$80 \div 8 =$ _____	30	$24 \div 4 =$ _____	50	$40 \div 8 =$ _____
11	$24 \div 8 =$ _____	31	$36 \div 3 =$ _____	51	$3 \div 3 =$ _____
12	$9 \div 3 =$ _____	32	$24 \div 3 =$ _____	52	$15 \div 3 =$ _____
13	$80 \div 8 =$ _____	33	$64 \div 8 =$ _____	53	$12 \div 4 =$ _____
14	$33 \div 3 =$ _____	34	$80 \div 8 =$ _____	54	$48 \div 4 =$ _____
15	$32 \div 8 =$ _____	35	$48 \div 8 =$ _____	55	$15 \div 3 =$ _____
16	$16 \div 4 =$ _____	36	$24 \div 4 =$ _____	56	$27 \div 3 =$ _____
17	$12 \div 3 =$ _____	37	$4 \div 4 =$ _____	57	$6 \div 3 =$ _____
18	$3 \div 3 =$ _____	38	$32 \div 4 =$ _____	58	$24 \div 3 =$ _____
19	$56 \div 8 =$ _____	39	$64 \div 8 =$ _____	59	$18 \div 3 =$ _____
20	$32 \div 4 =$ _____	40	$96 \div 8 =$ _____	60	$48 \div 8 =$ _____

Time taken

:

🕒 3 minute time limit 🕒

Score

60

What's your rock status?

WANNABE

< 18 correct in 3 mins

GARAGE ROCKER

18-19 correct in 3 mins

BUSKER

20-21 correct in 3 mins

GIGGER

22-24 correct in 3 mins

UNSIGNED ACT

25-29 correct in 3 mins

BREAKTHROUGH ARTIST

30-35 correct in 3 mins

SUPPORT ACT

36-44 correct in 3 mins

HEADLINER

45-59 correct in 3 mins

ROCK STAR

All correct in ≤ 3 mins

ROCK LEGEND

All correct in ≤ 2 min

ROCK HERO

All correct in ≤ 1 min

**TIMES TABLES
ROCK STARS**

Name: _____

Week 21 Session 3

2020-21

3s 4s and 8s

3 a week

Times Tables Rock Stars

3,4,8 Times Tables

Licensed to Ashton Vale Primary School

1	$3 \times 4 =$ _____	21	$8 \times 5 =$ _____	41	$32 \div 8 =$ _____
2	$8 \times 4 =$ _____	22	$8 \times 2 =$ _____	42	$6 \div 3 =$ _____
3	$3 \times 3 =$ _____	23	$8 \times 11 =$ _____	43	$64 \div 8 =$ _____
4	$4 \times 7 =$ _____	24	$4 \times 3 =$ _____	44	$20 \div 4 =$ _____
5	$8 \times 3 =$ _____	25	$8 \times 3 =$ _____	45	$96 \div 8 =$ _____
6	$8 \times 2 =$ _____	26	$8 \times 1 =$ _____	46	$32 \div 4 =$ _____
7	$4 \times 4 =$ _____	27	$4 \times 7 =$ _____	47	$16 \div 4 =$ _____
8	$4 \times 11 =$ _____	28	$4 \times 11 =$ _____	48	$4 \div 4 =$ _____
9	$3 \times 3 =$ _____	29	$8 \times 1 =$ _____	49	$96 \div 8 =$ _____
10	$4 \times 3 =$ _____	30	$4 \times 7 =$ _____	50	$80 \div 8 =$ _____
11	$3 \times 8 =$ _____	31	$96 \div 8 =$ _____	51	$24 \div 3 =$ _____
12	$8 \times 4 =$ _____	32	$8 \div 4 =$ _____	52	$16 \div 8 =$ _____
13	$8 \times 7 =$ _____	33	$72 \div 8 =$ _____	53	$24 \div 3 =$ _____
14	$3 \times 12 =$ _____	34	$4 \div 4 =$ _____	54	$27 \div 3 =$ _____
15	$8 \times 4 =$ _____	35	$36 \div 4 =$ _____	55	$18 \div 3 =$ _____
16	$4 \times 10 =$ _____	36	$44 \div 4 =$ _____	56	$3 \div 3 =$ _____
17	$3 \times 8 =$ _____	37	$48 \div 8 =$ _____	57	$80 \div 8 =$ _____
18	$8 \times 7 =$ _____	38	$64 \div 8 =$ _____	58	$33 \div 3 =$ _____
19	$3 \times 7 =$ _____	39	$20 \div 4 =$ _____	59	$44 \div 4 =$ _____
20	$3 \times 4 =$ _____	40	$32 \div 8 =$ _____	60	$64 \div 8 =$ _____

Time taken

:

 3 minute time limit 

Score

60

Add up your time

Mins

S1 _____

S2 _____

S3 _____

Total _____

Secs

S1 _____

S2 _____

S3 _____

Total _____

Add up your score

S1 _____

S2 _____

S3 _____

Total _____

Name: _____

Week 22 Session 1

2020-21

3s 4s and 8s

3 a week

Times Tables Rock Stars

3,4,8 Times Tables

Licensed to Ashton Vale Primary School

1	$3 \times 10 =$ _____	21	$8 \times 12 =$ _____	41	$8 \times 8 =$ _____
2	$4 \times 7 =$ _____	22	$8 \times 8 =$ _____	42	$6 \times 4 =$ _____
3	$8 \times 5 =$ _____	23	$8 \times 1 =$ _____	43	$11 \times 8 =$ _____
4	$4 \times 2 =$ _____	24	$3 \times 1 =$ _____	44	$11 \times 8 =$ _____
5	$3 \times 2 =$ _____	25	$8 \times 8 =$ _____	45	$3 \times 3 =$ _____
6	$8 \times 3 =$ _____	26	$8 \times 4 =$ _____	46	$3 \times 8 =$ _____
7	$3 \times 9 =$ _____	27	$3 \times 12 =$ _____	47	$12 \times 3 =$ _____
8	$4 \times 5 =$ _____	28	$4 \times 8 =$ _____	48	$6 \times 8 =$ _____
9	$3 \times 7 =$ _____	29	$4 \times 2 =$ _____	49	$12 \times 3 =$ _____
10	$3 \times 10 =$ _____	30	$8 \times 3 =$ _____	50	$5 \times 8 =$ _____
11	$4 \times 5 =$ _____	31	$6 \times 3 =$ _____	51	$9 \times 8 =$ _____
12	$4 \times 9 =$ _____	32	$9 \times 4 =$ _____	52	$6 \times 3 =$ _____
13	$3 \times 10 =$ _____	33	$3 \times 3 =$ _____	53	$6 \times 8 =$ _____
14	$8 \times 7 =$ _____	34	$12 \times 3 =$ _____	54	$2 \times 8 =$ _____
15	$3 \times 1 =$ _____	35	$10 \times 3 =$ _____	55	$1 \times 4 =$ _____
16	$4 \times 6 =$ _____	36	$4 \times 8 =$ _____	56	$9 \times 8 =$ _____
17	$3 \times 11 =$ _____	37	$2 \times 8 =$ _____	57	$4 \times 8 =$ _____
18	$3 \times 3 =$ _____	38	$9 \times 8 =$ _____	58	$5 \times 8 =$ _____
19	$4 \times 3 =$ _____	39	$12 \times 8 =$ _____	59	$12 \times 8 =$ _____
20	$8 \times 1 =$ _____	40	$6 \times 3 =$ _____	60	$7 \times 4 =$ _____

Time taken

:

🕒 3 minute time limit 🕒

Score

60

What's your rock status?

WANNABE

< 18 correct in 3 mins

GARAGE ROCKER

18-19 correct in 3 mins

BUSKER

20-21 correct in 3 mins

GIGGER

22-24 correct in 3 mins

UNSIGNED ACT

25-29 correct in 3 mins

BREAKTHROUGH ARTIST

30-35 correct in 3 mins

SUPPORT ACT

36-44 correct in 3 mins

HEADLINER

45-59 correct in 3 mins

ROCK STAR

All correct in \leq 3mins

ROCK LEGEND

All correct in \leq 2min

ROCK HERO

All correct in \leq 1 min

**TIMES TABLES
ROCK STARS**

Name: _____

Week 22 Session 2

2020-21

3s 4s and 8s

3 a week

Times Tables Rock Stars

3,4,8 Times Tables

Licensed to Ashton Vale Primary School

1	$80 \div 8 =$ _____	21	$33 \div 3 =$ _____	41	$30 \div 3 =$ _____
2	$6 \div 3 =$ _____	22	$28 \div 4 =$ _____	42	$18 \div 3 =$ _____
3	$32 \div 8 =$ _____	23	$3 \div 3 =$ _____	43	$24 \div 4 =$ _____
4	$24 \div 8 =$ _____	24	$32 \div 4 =$ _____	44	$33 \div 3 =$ _____
5	$88 \div 8 =$ _____	25	$12 \div 4 =$ _____	45	$28 \div 4 =$ _____
6	$12 \div 4 =$ _____	26	$64 \div 8 =$ _____	46	$56 \div 8 =$ _____
7	$18 \div 3 =$ _____	27	$48 \div 4 =$ _____	47	$32 \div 8 =$ _____
8	$3 \div 3 =$ _____	28	$9 \div 3 =$ _____	48	$16 \div 8 =$ _____
9	$28 \div 4 =$ _____	29	$12 \div 3 =$ _____	49	$16 \div 8 =$ _____
10	$64 \div 8 =$ _____	30	$36 \div 4 =$ _____	50	$9 \div 3 =$ _____
11	$24 \div 4 =$ _____	31	$48 \div 4 =$ _____	51	$24 \div 3 =$ _____
12	$64 \div 8 =$ _____	32	$64 \div 8 =$ _____	52	$48 \div 8 =$ _____
13	$12 \div 3 =$ _____	33	$24 \div 4 =$ _____	53	$44 \div 4 =$ _____
14	$64 \div 8 =$ _____	34	$24 \div 8 =$ _____	54	$24 \div 8 =$ _____
15	$24 \div 8 =$ _____	35	$18 \div 3 =$ _____	55	$9 \div 3 =$ _____
16	$48 \div 4 =$ _____	36	$9 \div 3 =$ _____	56	$27 \div 3 =$ _____
17	$36 \div 3 =$ _____	37	$24 \div 4 =$ _____	57	$48 \div 8 =$ _____
18	$80 \div 8 =$ _____	38	$4 \div 4 =$ _____	58	$44 \div 4 =$ _____
19	$8 \div 4 =$ _____	39	$24 \div 4 =$ _____	59	$21 \div 3 =$ _____
20	$48 \div 8 =$ _____	40	$48 \div 4 =$ _____	60	$36 \div 4 =$ _____

Time taken

:

🕒 3 minute time limit 🕒

Score

60

What's your rock status?

WANNABE

< 18 correct in 3 mins

GARAGE ROCKER

18-19 correct in 3 mins

BUSKER

20-21 correct in 3 mins

GIGGER

22-24 correct in 3 mins

UNSIGNED ACT

25-29 correct in 3 mins

BREAKTHROUGH ARTIST

30-35 correct in 3 mins

SUPPORT ACT

36-44 correct in 3 mins

HEADLINER

45-59 correct in 3 mins

ROCK STAR

All correct in \leq 3mins

ROCK LEGEND

All correct in \leq 2min

ROCK HERO

All correct in \leq 1 min

**TIMES TABLES
ROCK STARS**

Name: _____

Week 22 Session 3

2020-21

3s 4s and 8s

3 a week

Times Tables Rock Stars

3,4,8 Times Tables

Licensed to Ashton Vale Primary School

1	$8 \times 12 =$ _____	21	$3 \times 9 =$ _____	41	$24 \div 4 =$ _____
2	$8 \times 6 =$ _____	22	$8 \times 7 =$ _____	42	$48 \div 8 =$ _____
3	$8 \times 5 =$ _____	23	$4 \times 2 =$ _____	43	$8 \div 4 =$ _____
4	$8 \times 4 =$ _____	24	$3 \times 7 =$ _____	44	$8 \div 4 =$ _____
5	$3 \times 3 =$ _____	25	$4 \times 4 =$ _____	45	$44 \div 4 =$ _____
6	$4 \times 1 =$ _____	26	$4 \times 7 =$ _____	46	$32 \div 8 =$ _____
7	$8 \times 8 =$ _____	27	$8 \times 7 =$ _____	47	$8 \div 8 =$ _____
8	$4 \times 10 =$ _____	28	$8 \times 11 =$ _____	48	$15 \div 3 =$ _____
9	$8 \times 10 =$ _____	29	$8 \times 5 =$ _____	49	$16 \div 4 =$ _____
10	$4 \times 10 =$ _____	30	$3 \times 2 =$ _____	50	$12 \div 4 =$ _____
11	$3 \times 5 =$ _____	31	$48 \div 8 =$ _____	51	$8 \div 8 =$ _____
12	$8 \times 9 =$ _____	32	$24 \div 3 =$ _____	52	$12 \div 4 =$ _____
13	$4 \times 1 =$ _____	33	$18 \div 3 =$ _____	53	$36 \div 3 =$ _____
14	$3 \times 7 =$ _____	34	$24 \div 4 =$ _____	54	$8 \div 4 =$ _____
15	$4 \times 2 =$ _____	35	$24 \div 4 =$ _____	55	$33 \div 3 =$ _____
16	$8 \times 5 =$ _____	36	$24 \div 8 =$ _____	56	$32 \div 8 =$ _____
17	$8 \times 2 =$ _____	37	$88 \div 8 =$ _____	57	$72 \div 8 =$ _____
18	$4 \times 6 =$ _____	38	$33 \div 3 =$ _____	58	$36 \div 4 =$ _____
19	$8 \times 6 =$ _____	39	$30 \div 3 =$ _____	59	$3 \div 3 =$ _____
20	$3 \times 2 =$ _____	40	$9 \div 3 =$ _____	60	$32 \div 8 =$ _____

Time taken

:

🕒 3 minute time limit 🕒

Score

60

Add up your time

Mins
S1 _____
S2 _____
S3 _____
Total _____

Secs
S1 _____
S2 _____
S3 _____
Total _____

Add up your score
S1 _____
S2 _____
S3 _____
Total _____

Name: _____

Week 23 Session 1

2020-21

3s 4s and 8s

3 a week

Times Tables Rock Stars

3 Times Tables

Licensed to Ashton Vale Primary School

1	$3 \times 11 =$ _____	21	$3 \times 3 =$ _____	41	$7 \times 3 =$ _____
2	$3 \times 4 =$ _____	22	$3 \times 9 =$ _____	42	$3 \times 3 =$ _____
3	$3 \times 11 =$ _____	23	$3 \times 10 =$ _____	43	$8 \times 3 =$ _____
4	$3 \times 8 =$ _____	24	$3 \times 6 =$ _____	44	$10 \times 3 =$ _____
5	$3 \times 3 =$ _____	25	$3 \times 7 =$ _____	45	$4 \times 3 =$ _____
6	$3 \times 3 =$ _____	26	$3 \times 7 =$ _____	46	$3 \times 3 =$ _____
7	$3 \times 8 =$ _____	27	$3 \times 5 =$ _____	47	$3 \times 3 =$ _____
8	$3 \times 11 =$ _____	28	$3 \times 1 =$ _____	48	$12 \times 3 =$ _____
9	$3 \times 8 =$ _____	29	$3 \times 6 =$ _____	49	$12 \times 3 =$ _____
10	$3 \times 2 =$ _____	30	$3 \times 11 =$ _____	50	$9 \times 3 =$ _____
11	$3 \times 3 =$ _____	31	$2 \times 3 =$ _____	51	$3 \times 3 =$ _____
12	$3 \times 4 =$ _____	32	$1 \times 3 =$ _____	52	$9 \times 3 =$ _____
13	$3 \times 7 =$ _____	33	$3 \times 3 =$ _____	53	$12 \times 3 =$ _____
14	$3 \times 5 =$ _____	34	$5 \times 3 =$ _____	54	$9 \times 3 =$ _____
15	$3 \times 3 =$ _____	35	$1 \times 3 =$ _____	55	$5 \times 3 =$ _____
16	$3 \times 3 =$ _____	36	$6 \times 3 =$ _____	56	$12 \times 3 =$ _____
17	$3 \times 10 =$ _____	37	$2 \times 3 =$ _____	57	$2 \times 3 =$ _____
18	$3 \times 11 =$ _____	38	$2 \times 3 =$ _____	58	$3 \times 3 =$ _____
19	$3 \times 2 =$ _____	39	$12 \times 3 =$ _____	59	$4 \times 3 =$ _____
20	$3 \times 11 =$ _____	40	$1 \times 3 =$ _____	60	$11 \times 3 =$ _____

Time taken

:

🕒 3 minute time limit 🕒

Score

60

What's your rock status?

WANNABE

< 18 correct in 3 mins

GARAGE ROCKER

18-19 correct in 3 mins

BUSKER

20-21 correct in 3 mins

GIGGER

22-24 correct in 3 mins

UNSIGNED ACT

25-29 correct in 3 mins

BREAKTHROUGH ARTIST

30-35 correct in 3 mins

SUPPORT ACT

36-44 correct in 3 mins

HEADLINER

45-59 correct in 3 mins

ROCK STAR

All correct in \leq 3mins

ROCK LEGEND

All correct in \leq 2min

ROCK HERO

All correct in \leq 1 min

**TIMES TABLES
ROCK STARS**

Name: _____

Week 23 Session 2

2020-21

3s 4s and 8s

3 a week

Times Tables Rock Stars

3

Times Tables

Licensed to Ashton Vale Primary School

1	$6 \div 3 =$ _____	21	$12 \div 3 =$ _____	41	$21 \div 3 =$ _____
2	$36 \div 3 =$ _____	22	$36 \div 3 =$ _____	42	$30 \div 3 =$ _____
3	$15 \div 3 =$ _____	23	$33 \div 3 =$ _____	43	$33 \div 3 =$ _____
4	$18 \div 3 =$ _____	24	$36 \div 3 =$ _____	44	$24 \div 3 =$ _____
5	$27 \div 3 =$ _____	25	$15 \div 3 =$ _____	45	$33 \div 3 =$ _____
6	$24 \div 3 =$ _____	26	$6 \div 3 =$ _____	46	$9 \div 3 =$ _____
7	$21 \div 3 =$ _____	27	$15 \div 3 =$ _____	47	$33 \div 3 =$ _____
8	$9 \div 3 =$ _____	28	$12 \div 3 =$ _____	48	$33 \div 3 =$ _____
9	$18 \div 3 =$ _____	29	$6 \div 3 =$ _____	49	$24 \div 3 =$ _____
10	$12 \div 3 =$ _____	30	$24 \div 3 =$ _____	50	$33 \div 3 =$ _____
11	$9 \div 3 =$ _____	31	$36 \div 3 =$ _____	51	$9 \div 3 =$ _____
12	$15 \div 3 =$ _____	32	$33 \div 3 =$ _____	52	$21 \div 3 =$ _____
13	$24 \div 3 =$ _____	33	$27 \div 3 =$ _____	53	$9 \div 3 =$ _____
14	$24 \div 3 =$ _____	34	$21 \div 3 =$ _____	54	$15 \div 3 =$ _____
15	$9 \div 3 =$ _____	35	$6 \div 3 =$ _____	55	$24 \div 3 =$ _____
16	$9 \div 3 =$ _____	36	$33 \div 3 =$ _____	56	$30 \div 3 =$ _____
17	$33 \div 3 =$ _____	37	$33 \div 3 =$ _____	57	$21 \div 3 =$ _____
18	$9 \div 3 =$ _____	38	$18 \div 3 =$ _____	58	$15 \div 3 =$ _____
19	$6 \div 3 =$ _____	39	$30 \div 3 =$ _____	59	$24 \div 3 =$ _____
20	$12 \div 3 =$ _____	40	$24 \div 3 =$ _____	60	$30 \div 3 =$ _____

Time taken

:

🕒 3 minute time limit 🕒

Score

60

What's your rock status?

WANNABE

< 18 correct in 3 mins

GARAGE ROCKER

18-19 correct in 3 mins

BUSKER

20-21 correct in 3 mins

GIGGER

22-24 correct in 3 mins

UNSIGNED ACT

25-29 correct in 3 mins

BREAKTHROUGH ARTIST

30-35 correct in 3 mins

SUPPORT ACT

36-44 correct in 3 mins

HEADLINER

45-59 correct in 3 mins

ROCK STAR

All correct in \leq 3mins

ROCK LEGEND

All correct in \leq 2min

ROCK HERO

All correct in \leq 1 min

**TIMES TABLES
ROCK STARS**

Name: _____

Week 23 Session 3

2020-21

3s 4s and 8s

3 a week

Times Tables Rock Stars



3 Times Tables

Licensed to Ashton Vale Primary School

1	$3 \times 10 =$ _____	21	$3 \times 9 =$ _____	41	$36 \div 3 =$ _____
2	$3 \times 2 =$ _____	22	$3 \times 7 =$ _____	42	$30 \div 3 =$ _____
3	$3 \times 1 =$ _____	23	$3 \times 1 =$ _____	43	$18 \div 3 =$ _____
4	$3 \times 3 =$ _____	24	$3 \times 12 =$ _____	44	$12 \div 3 =$ _____
5	$3 \times 5 =$ _____	25	$3 \times 4 =$ _____	45	$3 \div 3 =$ _____
6	$3 \times 10 =$ _____	26	$3 \times 2 =$ _____	46	$27 \div 3 =$ _____
7	$3 \times 4 =$ _____	27	$3 \times 7 =$ _____	47	$18 \div 3 =$ _____
8	$3 \times 7 =$ _____	28	$3 \times 4 =$ _____	48	$18 \div 3 =$ _____
9	$3 \times 10 =$ _____	29	$3 \times 1 =$ _____	49	$18 \div 3 =$ _____
10	$3 \times 11 =$ _____	30	$3 \times 5 =$ _____	50	$24 \div 3 =$ _____
11	$3 \times 3 =$ _____	31	$15 \div 3 =$ _____	51	$18 \div 3 =$ _____
12	$3 \times 1 =$ _____	32	$12 \div 3 =$ _____	52	$18 \div 3 =$ _____
13	$3 \times 2 =$ _____	33	$30 \div 3 =$ _____	53	$30 \div 3 =$ _____
14	$3 \times 5 =$ _____	34	$6 \div 3 =$ _____	54	$21 \div 3 =$ _____
15	$3 \times 9 =$ _____	35	$24 \div 3 =$ _____	55	$12 \div 3 =$ _____
16	$3 \times 1 =$ _____	36	$24 \div 3 =$ _____	56	$18 \div 3 =$ _____
17	$3 \times 3 =$ _____	37	$27 \div 3 =$ _____	57	$12 \div 3 =$ _____
18	$3 \times 1 =$ _____	38	$3 \div 3 =$ _____	58	$21 \div 3 =$ _____
19	$3 \times 11 =$ _____	39	$30 \div 3 =$ _____	59	$24 \div 3 =$ _____
20	$3 \times 9 =$ _____	40	$9 \div 3 =$ _____	60	$27 \div 3 =$ _____

Time taken

:

 3 minute time limit 

Score

60

Add up your time

Mins

S1 _____

S2 _____

S3 _____

Total _____

Secs

S1 _____

S2 _____

S3 _____

Total _____

Add up your score

S1 _____

S2 _____

S3 _____

Total _____

Name: _____

Week 24 Session 1

2020-21

3s 4s and 8s

3 a week

Times Tables Rock Stars

3 Times Tables

Licensed to Ashton Vale Primary School

1	$3 \times 2 =$ _____	21	$3 \times 7 =$ _____	41	$5 \times 3 =$ _____
2	$3 \times 10 =$ _____	22	$3 \times 4 =$ _____	42	$9 \times 3 =$ _____
3	$3 \times 3 =$ _____	23	$3 \times 7 =$ _____	43	$8 \times 3 =$ _____
4	$3 \times 10 =$ _____	24	$3 \times 7 =$ _____	44	$1 \times 3 =$ _____
5	$3 \times 11 =$ _____	25	$3 \times 4 =$ _____	45	$2 \times 3 =$ _____
6	$3 \times 2 =$ _____	26	$3 \times 4 =$ _____	46	$5 \times 3 =$ _____
7	$3 \times 4 =$ _____	27	$3 \times 1 =$ _____	47	$9 \times 3 =$ _____
8	$3 \times 7 =$ _____	28	$3 \times 11 =$ _____	48	$10 \times 3 =$ _____
9	$3 \times 9 =$ _____	29	$3 \times 11 =$ _____	49	$4 \times 3 =$ _____
10	$3 \times 1 =$ _____	30	$3 \times 8 =$ _____	50	$8 \times 3 =$ _____
11	$3 \times 3 =$ _____	31	$6 \times 3 =$ _____	51	$3 \times 3 =$ _____
12	$3 \times 10 =$ _____	32	$4 \times 3 =$ _____	52	$4 \times 3 =$ _____
13	$3 \times 3 =$ _____	33	$11 \times 3 =$ _____	53	$5 \times 3 =$ _____
14	$3 \times 1 =$ _____	34	$2 \times 3 =$ _____	54	$8 \times 3 =$ _____
15	$3 \times 12 =$ _____	35	$8 \times 3 =$ _____	55	$5 \times 3 =$ _____
16	$3 \times 8 =$ _____	36	$1 \times 3 =$ _____	56	$12 \times 3 =$ _____
17	$3 \times 4 =$ _____	37	$4 \times 3 =$ _____	57	$7 \times 3 =$ _____
18	$3 \times 3 =$ _____	38	$7 \times 3 =$ _____	58	$11 \times 3 =$ _____
19	$3 \times 7 =$ _____	39	$9 \times 3 =$ _____	59	$9 \times 3 =$ _____
20	$3 \times 4 =$ _____	40	$3 \times 3 =$ _____	60	$5 \times 3 =$ _____

Time taken

:

🕒 3 minute time limit 🕒

Score

60

What's your rock status?

WANNABE

< 18 correct in 3 mins

GARAGE ROCKER

18-19 correct in 3 mins

BUSKER

20-21 correct in 3 mins

GIGGER

22-24 correct in 3 mins

UNSIGNED ACT

25-29 correct in 3 mins

BREAKTHROUGH ARTIST

30-35 correct in 3 mins

SUPPORT ACT

36-44 correct in 3 mins

HEADLINER

45-59 correct in 3 mins

ROCK STAR

All correct in \leq 3mins

ROCK LEGEND

All correct in \leq 2min

ROCK HERO

All correct in \leq 1 min

**TIMES TABLES
ROCK STARS**

Name: _____

Week 24 Session 2

2020-21

3s 4s and 8s

3 a week

Times Tables Rock Stars

3

Times Tables

Licensed to Ashton Vale Primary School

1	$33 \div 3 =$ _____	21	$24 \div 3 =$ _____	41	$24 \div 3 =$ _____
2	$6 \div 3 =$ _____	22	$21 \div 3 =$ _____	42	$9 \div 3 =$ _____
3	$3 \div 3 =$ _____	23	$15 \div 3 =$ _____	43	$36 \div 3 =$ _____
4	$36 \div 3 =$ _____	24	$9 \div 3 =$ _____	44	$33 \div 3 =$ _____
5	$9 \div 3 =$ _____	25	$21 \div 3 =$ _____	45	$6 \div 3 =$ _____
6	$9 \div 3 =$ _____	26	$18 \div 3 =$ _____	46	$33 \div 3 =$ _____
7	$18 \div 3 =$ _____	27	$36 \div 3 =$ _____	47	$15 \div 3 =$ _____
8	$12 \div 3 =$ _____	28	$9 \div 3 =$ _____	48	$36 \div 3 =$ _____
9	$12 \div 3 =$ _____	29	$33 \div 3 =$ _____	49	$33 \div 3 =$ _____
10	$33 \div 3 =$ _____	30	$24 \div 3 =$ _____	50	$36 \div 3 =$ _____
11	$18 \div 3 =$ _____	31	$24 \div 3 =$ _____	51	$21 \div 3 =$ _____
12	$27 \div 3 =$ _____	32	$15 \div 3 =$ _____	52	$36 \div 3 =$ _____
13	$27 \div 3 =$ _____	33	$27 \div 3 =$ _____	53	$6 \div 3 =$ _____
14	$36 \div 3 =$ _____	34	$12 \div 3 =$ _____	54	$12 \div 3 =$ _____
15	$33 \div 3 =$ _____	35	$30 \div 3 =$ _____	55	$24 \div 3 =$ _____
16	$15 \div 3 =$ _____	36	$15 \div 3 =$ _____	56	$6 \div 3 =$ _____
17	$33 \div 3 =$ _____	37	$27 \div 3 =$ _____	57	$27 \div 3 =$ _____
18	$3 \div 3 =$ _____	38	$3 \div 3 =$ _____	58	$6 \div 3 =$ _____
19	$33 \div 3 =$ _____	39	$36 \div 3 =$ _____	59	$9 \div 3 =$ _____
20	$18 \div 3 =$ _____	40	$12 \div 3 =$ _____	60	$3 \div 3 =$ _____

Time taken

:

🕒 3 minute time limit 🕒

Score

60

What's your rock status?

WANNABE

< 18 correct in 3 mins

GARAGE ROCKER

18-19 correct in 3 mins

BUSKER

20-21 correct in 3 mins

GIGGER

22-24 correct in 3 mins

UNSIGNED ACT

25-29 correct in 3 mins

BREAKTHROUGH ARTIST

30-35 correct in 3 mins

SUPPORT ACT

36-44 correct in 3 mins

HEADLINER

45-59 correct in 3 mins

ROCK STAR

All correct in ≤ 3 mins

ROCK LEGEND

All correct in ≤ 2 min

ROCK HERO

All correct in ≤ 1 min

**TIMES TABLES
ROCK STARS**

Name: _____

Week 24 Session 3

2020-21

3s 4s and 8s

3 a week

Times Tables Rock Stars



3 Times Tables

Licensed to Ashton Vale Primary School

1	$3 \times 6 =$ _____	21	$3 \times 9 =$ _____	41	$18 \div 3 =$ _____
2	$3 \times 7 =$ _____	22	$3 \times 1 =$ _____	42	$6 \div 3 =$ _____
3	$3 \times 6 =$ _____	23	$3 \times 4 =$ _____	43	$27 \div 3 =$ _____
4	$3 \times 7 =$ _____	24	$3 \times 1 =$ _____	44	$15 \div 3 =$ _____
5	$3 \times 2 =$ _____	25	$3 \times 1 =$ _____	45	$24 \div 3 =$ _____
6	$3 \times 6 =$ _____	26	$3 \times 7 =$ _____	46	$15 \div 3 =$ _____
7	$3 \times 8 =$ _____	27	$3 \times 8 =$ _____	47	$12 \div 3 =$ _____
8	$3 \times 4 =$ _____	28	$3 \times 10 =$ _____	48	$24 \div 3 =$ _____
9	$3 \times 11 =$ _____	29	$3 \times 10 =$ _____	49	$15 \div 3 =$ _____
10	$3 \times 12 =$ _____	30	$3 \times 4 =$ _____	50	$12 \div 3 =$ _____
11	$3 \times 12 =$ _____	31	$33 \div 3 =$ _____	51	$36 \div 3 =$ _____
12	$3 \times 1 =$ _____	32	$24 \div 3 =$ _____	52	$27 \div 3 =$ _____
13	$3 \times 7 =$ _____	33	$21 \div 3 =$ _____	53	$9 \div 3 =$ _____
14	$3 \times 5 =$ _____	34	$9 \div 3 =$ _____	54	$6 \div 3 =$ _____
15	$3 \times 8 =$ _____	35	$27 \div 3 =$ _____	55	$6 \div 3 =$ _____
16	$3 \times 6 =$ _____	36	$18 \div 3 =$ _____	56	$36 \div 3 =$ _____
17	$3 \times 4 =$ _____	37	$30 \div 3 =$ _____	57	$21 \div 3 =$ _____
18	$3 \times 5 =$ _____	38	$33 \div 3 =$ _____	58	$6 \div 3 =$ _____
19	$3 \times 10 =$ _____	39	$18 \div 3 =$ _____	59	$36 \div 3 =$ _____
20	$3 \times 12 =$ _____	40	$9 \div 3 =$ _____	60	$30 \div 3 =$ _____

Time taken

:

 3 minute time limit 

Score

60

Add up your time

Mins

S1 _____

S2 _____

S3 _____

Total _____

Secs

S1 _____

S2 _____

S3 _____

Total _____

Add up your score

S1 _____

S2 _____

S3 _____

Total _____

Name: _____

Week 25 Session 1

2020-21

3s 4s and 8s

3 a week

Times Tables Rock Stars

4

Times Tables

Licensed to Ashton Vale Primary School

1	$4 \times 2 =$ _____	21	$4 \times 2 =$ _____	41	$10 \times 4 =$ _____
2	$4 \times 6 =$ _____	22	$4 \times 8 =$ _____	42	$6 \times 4 =$ _____
3	$4 \times 3 =$ _____	23	$4 \times 2 =$ _____	43	$8 \times 4 =$ _____
4	$4 \times 5 =$ _____	24	$4 \times 7 =$ _____	44	$5 \times 4 =$ _____
5	$4 \times 6 =$ _____	25	$4 \times 11 =$ _____	45	$8 \times 4 =$ _____
6	$4 \times 2 =$ _____	26	$4 \times 11 =$ _____	46	$10 \times 4 =$ _____
7	$4 \times 2 =$ _____	27	$4 \times 6 =$ _____	47	$8 \times 4 =$ _____
8	$4 \times 7 =$ _____	28	$4 \times 7 =$ _____	48	$7 \times 4 =$ _____
9	$4 \times 8 =$ _____	29	$4 \times 10 =$ _____	49	$12 \times 4 =$ _____
10	$4 \times 2 =$ _____	30	$4 \times 3 =$ _____	50	$2 \times 4 =$ _____
11	$4 \times 3 =$ _____	31	$5 \times 4 =$ _____	51	$3 \times 4 =$ _____
12	$4 \times 3 =$ _____	32	$7 \times 4 =$ _____	52	$4 \times 4 =$ _____
13	$4 \times 11 =$ _____	33	$5 \times 4 =$ _____	53	$10 \times 4 =$ _____
14	$4 \times 2 =$ _____	34	$9 \times 4 =$ _____	54	$9 \times 4 =$ _____
15	$4 \times 1 =$ _____	35	$3 \times 4 =$ _____	55	$3 \times 4 =$ _____
16	$4 \times 6 =$ _____	36	$11 \times 4 =$ _____	56	$3 \times 4 =$ _____
17	$4 \times 11 =$ _____	37	$2 \times 4 =$ _____	57	$1 \times 4 =$ _____
18	$4 \times 3 =$ _____	38	$4 \times 4 =$ _____	58	$6 \times 4 =$ _____
19	$4 \times 1 =$ _____	39	$7 \times 4 =$ _____	59	$4 \times 4 =$ _____
20	$4 \times 6 =$ _____	40	$7 \times 4 =$ _____	60	$3 \times 4 =$ _____

Time taken

:

🕒 3 minute time limit 🕒

Score

60

What's your rock status?

WANNABE

< 18 correct in 3 mins

GARAGE ROCKER

18-19 correct in 3 mins

BUSKER

20-21 correct in 3 mins

GIGGER

22-24 correct in 3 mins

UNSIGNED ACT

25-29 correct in 3 mins

BREAKTHROUGH ARTIST

30-35 correct in 3 mins

SUPPORT ACT

36-44 correct in 3 mins

HEADLINER

45-59 correct in 3 mins

ROCK STAR

All correct in \leq 3mins

ROCK LEGEND

All correct in \leq 2min

ROCK HERO

All correct in \leq 1 min

**TIMES TABLES
ROCK STARS**

Name: _____

Week 25 Session 2

2020-21

3s 4s and 8s

3 a week

Times Tables Rock Stars

4

Times Tables

Licensed to Ashton Vale Primary School

1	$28 \div 4 =$ _____	21	$32 \div 4 =$ _____	41	$16 \div 4 =$ _____
2	$28 \div 4 =$ _____	22	$4 \div 4 =$ _____	42	$8 \div 4 =$ _____
3	$20 \div 4 =$ _____	23	$12 \div 4 =$ _____	43	$28 \div 4 =$ _____
4	$8 \div 4 =$ _____	24	$40 \div 4 =$ _____	44	$36 \div 4 =$ _____
5	$16 \div 4 =$ _____	25	$40 \div 4 =$ _____	45	$48 \div 4 =$ _____
6	$16 \div 4 =$ _____	26	$4 \div 4 =$ _____	46	$24 \div 4 =$ _____
7	$20 \div 4 =$ _____	27	$48 \div 4 =$ _____	47	$24 \div 4 =$ _____
8	$24 \div 4 =$ _____	28	$16 \div 4 =$ _____	48	$28 \div 4 =$ _____
9	$24 \div 4 =$ _____	29	$4 \div 4 =$ _____	49	$4 \div 4 =$ _____
10	$8 \div 4 =$ _____	30	$44 \div 4 =$ _____	50	$48 \div 4 =$ _____
11	$12 \div 4 =$ _____	31	$28 \div 4 =$ _____	51	$32 \div 4 =$ _____
12	$48 \div 4 =$ _____	32	$32 \div 4 =$ _____	52	$4 \div 4 =$ _____
13	$32 \div 4 =$ _____	33	$48 \div 4 =$ _____	53	$16 \div 4 =$ _____
14	$36 \div 4 =$ _____	34	$16 \div 4 =$ _____	54	$40 \div 4 =$ _____
15	$40 \div 4 =$ _____	35	$32 \div 4 =$ _____	55	$28 \div 4 =$ _____
16	$20 \div 4 =$ _____	36	$36 \div 4 =$ _____	56	$16 \div 4 =$ _____
17	$40 \div 4 =$ _____	37	$40 \div 4 =$ _____	57	$24 \div 4 =$ _____
18	$20 \div 4 =$ _____	38	$12 \div 4 =$ _____	58	$16 \div 4 =$ _____
19	$4 \div 4 =$ _____	39	$44 \div 4 =$ _____	59	$12 \div 4 =$ _____
20	$12 \div 4 =$ _____	40	$44 \div 4 =$ _____	60	$24 \div 4 =$ _____

Time taken

:

🕒 3 minute time limit 🕒

Score

60

What's your rock status?

WANNABE

< 18 correct in 3 mins

GARAGE ROCKER

18-19 correct in 3 mins

BUSKER

20-21 correct in 3 mins

GIGGER

22-24 correct in 3 mins

UNSIGNED ACT

25-29 correct in 3 mins

BREAKTHROUGH ARTIST

30-35 correct in 3 mins

SUPPORT ACT

36-44 correct in 3 mins

HEADLINER

45-59 correct in 3 mins

ROCK STAR

All correct in \leq 3mins

ROCK LEGEND

All correct in \leq 2min

ROCK HERO

All correct in \leq 1 min

**TIMES TABLES
ROCK STARS**

Name: _____

Week 25 Session 3

2020-21

3s 4s and 8s

3 a week

**Times Tables
Rock Stars**

4



Times Tables

Licensed to Ashton Vale Primary School

1	$4 \times 6 =$ _____	21	$4 \times 5 =$ _____	41	$48 \div 4 =$ _____
2	$4 \times 5 =$ _____	22	$4 \times 7 =$ _____	42	$40 \div 4 =$ _____
3	$4 \times 12 =$ _____	23	$4 \times 11 =$ _____	43	$48 \div 4 =$ _____
4	$4 \times 12 =$ _____	24	$4 \times 4 =$ _____	44	$36 \div 4 =$ _____
5	$4 \times 12 =$ _____	25	$4 \times 12 =$ _____	45	$8 \div 4 =$ _____
6	$4 \times 5 =$ _____	26	$4 \times 11 =$ _____	46	$12 \div 4 =$ _____
7	$4 \times 8 =$ _____	27	$4 \times 2 =$ _____	47	$40 \div 4 =$ _____
8	$4 \times 4 =$ _____	28	$4 \times 6 =$ _____	48	$48 \div 4 =$ _____
9	$4 \times 11 =$ _____	29	$4 \times 9 =$ _____	49	$32 \div 4 =$ _____
10	$4 \times 11 =$ _____	30	$4 \times 2 =$ _____	50	$40 \div 4 =$ _____
11	$4 \times 1 =$ _____	31	$4 \div 4 =$ _____	51	$40 \div 4 =$ _____
12	$4 \times 11 =$ _____	32	$12 \div 4 =$ _____	52	$44 \div 4 =$ _____
13	$4 \times 12 =$ _____	33	$20 \div 4 =$ _____	53	$24 \div 4 =$ _____
14	$4 \times 3 =$ _____	34	$20 \div 4 =$ _____	54	$12 \div 4 =$ _____
15	$4 \times 11 =$ _____	35	$48 \div 4 =$ _____	55	$48 \div 4 =$ _____
16	$4 \times 3 =$ _____	36	$28 \div 4 =$ _____	56	$28 \div 4 =$ _____
17	$4 \times 12 =$ _____	37	$12 \div 4 =$ _____	57	$28 \div 4 =$ _____
18	$4 \times 9 =$ _____	38	$36 \div 4 =$ _____	58	$20 \div 4 =$ _____
19	$4 \times 4 =$ _____	39	$4 \div 4 =$ _____	59	$4 \div 4 =$ _____
20	$4 \times 12 =$ _____	40	$40 \div 4 =$ _____	60	$32 \div 4 =$ _____

Time taken

:

 3 minute time limit 

Score

60

Add up your time

Mins

S1 _____

S2 _____

S3 _____

Total _____

Secs

S1 _____

S2 _____

S3 _____

Total _____

Add up your score

S1 _____

S2 _____

S3 _____

Total _____

Name: _____

Week 26 Session 1

2020-21

3s 4s and 8s

3 a week

Times Tables Rock Stars

4

Times Tables

Licensed to Ashton Vale Primary School

1	$4 \times 12 =$ _____	21	$4 \times 6 =$ _____	41	$2 \times 4 =$ _____
2	$4 \times 5 =$ _____	22	$4 \times 7 =$ _____	42	$9 \times 4 =$ _____
3	$4 \times 10 =$ _____	23	$4 \times 7 =$ _____	43	$10 \times 4 =$ _____
4	$4 \times 11 =$ _____	24	$4 \times 9 =$ _____	44	$9 \times 4 =$ _____
5	$4 \times 7 =$ _____	25	$4 \times 12 =$ _____	45	$8 \times 4 =$ _____
6	$4 \times 12 =$ _____	26	$4 \times 3 =$ _____	46	$1 \times 4 =$ _____
7	$4 \times 9 =$ _____	27	$4 \times 1 =$ _____	47	$10 \times 4 =$ _____
8	$4 \times 6 =$ _____	28	$4 \times 4 =$ _____	48	$9 \times 4 =$ _____
9	$4 \times 3 =$ _____	29	$4 \times 9 =$ _____	49	$2 \times 4 =$ _____
10	$4 \times 5 =$ _____	30	$4 \times 2 =$ _____	50	$1 \times 4 =$ _____
11	$4 \times 12 =$ _____	31	$8 \times 4 =$ _____	51	$6 \times 4 =$ _____
12	$4 \times 1 =$ _____	32	$1 \times 4 =$ _____	52	$1 \times 4 =$ _____
13	$4 \times 6 =$ _____	33	$9 \times 4 =$ _____	53	$3 \times 4 =$ _____
14	$4 \times 3 =$ _____	34	$2 \times 4 =$ _____	54	$5 \times 4 =$ _____
15	$4 \times 2 =$ _____	35	$8 \times 4 =$ _____	55	$1 \times 4 =$ _____
16	$4 \times 7 =$ _____	36	$12 \times 4 =$ _____	56	$4 \times 4 =$ _____
17	$4 \times 5 =$ _____	37	$2 \times 4 =$ _____	57	$1 \times 4 =$ _____
18	$4 \times 3 =$ _____	38	$5 \times 4 =$ _____	58	$9 \times 4 =$ _____
19	$4 \times 9 =$ _____	39	$11 \times 4 =$ _____	59	$3 \times 4 =$ _____
20	$4 \times 5 =$ _____	40	$8 \times 4 =$ _____	60	$5 \times 4 =$ _____

Time taken

:

🕒 3 minute time limit 🕒

Score

60

What's your rock status?

WANNABE

< 18 correct in 3 mins

GARAGE ROCKER

18-19 correct in 3 mins

BUSKER

20-21 correct in 3 mins

GIGGER

22-24 correct in 3 mins

UNSIGNED ACT

25-29 correct in 3 mins

BREAKTHROUGH ARTIST

30-35 correct in 3 mins

SUPPORT ACT

36-44 correct in 3 mins

HEADLINER

45-59 correct in 3 mins

ROCK STAR

All correct in \leq 3mins

ROCK LEGEND

All correct in \leq 2min

ROCK HERO

All correct in \leq 1 min

**TIMES TABLES
ROCK STARS**

Name: _____

Week 26 Session 2

2020-21

3s 4s and 8s

3 a week

Times Tables Rock Stars

4

Times Tables

Licensed to Ashton Vale Primary School

1	$20 \div 4 =$ _____	21	$4 \div 4 =$ _____	41	$28 \div 4 =$ _____
2	$12 \div 4 =$ _____	22	$16 \div 4 =$ _____	42	$24 \div 4 =$ _____
3	$28 \div 4 =$ _____	23	$20 \div 4 =$ _____	43	$8 \div 4 =$ _____
4	$48 \div 4 =$ _____	24	$36 \div 4 =$ _____	44	$20 \div 4 =$ _____
5	$16 \div 4 =$ _____	25	$4 \div 4 =$ _____	45	$28 \div 4 =$ _____
6	$8 \div 4 =$ _____	26	$32 \div 4 =$ _____	46	$44 \div 4 =$ _____
7	$16 \div 4 =$ _____	27	$36 \div 4 =$ _____	47	$4 \div 4 =$ _____
8	$40 \div 4 =$ _____	28	$4 \div 4 =$ _____	48	$12 \div 4 =$ _____
9	$28 \div 4 =$ _____	29	$48 \div 4 =$ _____	49	$12 \div 4 =$ _____
10	$36 \div 4 =$ _____	30	$4 \div 4 =$ _____	50	$8 \div 4 =$ _____
11	$32 \div 4 =$ _____	31	$12 \div 4 =$ _____	51	$44 \div 4 =$ _____
12	$28 \div 4 =$ _____	32	$44 \div 4 =$ _____	52	$48 \div 4 =$ _____
13	$4 \div 4 =$ _____	33	$40 \div 4 =$ _____	53	$48 \div 4 =$ _____
14	$24 \div 4 =$ _____	34	$24 \div 4 =$ _____	54	$32 \div 4 =$ _____
15	$4 \div 4 =$ _____	35	$44 \div 4 =$ _____	55	$16 \div 4 =$ _____
16	$44 \div 4 =$ _____	36	$24 \div 4 =$ _____	56	$28 \div 4 =$ _____
17	$32 \div 4 =$ _____	37	$8 \div 4 =$ _____	57	$20 \div 4 =$ _____
18	$16 \div 4 =$ _____	38	$40 \div 4 =$ _____	58	$44 \div 4 =$ _____
19	$40 \div 4 =$ _____	39	$48 \div 4 =$ _____	59	$44 \div 4 =$ _____
20	$4 \div 4 =$ _____	40	$4 \div 4 =$ _____	60	$28 \div 4 =$ _____

Time taken

:

🕒 3 minute time limit 🕒

Score

60

What's your rock status?

WANNABE

< 18 correct in 3 mins

GARAGE ROCKER

18-19 correct in 3 mins

BUSKER

20-21 correct in 3 mins

GIGGER

22-24 correct in 3 mins

UNSIGNED ACT

25-29 correct in 3 mins

BREAKTHROUGH ARTIST

30-35 correct in 3 mins

SUPPORT ACT

36-44 correct in 3 mins

HEADLINER

45-59 correct in 3 mins

ROCK STAR

All correct in \leq 3mins

ROCK LEGEND

All correct in \leq 2min

ROCK HERO

All correct in \leq 1 min

**TIMES TABLES
ROCK STARS**

Name: _____

Week 26 Session 3

2020-21

3s 4s and 8s

3 a week

Times Tables Rock Stars

4

Times Tables

Licensed to Ashton Vale Primary School

1	$4 \times 10 =$ _____	21	$4 \times 8 =$ _____	41	$40 \div 4 =$ _____
2	$4 \times 6 =$ _____	22	$4 \times 10 =$ _____	42	$24 \div 4 =$ _____
3	$4 \times 7 =$ _____	23	$4 \times 10 =$ _____	43	$12 \div 4 =$ _____
4	$4 \times 11 =$ _____	24	$4 \times 2 =$ _____	44	$16 \div 4 =$ _____
5	$4 \times 11 =$ _____	25	$4 \times 5 =$ _____	45	$12 \div 4 =$ _____
6	$4 \times 8 =$ _____	26	$4 \times 6 =$ _____	46	$44 \div 4 =$ _____
7	$4 \times 11 =$ _____	27	$4 \times 11 =$ _____	47	$48 \div 4 =$ _____
8	$4 \times 10 =$ _____	28	$4 \times 11 =$ _____	48	$36 \div 4 =$ _____
9	$4 \times 5 =$ _____	29	$4 \times 12 =$ _____	49	$8 \div 4 =$ _____
10	$4 \times 11 =$ _____	30	$4 \times 11 =$ _____	50	$20 \div 4 =$ _____
11	$4 \times 3 =$ _____	31	$20 \div 4 =$ _____	51	$32 \div 4 =$ _____
12	$4 \times 11 =$ _____	32	$44 \div 4 =$ _____	52	$12 \div 4 =$ _____
13	$4 \times 6 =$ _____	33	$36 \div 4 =$ _____	53	$12 \div 4 =$ _____
14	$4 \times 9 =$ _____	34	$12 \div 4 =$ _____	54	$20 \div 4 =$ _____
15	$4 \times 4 =$ _____	35	$32 \div 4 =$ _____	55	$12 \div 4 =$ _____
16	$4 \times 3 =$ _____	36	$12 \div 4 =$ _____	56	$8 \div 4 =$ _____
17	$4 \times 4 =$ _____	37	$4 \div 4 =$ _____	57	$12 \div 4 =$ _____
18	$4 \times 12 =$ _____	38	$16 \div 4 =$ _____	58	$24 \div 4 =$ _____
19	$4 \times 6 =$ _____	39	$8 \div 4 =$ _____	59	$12 \div 4 =$ _____
20	$4 \times 7 =$ _____	40	$8 \div 4 =$ _____	60	$44 \div 4 =$ _____

Time taken

:

🕒 3 minute time limit 🕒

Score

60

Add up your time

Mins	
S1	_____
S2	_____
S3	_____
Total	_____

Secs	
S1	_____
S2	_____
S3	_____
Total	_____

Add up your score	
S1	_____
S2	_____
S3	_____
Total	_____

Name: _____

Week 27 Session 1

2020-21

3s 4s and 8s

3 a week

Times Tables Rock Stars

8

Times Tables

Licensed to Ashton Vale Primary School

1	$8 \times 7 =$ _____	21	$8 \times 6 =$ _____	41	$9 \times 8 =$ _____
2	$8 \times 10 =$ _____	22	$8 \times 4 =$ _____	42	$1 \times 8 =$ _____
3	$8 \times 12 =$ _____	23	$8 \times 4 =$ _____	43	$5 \times 8 =$ _____
4	$8 \times 6 =$ _____	24	$8 \times 11 =$ _____	44	$2 \times 8 =$ _____
5	$8 \times 1 =$ _____	25	$8 \times 6 =$ _____	45	$11 \times 8 =$ _____
6	$8 \times 3 =$ _____	26	$8 \times 4 =$ _____	46	$9 \times 8 =$ _____
7	$8 \times 2 =$ _____	27	$8 \times 7 =$ _____	47	$10 \times 8 =$ _____
8	$8 \times 1 =$ _____	28	$8 \times 5 =$ _____	48	$10 \times 8 =$ _____
9	$8 \times 4 =$ _____	29	$8 \times 1 =$ _____	49	$2 \times 8 =$ _____
10	$8 \times 1 =$ _____	30	$8 \times 10 =$ _____	50	$12 \times 8 =$ _____
11	$8 \times 7 =$ _____	31	$8 \times 8 =$ _____	51	$7 \times 8 =$ _____
12	$8 \times 4 =$ _____	32	$11 \times 8 =$ _____	52	$6 \times 8 =$ _____
13	$8 \times 1 =$ _____	33	$1 \times 8 =$ _____	53	$5 \times 8 =$ _____
14	$8 \times 4 =$ _____	34	$3 \times 8 =$ _____	54	$1 \times 8 =$ _____
15	$8 \times 1 =$ _____	35	$2 \times 8 =$ _____	55	$6 \times 8 =$ _____
16	$8 \times 11 =$ _____	36	$6 \times 8 =$ _____	56	$2 \times 8 =$ _____
17	$8 \times 2 =$ _____	37	$9 \times 8 =$ _____	57	$3 \times 8 =$ _____
18	$8 \times 5 =$ _____	38	$3 \times 8 =$ _____	58	$11 \times 8 =$ _____
19	$8 \times 9 =$ _____	39	$8 \times 8 =$ _____	59	$1 \times 8 =$ _____
20	$8 \times 11 =$ _____	40	$3 \times 8 =$ _____	60	$9 \times 8 =$ _____

Time taken

:

🕒 3 minute time limit 🕒

Score

60

What's your rock status?

WANNABE

< 18 correct in 3 mins

GARAGE ROCKER

18-19 correct in 3 mins

BUSKER

20-21 correct in 3 mins

GIGGER

22-24 correct in 3 mins

UNSIGNED ACT

25-29 correct in 3 mins

BREAKTHROUGH ARTIST

30-35 correct in 3 mins

SUPPORT ACT

36-44 correct in 3 mins

HEADLINER

45-59 correct in 3 mins

ROCK STAR

All correct in \leq 3mins

ROCK LEGEND

All correct in \leq 2min

ROCK HERO

All correct in \leq 1 min

**TIMES TABLES
ROCK STARS**

Name: _____

Week 27 Session 2

2020-21

3s 4s and 8s

3 a week

Times Tables Rock Stars

8

Times Tables

Licensed to Ashton Vale Primary School

1	$80 \div 8 =$ _____	21	$24 \div 8 =$ _____	41	$64 \div 8 =$ _____
2	$80 \div 8 =$ _____	22	$16 \div 8 =$ _____	42	$80 \div 8 =$ _____
3	$32 \div 8 =$ _____	23	$40 \div 8 =$ _____	43	$32 \div 8 =$ _____
4	$48 \div 8 =$ _____	24	$8 \div 8 =$ _____	44	$24 \div 8 =$ _____
5	$8 \div 8 =$ _____	25	$8 \div 8 =$ _____	45	$48 \div 8 =$ _____
6	$80 \div 8 =$ _____	26	$48 \div 8 =$ _____	46	$48 \div 8 =$ _____
7	$96 \div 8 =$ _____	27	$56 \div 8 =$ _____	47	$48 \div 8 =$ _____
8	$56 \div 8 =$ _____	28	$16 \div 8 =$ _____	48	$48 \div 8 =$ _____
9	$96 \div 8 =$ _____	29	$40 \div 8 =$ _____	49	$16 \div 8 =$ _____
10	$8 \div 8 =$ _____	30	$48 \div 8 =$ _____	50	$72 \div 8 =$ _____
11	$88 \div 8 =$ _____	31	$48 \div 8 =$ _____	51	$64 \div 8 =$ _____
12	$80 \div 8 =$ _____	32	$96 \div 8 =$ _____	52	$88 \div 8 =$ _____
13	$32 \div 8 =$ _____	33	$80 \div 8 =$ _____	53	$72 \div 8 =$ _____
14	$64 \div 8 =$ _____	34	$56 \div 8 =$ _____	54	$80 \div 8 =$ _____
15	$40 \div 8 =$ _____	35	$96 \div 8 =$ _____	55	$80 \div 8 =$ _____
16	$72 \div 8 =$ _____	36	$88 \div 8 =$ _____	56	$48 \div 8 =$ _____
17	$24 \div 8 =$ _____	37	$16 \div 8 =$ _____	57	$72 \div 8 =$ _____
18	$80 \div 8 =$ _____	38	$16 \div 8 =$ _____	58	$80 \div 8 =$ _____
19	$48 \div 8 =$ _____	39	$88 \div 8 =$ _____	59	$88 \div 8 =$ _____
20	$32 \div 8 =$ _____	40	$56 \div 8 =$ _____	60	$24 \div 8 =$ _____

Time taken

:

🕒 3 minute time limit 🕒

Score

60

What's your rock status?

WANNABE

< 18 correct in 3 mins

GARAGE ROCKER

18-19 correct in 3 mins

BUSKER

20-21 correct in 3 mins

GIGGER

22-24 correct in 3 mins

UNSIGNED ACT

25-29 correct in 3 mins

BREAKTHROUGH ARTIST

30-35 correct in 3 mins

SUPPORT ACT

36-44 correct in 3 mins

HEADLINER

45-59 correct in 3 mins

ROCK STAR

All correct in \leq 3mins

ROCK LEGEND

All correct in \leq 2min

ROCK HERO

All correct in \leq 1 min

**TIMES TABLES
ROCK STARS**

Name: _____

Week 27 Session 3

2020-21

3s 4s and 8s

3 a week

Times Tables Rock Stars

8 Times Tables

Licensed to Ashton Vale Primary School

1	$8 \times 9 =$ _____	21	$8 \times 10 =$ _____	41	$16 \div 8 =$ _____
2	$8 \times 9 =$ _____	22	$8 \times 5 =$ _____	42	$48 \div 8 =$ _____
3	$8 \times 5 =$ _____	23	$8 \times 9 =$ _____	43	$8 \div 8 =$ _____
4	$8 \times 12 =$ _____	24	$8 \times 11 =$ _____	44	$48 \div 8 =$ _____
5	$8 \times 6 =$ _____	25	$8 \times 4 =$ _____	45	$96 \div 8 =$ _____
6	$8 \times 4 =$ _____	26	$8 \times 1 =$ _____	46	$24 \div 8 =$ _____
7	$8 \times 7 =$ _____	27	$8 \times 9 =$ _____	47	$32 \div 8 =$ _____
8	$8 \times 10 =$ _____	28	$8 \times 5 =$ _____	48	$16 \div 8 =$ _____
9	$8 \times 8 =$ _____	29	$8 \times 12 =$ _____	49	$80 \div 8 =$ _____
10	$8 \times 2 =$ _____	30	$8 \times 1 =$ _____	50	$32 \div 8 =$ _____
11	$8 \times 10 =$ _____	31	$40 \div 8 =$ _____	51	$72 \div 8 =$ _____
12	$8 \times 3 =$ _____	32	$16 \div 8 =$ _____	52	$56 \div 8 =$ _____
13	$8 \times 6 =$ _____	33	$8 \div 8 =$ _____	53	$24 \div 8 =$ _____
14	$8 \times 5 =$ _____	34	$88 \div 8 =$ _____	54	$56 \div 8 =$ _____
15	$8 \times 1 =$ _____	35	$32 \div 8 =$ _____	55	$56 \div 8 =$ _____
16	$8 \times 7 =$ _____	36	$8 \div 8 =$ _____	56	$48 \div 8 =$ _____
17	$8 \times 6 =$ _____	37	$96 \div 8 =$ _____	57	$16 \div 8 =$ _____
18	$8 \times 8 =$ _____	38	$40 \div 8 =$ _____	58	$24 \div 8 =$ _____
19	$8 \times 7 =$ _____	39	$40 \div 8 =$ _____	59	$8 \div 8 =$ _____
20	$8 \times 5 =$ _____	40	$24 \div 8 =$ _____	60	$16 \div 8 =$ _____

Time taken

:

 3 minute time limit 

Score

60

Add up your time

Mins

S1 _____

S2 _____

S3 _____

Total _____

Secs

S1 _____

S2 _____

S3 _____

Total _____

Add up your score

S1 _____

S2 _____

S3 _____

Total _____

Name: _____

Week 28 Session 1

2020-21

3s 4s and 8s

3 a week

Times Tables Rock Stars

3,8 Times Tables

Licensed to Ashton Vale Primary School

1	$8 \times 3 =$ _____	21	$8 \times 3 =$ _____	41	$5 \times 3 =$ _____
2	$3 \times 1 =$ _____	22	$8 \times 8 =$ _____	42	$10 \times 8 =$ _____
3	$3 \times 6 =$ _____	23	$3 \times 2 =$ _____	43	$6 \times 8 =$ _____
4	$8 \times 1 =$ _____	24	$8 \times 8 =$ _____	44	$9 \times 3 =$ _____
5	$8 \times 7 =$ _____	25	$3 \times 3 =$ _____	45	$11 \times 8 =$ _____
6	$8 \times 4 =$ _____	26	$8 \times 8 =$ _____	46	$4 \times 3 =$ _____
7	$3 \times 2 =$ _____	27	$3 \times 4 =$ _____	47	$4 \times 3 =$ _____
8	$8 \times 3 =$ _____	28	$8 \times 2 =$ _____	48	$3 \times 8 =$ _____
9	$8 \times 2 =$ _____	29	$3 \times 1 =$ _____	49	$1 \times 3 =$ _____
10	$3 \times 12 =$ _____	30	$8 \times 12 =$ _____	50	$10 \times 3 =$ _____
11	$3 \times 11 =$ _____	31	$5 \times 8 =$ _____	51	$12 \times 3 =$ _____
12	$3 \times 1 =$ _____	32	$9 \times 8 =$ _____	52	$4 \times 3 =$ _____
13	$8 \times 2 =$ _____	33	$1 \times 8 =$ _____	53	$4 \times 3 =$ _____
14	$3 \times 1 =$ _____	34	$12 \times 8 =$ _____	54	$4 \times 3 =$ _____
15	$8 \times 12 =$ _____	35	$12 \times 3 =$ _____	55	$9 \times 3 =$ _____
16	$3 \times 2 =$ _____	36	$6 \times 8 =$ _____	56	$2 \times 8 =$ _____
17	$3 \times 5 =$ _____	37	$2 \times 3 =$ _____	57	$9 \times 3 =$ _____
18	$8 \times 2 =$ _____	38	$9 \times 3 =$ _____	58	$10 \times 8 =$ _____
19	$8 \times 12 =$ _____	39	$5 \times 3 =$ _____	59	$1 \times 8 =$ _____
20	$3 \times 2 =$ _____	40	$9 \times 3 =$ _____	60	$8 \times 3 =$ _____

Time taken

:

🕒 3 minute time limit 🕒

Score

60

What's your rock status?

WANNABE

< 18 correct in 3 mins

GARAGE ROCKER

18-19 correct in 3 mins

BUSKER

20-21 correct in 3 mins

GIGGER

22-24 correct in 3 mins

UNSIGNED ACT

25-29 correct in 3 mins

BREAKTHROUGH ARTIST

30-35 correct in 3 mins

SUPPORT ACT

36-44 correct in 3 mins

HEADLINER

45-59 correct in 3 mins

ROCK STAR

All correct in \leq 3mins

ROCK LEGEND

All correct in \leq 2min

ROCK HERO

All correct in \leq 1 min

**TIMES TABLES
ROCK STARS**

Name: _____

Week 28 Session 2

2020-21

3s 4s and 8s

3 a week

Times Tables Rock Stars

3,8 Times Tables

Licensed to Ashton Vale Primary School

1	$88 \div 8 =$ _____	21	$96 \div 8 =$ _____	41	$56 \div 8 =$ _____
2	$24 \div 3 =$ _____	22	$3 \div 3 =$ _____	42	$21 \div 3 =$ _____
3	$24 \div 3 =$ _____	23	$33 \div 3 =$ _____	43	$30 \div 3 =$ _____
4	$48 \div 8 =$ _____	24	$18 \div 3 =$ _____	44	$48 \div 8 =$ _____
5	$72 \div 8 =$ _____	25	$32 \div 8 =$ _____	45	$9 \div 3 =$ _____
6	$72 \div 8 =$ _____	26	$24 \div 8 =$ _____	46	$36 \div 3 =$ _____
7	$12 \div 3 =$ _____	27	$24 \div 3 =$ _____	47	$9 \div 3 =$ _____
8	$3 \div 3 =$ _____	28	$6 \div 3 =$ _____	48	$36 \div 3 =$ _____
9	$64 \div 8 =$ _____	29	$6 \div 3 =$ _____	49	$6 \div 3 =$ _____
10	$64 \div 8 =$ _____	30	$32 \div 8 =$ _____	50	$6 \div 3 =$ _____
11	$72 \div 8 =$ _____	31	$3 \div 3 =$ _____	51	$80 \div 8 =$ _____
12	$32 \div 8 =$ _____	32	$96 \div 8 =$ _____	52	$21 \div 3 =$ _____
13	$48 \div 8 =$ _____	33	$32 \div 8 =$ _____	53	$88 \div 8 =$ _____
14	$6 \div 3 =$ _____	34	$18 \div 3 =$ _____	54	$80 \div 8 =$ _____
15	$15 \div 3 =$ _____	35	$72 \div 8 =$ _____	55	$12 \div 3 =$ _____
16	$9 \div 3 =$ _____	36	$32 \div 8 =$ _____	56	$30 \div 3 =$ _____
17	$6 \div 3 =$ _____	37	$96 \div 8 =$ _____	57	$72 \div 8 =$ _____
18	$80 \div 8 =$ _____	38	$40 \div 8 =$ _____	58	$6 \div 3 =$ _____
19	$16 \div 8 =$ _____	39	$32 \div 8 =$ _____	59	$72 \div 8 =$ _____
20	$64 \div 8 =$ _____	40	$32 \div 8 =$ _____	60	$16 \div 8 =$ _____

Time taken

:

🕒 3 minute time limit 🕒

Score

60

What's your rock status?

WANNABE

< 18 correct in 3 mins

GARAGE ROCKER

18-19 correct in 3 mins

BUSKER

20-21 correct in 3 mins

GIGGER

22-24 correct in 3 mins

UNSIGNED ACT

25-29 correct in 3 mins

BREAKTHROUGH ARTIST

30-35 correct in 3 mins

SUPPORT ACT

36-44 correct in 3 mins

HEADLINER

45-59 correct in 3 mins

ROCK STAR

All correct in \leq 3mins

ROCK LEGEND

All correct in \leq 2min

ROCK HERO

All correct in \leq 1 min

**TIMES TABLES
ROCK STARS**

Name: _____

Week 28 Session 3

2020-21

3s 4s and 8s

3 a week

Times Tables Rock Stars

3,8 Times Tables

Licensed to Ashton Vale Primary School

1	$3 \times 3 =$ _____	21	$3 \times 9 =$ _____	41	$3 \div 3 =$ _____
2	$8 \times 12 =$ _____	22	$8 \times 10 =$ _____	42	$96 \div 8 =$ _____
3	$3 \times 6 =$ _____	23	$3 \times 7 =$ _____	43	$32 \div 8 =$ _____
4	$8 \times 8 =$ _____	24	$8 \times 10 =$ _____	44	$56 \div 8 =$ _____
5	$8 \times 12 =$ _____	25	$3 \times 10 =$ _____	45	$8 \div 8 =$ _____
6	$8 \times 4 =$ _____	26	$8 \times 2 =$ _____	46	$64 \div 8 =$ _____
7	$3 \times 10 =$ _____	27	$8 \times 9 =$ _____	47	$24 \div 3 =$ _____
8	$3 \times 4 =$ _____	28	$8 \times 11 =$ _____	48	$96 \div 8 =$ _____
9	$3 \times 5 =$ _____	29	$3 \times 9 =$ _____	49	$88 \div 8 =$ _____
10	$3 \times 1 =$ _____	30	$3 \times 11 =$ _____	50	$88 \div 8 =$ _____
11	$8 \times 5 =$ _____	31	$15 \div 3 =$ _____	51	$27 \div 3 =$ _____
12	$3 \times 3 =$ _____	32	$18 \div 3 =$ _____	52	$6 \div 3 =$ _____
13	$3 \times 12 =$ _____	33	$27 \div 3 =$ _____	53	$6 \div 3 =$ _____
14	$8 \times 10 =$ _____	34	$40 \div 8 =$ _____	54	$33 \div 3 =$ _____
15	$8 \times 3 =$ _____	35	$16 \div 8 =$ _____	55	$48 \div 8 =$ _____
16	$8 \times 7 =$ _____	36	$80 \div 8 =$ _____	56	$18 \div 3 =$ _____
17	$8 \times 1 =$ _____	37	$9 \div 3 =$ _____	57	$88 \div 8 =$ _____
18	$3 \times 9 =$ _____	38	$88 \div 8 =$ _____	58	$16 \div 8 =$ _____
19	$3 \times 6 =$ _____	39	$72 \div 8 =$ _____	59	$72 \div 8 =$ _____
20	$8 \times 10 =$ _____	40	$9 \div 3 =$ _____	60	$32 \div 8 =$ _____

Time taken

:

🕒 3 minute time limit 🕒

Score

60

Add up your time

Mins

S1 _____

S2 _____

S3 _____

Total _____

Secs

S1 _____

S2 _____

S3 _____

Total _____

Add up your score

S1 _____

S2 _____

S3 _____

Total _____

Name: _____

Week 29 Session 1

2020-21

3s 4s and 8s

3 a week

Times Tables Rock Stars

4

Times Tables

Licensed to Ashton Vale Primary School

1	$4 \times 6 =$ _____	21	$4 \times 10 =$ _____	41	$1 \times 4 =$ _____
2	$4 \times 11 =$ _____	22	$4 \times 5 =$ _____	42	$4 \times 4 =$ _____
3	$4 \times 2 =$ _____	23	$4 \times 2 =$ _____	43	$4 \times 4 =$ _____
4	$4 \times 4 =$ _____	24	$4 \times 9 =$ _____	44	$12 \times 4 =$ _____
5	$4 \times 8 =$ _____	25	$4 \times 6 =$ _____	45	$1 \times 4 =$ _____
6	$4 \times 8 =$ _____	26	$4 \times 10 =$ _____	46	$10 \times 4 =$ _____
7	$4 \times 12 =$ _____	27	$4 \times 6 =$ _____	47	$12 \times 4 =$ _____
8	$4 \times 7 =$ _____	28	$4 \times 1 =$ _____	48	$10 \times 4 =$ _____
9	$4 \times 2 =$ _____	29	$4 \times 1 =$ _____	49	$2 \times 4 =$ _____
10	$4 \times 2 =$ _____	30	$4 \times 10 =$ _____	50	$2 \times 4 =$ _____
11	$4 \times 3 =$ _____	31	$6 \times 4 =$ _____	51	$3 \times 4 =$ _____
12	$4 \times 12 =$ _____	32	$5 \times 4 =$ _____	52	$6 \times 4 =$ _____
13	$4 \times 5 =$ _____	33	$11 \times 4 =$ _____	53	$1 \times 4 =$ _____
14	$4 \times 2 =$ _____	34	$12 \times 4 =$ _____	54	$4 \times 4 =$ _____
15	$4 \times 4 =$ _____	35	$10 \times 4 =$ _____	55	$6 \times 4 =$ _____
16	$4 \times 5 =$ _____	36	$10 \times 4 =$ _____	56	$2 \times 4 =$ _____
17	$4 \times 5 =$ _____	37	$11 \times 4 =$ _____	57	$9 \times 4 =$ _____
18	$4 \times 4 =$ _____	38	$11 \times 4 =$ _____	58	$11 \times 4 =$ _____
19	$4 \times 3 =$ _____	39	$5 \times 4 =$ _____	59	$6 \times 4 =$ _____
20	$4 \times 11 =$ _____	40	$5 \times 4 =$ _____	60	$4 \times 4 =$ _____

Time taken

:

🕒 3 minute time limit 🕒

Score

60

What's your rock status?

WANNABE

< 18 correct in 3 mins

GARAGE ROCKER

18-19 correct in 3 mins

BUSKER

20-21 correct in 3 mins

GIGGER

22-24 correct in 3 mins

UNSIGNED ACT

25-29 correct in 3 mins

BREAKTHROUGH ARTIST

30-35 correct in 3 mins

SUPPORT ACT

36-44 correct in 3 mins

HEADLINER

45-59 correct in 3 mins

ROCK STAR

All correct in \leq 3mins

ROCK LEGEND

All correct in \leq 2min

ROCK HERO

All correct in \leq 1 min

**TIMES TABLES
ROCK STARS**

Name: _____

Week 29 Session 2

2020-21

3s 4s and 8s

3 a week

Times Tables Rock Stars

4

Times Tables

Licensed to Ashton Vale Primary School

1	$12 \div 4 =$ _____	21	$4 \div 4 =$ _____	41	$24 \div 4 =$ _____
2	$40 \div 4 =$ _____	22	$48 \div 4 =$ _____	42	$8 \div 4 =$ _____
3	$4 \div 4 =$ _____	23	$12 \div 4 =$ _____	43	$4 \div 4 =$ _____
4	$40 \div 4 =$ _____	24	$40 \div 4 =$ _____	44	$4 \div 4 =$ _____
5	$36 \div 4 =$ _____	25	$4 \div 4 =$ _____	45	$8 \div 4 =$ _____
6	$40 \div 4 =$ _____	26	$24 \div 4 =$ _____	46	$8 \div 4 =$ _____
7	$12 \div 4 =$ _____	27	$16 \div 4 =$ _____	47	$48 \div 4 =$ _____
8	$8 \div 4 =$ _____	28	$36 \div 4 =$ _____	48	$8 \div 4 =$ _____
9	$32 \div 4 =$ _____	29	$24 \div 4 =$ _____	49	$24 \div 4 =$ _____
10	$44 \div 4 =$ _____	30	$44 \div 4 =$ _____	50	$48 \div 4 =$ _____
11	$24 \div 4 =$ _____	31	$44 \div 4 =$ _____	51	$40 \div 4 =$ _____
12	$32 \div 4 =$ _____	32	$24 \div 4 =$ _____	52	$4 \div 4 =$ _____
13	$48 \div 4 =$ _____	33	$28 \div 4 =$ _____	53	$44 \div 4 =$ _____
14	$40 \div 4 =$ _____	34	$32 \div 4 =$ _____	54	$44 \div 4 =$ _____
15	$40 \div 4 =$ _____	35	$4 \div 4 =$ _____	55	$12 \div 4 =$ _____
16	$20 \div 4 =$ _____	36	$12 \div 4 =$ _____	56	$32 \div 4 =$ _____
17	$4 \div 4 =$ _____	37	$8 \div 4 =$ _____	57	$12 \div 4 =$ _____
18	$48 \div 4 =$ _____	38	$44 \div 4 =$ _____	58	$48 \div 4 =$ _____
19	$12 \div 4 =$ _____	39	$28 \div 4 =$ _____	59	$48 \div 4 =$ _____
20	$24 \div 4 =$ _____	40	$32 \div 4 =$ _____	60	$16 \div 4 =$ _____

Time taken

:

🕒 3 minute time limit 🕒

Score

60

What's your rock status?

WANNABE

< 18 correct in 3 mins

GARAGE ROCKER

18-19 correct in 3 mins

BUSKER

20-21 correct in 3 mins

GIGGER

22-24 correct in 3 mins

UNSIGNED ACT

25-29 correct in 3 mins

BREAKTHROUGH ARTIST

30-35 correct in 3 mins

SUPPORT ACT

36-44 correct in 3 mins

HEADLINER

45-59 correct in 3 mins

ROCK STAR

All correct in \leq 3mins

ROCK LEGEND

All correct in \leq 2min

ROCK HERO

All correct in \leq 1 min

**TIMES TABLES
ROCK STARS**

Name: _____

Week 29 Session 3

2020-21

3s 4s and 8s

3 a week

Times Tables Rock Stars

4

Times Tables

Licensed to Ashton Vale Primary School

1	$4 \times 1 =$ _____	21	$4 \times 3 =$ _____	41	$20 \div 4 =$ _____
2	$4 \times 9 =$ _____	22	$4 \times 1 =$ _____	42	$44 \div 4 =$ _____
3	$4 \times 1 =$ _____	23	$4 \times 11 =$ _____	43	$8 \div 4 =$ _____
4	$4 \times 7 =$ _____	24	$4 \times 4 =$ _____	44	$12 \div 4 =$ _____
5	$4 \times 6 =$ _____	25	$4 \times 4 =$ _____	45	$24 \div 4 =$ _____
6	$4 \times 4 =$ _____	26	$4 \times 1 =$ _____	46	$4 \div 4 =$ _____
7	$4 \times 1 =$ _____	27	$4 \times 12 =$ _____	47	$48 \div 4 =$ _____
8	$4 \times 3 =$ _____	28	$4 \times 10 =$ _____	48	$40 \div 4 =$ _____
9	$4 \times 3 =$ _____	29	$4 \times 1 =$ _____	49	$24 \div 4 =$ _____
10	$4 \times 3 =$ _____	30	$4 \times 2 =$ _____	50	$36 \div 4 =$ _____
11	$4 \times 3 =$ _____	31	$20 \div 4 =$ _____	51	$20 \div 4 =$ _____
12	$4 \times 11 =$ _____	32	$28 \div 4 =$ _____	52	$28 \div 4 =$ _____
13	$4 \times 11 =$ _____	33	$4 \div 4 =$ _____	53	$8 \div 4 =$ _____
14	$4 \times 2 =$ _____	34	$8 \div 4 =$ _____	54	$44 \div 4 =$ _____
15	$4 \times 8 =$ _____	35	$32 \div 4 =$ _____	55	$28 \div 4 =$ _____
16	$4 \times 2 =$ _____	36	$20 \div 4 =$ _____	56	$20 \div 4 =$ _____
17	$4 \times 9 =$ _____	37	$12 \div 4 =$ _____	57	$40 \div 4 =$ _____
18	$4 \times 1 =$ _____	38	$40 \div 4 =$ _____	58	$24 \div 4 =$ _____
19	$4 \times 9 =$ _____	39	$12 \div 4 =$ _____	59	$24 \div 4 =$ _____
20	$4 \times 4 =$ _____	40	$16 \div 4 =$ _____	60	$48 \div 4 =$ _____

Time taken

:

🕒 3 minute time limit 🕒

Score

60

Add up your time

Mins

S1 _____

S2 _____

S3 _____

Total _____

Secs

S1 _____

S2 _____

S3 _____

Total _____

Add up your score

S1 _____

S2 _____

S3 _____

Total _____

Name: _____

Week 30 Session 1

2020-21

3s 4s and 8s

3 a week

8

Times Tables

Times Tables Rock Stars

Licensed to Ashton Vale Primary School

1	$8 \times 2 =$ _____	21	$8 \times 1 =$ _____	41	$4 \times 8 =$ _____
2	$8 \times 5 =$ _____	22	$8 \times 11 =$ _____	42	$4 \times 8 =$ _____
3	$8 \times 6 =$ _____	23	$8 \times 2 =$ _____	43	$6 \times 8 =$ _____
4	$8 \times 2 =$ _____	24	$8 \times 11 =$ _____	44	$12 \times 8 =$ _____
5	$8 \times 3 =$ _____	25	$8 \times 8 =$ _____	45	$3 \times 8 =$ _____
6	$8 \times 5 =$ _____	26	$8 \times 12 =$ _____	46	$10 \times 8 =$ _____
7	$8 \times 7 =$ _____	27	$8 \times 11 =$ _____	47	$12 \times 8 =$ _____
8	$8 \times 11 =$ _____	28	$8 \times 7 =$ _____	48	$1 \times 8 =$ _____
9	$8 \times 2 =$ _____	29	$8 \times 5 =$ _____	49	$1 \times 8 =$ _____
10	$8 \times 3 =$ _____	30	$8 \times 8 =$ _____	50	$10 \times 8 =$ _____
11	$8 \times 2 =$ _____	31	$3 \times 8 =$ _____	51	$9 \times 8 =$ _____
12	$8 \times 2 =$ _____	32	$10 \times 8 =$ _____	52	$12 \times 8 =$ _____
13	$8 \times 12 =$ _____	33	$5 \times 8 =$ _____	53	$4 \times 8 =$ _____
14	$8 \times 4 =$ _____	34	$6 \times 8 =$ _____	54	$10 \times 8 =$ _____
15	$8 \times 12 =$ _____	35	$7 \times 8 =$ _____	55	$4 \times 8 =$ _____
16	$8 \times 1 =$ _____	36	$9 \times 8 =$ _____	56	$9 \times 8 =$ _____
17	$8 \times 3 =$ _____	37	$5 \times 8 =$ _____	57	$6 \times 8 =$ _____
18	$8 \times 4 =$ _____	38	$12 \times 8 =$ _____	58	$11 \times 8 =$ _____
19	$8 \times 4 =$ _____	39	$9 \times 8 =$ _____	59	$9 \times 8 =$ _____
20	$8 \times 11 =$ _____	40	$2 \times 8 =$ _____	60	$11 \times 8 =$ _____

Time taken

:

🕒 3 minute time limit 🕒

Score

60

What's your rock status?

WANNABE

< 18 correct in 3 mins

GARAGE ROCKER

18-19 correct in 3 mins

BUSKER

20-21 correct in 3 mins

GIGGER

22-24 correct in 3 mins

UNSIGNED ACT

25-29 correct in 3 mins

BREAKTHROUGH ARTIST

30-35 correct in 3 mins

SUPPORT ACT

36-44 correct in 3 mins

HEADLINER

45-59 correct in 3 mins

ROCK STAR

All correct in \leq 3mins

ROCK LEGEND

All correct in \leq 2min

ROCK HERO

All correct in \leq 1 min

**TIMES TABLES
ROCK STARS**

Name: _____

Week 30 Session 2

2020-21

3s 4s and 8s

3 a week

Times Tables Rock Stars

8

Times Tables

Licensed to Ashton Vale Primary School

1	$96 \div 8 =$ _____	21	$40 \div 8 =$ _____	41	$88 \div 8 =$ _____
2	$80 \div 8 =$ _____	22	$80 \div 8 =$ _____	42	$56 \div 8 =$ _____
3	$32 \div 8 =$ _____	23	$72 \div 8 =$ _____	43	$72 \div 8 =$ _____
4	$8 \div 8 =$ _____	24	$16 \div 8 =$ _____	44	$16 \div 8 =$ _____
5	$8 \div 8 =$ _____	25	$40 \div 8 =$ _____	45	$16 \div 8 =$ _____
6	$80 \div 8 =$ _____	26	$96 \div 8 =$ _____	46	$32 \div 8 =$ _____
7	$88 \div 8 =$ _____	27	$24 \div 8 =$ _____	47	$80 \div 8 =$ _____
8	$8 \div 8 =$ _____	28	$32 \div 8 =$ _____	48	$48 \div 8 =$ _____
9	$56 \div 8 =$ _____	29	$96 \div 8 =$ _____	49	$96 \div 8 =$ _____
10	$24 \div 8 =$ _____	30	$40 \div 8 =$ _____	50	$88 \div 8 =$ _____
11	$56 \div 8 =$ _____	31	$96 \div 8 =$ _____	51	$32 \div 8 =$ _____
12	$16 \div 8 =$ _____	32	$32 \div 8 =$ _____	52	$80 \div 8 =$ _____
13	$72 \div 8 =$ _____	33	$40 \div 8 =$ _____	53	$72 \div 8 =$ _____
14	$88 \div 8 =$ _____	34	$40 \div 8 =$ _____	54	$56 \div 8 =$ _____
15	$72 \div 8 =$ _____	35	$72 \div 8 =$ _____	55	$80 \div 8 =$ _____
16	$88 \div 8 =$ _____	36	$64 \div 8 =$ _____	56	$8 \div 8 =$ _____
17	$8 \div 8 =$ _____	37	$40 \div 8 =$ _____	57	$64 \div 8 =$ _____
18	$64 \div 8 =$ _____	38	$48 \div 8 =$ _____	58	$64 \div 8 =$ _____
19	$32 \div 8 =$ _____	39	$48 \div 8 =$ _____	59	$8 \div 8 =$ _____
20	$8 \div 8 =$ _____	40	$8 \div 8 =$ _____	60	$72 \div 8 =$ _____

Time taken

:

🕒 3 minute time limit 🕒

Score

60

What's your rock status?

WANNABE

< 18 correct in 3 mins

GARAGE ROCKER

18-19 correct in 3 mins

BUSKER

20-21 correct in 3 mins

GIGGER

22-24 correct in 3 mins

UNSIGNED ACT

25-29 correct in 3 mins

BREAKTHROUGH ARTIST

30-35 correct in 3 mins

SUPPORT ACT

36-44 correct in 3 mins

HEADLINER

45-59 correct in 3 mins

ROCK STAR

All correct in \leq 3mins

ROCK LEGEND

All correct in \leq 2min

ROCK HERO

All correct in \leq 1 min

**TIMES TABLES
ROCK STARS**

Name: _____

Week 30 Session 3

2020-21

3s 4s and 8s

3 a week

Times Tables Rock Stars

8

Times Tables

Licensed to Ashton Vale Primary School

1	$8 \times 3 =$ _____	21	$8 \times 12 =$ _____	41	$48 \div 8 =$ _____
2	$8 \times 10 =$ _____	22	$8 \times 11 =$ _____	42	$8 \div 8 =$ _____
3	$8 \times 7 =$ _____	23	$8 \times 10 =$ _____	43	$48 \div 8 =$ _____
4	$8 \times 11 =$ _____	24	$8 \times 9 =$ _____	44	$48 \div 8 =$ _____
5	$8 \times 6 =$ _____	25	$8 \times 3 =$ _____	45	$56 \div 8 =$ _____
6	$8 \times 4 =$ _____	26	$8 \times 12 =$ _____	46	$40 \div 8 =$ _____
7	$8 \times 6 =$ _____	27	$8 \times 12 =$ _____	47	$72 \div 8 =$ _____
8	$8 \times 4 =$ _____	28	$8 \times 12 =$ _____	48	$40 \div 8 =$ _____
9	$8 \times 2 =$ _____	29	$8 \times 3 =$ _____	49	$80 \div 8 =$ _____
10	$8 \times 2 =$ _____	30	$8 \times 3 =$ _____	50	$56 \div 8 =$ _____
11	$8 \times 5 =$ _____	31	$96 \div 8 =$ _____	51	$8 \div 8 =$ _____
12	$8 \times 12 =$ _____	32	$32 \div 8 =$ _____	52	$24 \div 8 =$ _____
13	$8 \times 3 =$ _____	33	$72 \div 8 =$ _____	53	$32 \div 8 =$ _____
14	$8 \times 5 =$ _____	34	$72 \div 8 =$ _____	54	$48 \div 8 =$ _____
15	$8 \times 7 =$ _____	35	$32 \div 8 =$ _____	55	$24 \div 8 =$ _____
16	$8 \times 2 =$ _____	36	$64 \div 8 =$ _____	56	$96 \div 8 =$ _____
17	$8 \times 4 =$ _____	37	$24 \div 8 =$ _____	57	$72 \div 8 =$ _____
18	$8 \times 10 =$ _____	38	$64 \div 8 =$ _____	58	$24 \div 8 =$ _____
19	$8 \times 2 =$ _____	39	$96 \div 8 =$ _____	59	$96 \div 8 =$ _____
20	$8 \times 11 =$ _____	40	$72 \div 8 =$ _____	60	$72 \div 8 =$ _____

Time taken

:

🕒 3 minute time limit 🕒

Score

60

Add up your time

Mins	
S1	_____
S2	_____
S3	_____
Total	_____

Secs	
S1	_____
S2	_____
S3	_____
Total	_____

Add up your score	
S1	_____
S2	_____
S3	_____
Total	_____

Name: _____

Week 31 Session 1

2020-21

3s 4s and 8s

3 a week

Times Tables Rock Stars

3,4,8 Times Tables

Licensed to Ashton Vale Primary School

1	$4 \times 12 =$ _____	21	$3 \times 7 =$ _____	41	$2 \times 3 =$ _____
2	$4 \times 10 =$ _____	22	$4 \times 2 =$ _____	42	$3 \times 8 =$ _____
3	$4 \times 12 =$ _____	23	$8 \times 4 =$ _____	43	$2 \times 3 =$ _____
4	$8 \times 6 =$ _____	24	$8 \times 7 =$ _____	44	$12 \times 8 =$ _____
5	$4 \times 9 =$ _____	25	$8 \times 3 =$ _____	45	$7 \times 3 =$ _____
6	$4 \times 9 =$ _____	26	$4 \times 11 =$ _____	46	$7 \times 3 =$ _____
7	$8 \times 10 =$ _____	27	$3 \times 4 =$ _____	47	$6 \times 3 =$ _____
8	$8 \times 4 =$ _____	28	$3 \times 11 =$ _____	48	$10 \times 3 =$ _____
9	$4 \times 11 =$ _____	29	$8 \times 8 =$ _____	49	$9 \times 4 =$ _____
10	$3 \times 3 =$ _____	30	$3 \times 5 =$ _____	50	$3 \times 4 =$ _____
11	$8 \times 11 =$ _____	31	$11 \times 8 =$ _____	51	$6 \times 4 =$ _____
12	$3 \times 10 =$ _____	32	$1 \times 4 =$ _____	52	$3 \times 8 =$ _____
13	$8 \times 6 =$ _____	33	$3 \times 8 =$ _____	53	$2 \times 4 =$ _____
14	$4 \times 5 =$ _____	34	$12 \times 8 =$ _____	54	$3 \times 4 =$ _____
15	$4 \times 2 =$ _____	35	$7 \times 4 =$ _____	55	$5 \times 4 =$ _____
16	$3 \times 5 =$ _____	36	$9 \times 8 =$ _____	56	$9 \times 8 =$ _____
17	$3 \times 10 =$ _____	37	$10 \times 4 =$ _____	57	$4 \times 8 =$ _____
18	$3 \times 8 =$ _____	38	$11 \times 4 =$ _____	58	$8 \times 4 =$ _____
19	$3 \times 9 =$ _____	39	$5 \times 4 =$ _____	59	$9 \times 8 =$ _____
20	$4 \times 6 =$ _____	40	$12 \times 8 =$ _____	60	$11 \times 3 =$ _____

Time taken

:

🕒 3 minute time limit 🕒

Score

60

What's your rock status?

WANNABE

< 18 correct in 3 mins

GARAGE ROCKER

18-19 correct in 3 mins

BUSKER

20-21 correct in 3 mins

GIGGER

22-24 correct in 3 mins

UNSIGNED ACT

25-29 correct in 3 mins

BREAKTHROUGH ARTIST

30-35 correct in 3 mins

SUPPORT ACT

36-44 correct in 3 mins

HEADLINER

45-59 correct in 3 mins

ROCK STAR

All correct in \leq 3mins

ROCK LEGEND

All correct in \leq 2min

ROCK HERO

All correct in \leq 1 min

**TIMES TABLES
ROCK STARS**

Name: _____

Week 31 Session 2

2020-21

3s 4s and 8s

3 a week

Times Tables Rock Stars

3,4,8 Times Tables

Licensed to Ashton Vale Primary School

1	$48 \div 4 =$ _____	21	$15 \div 3 =$ _____	41	$32 \div 8 =$ _____
2	$21 \div 3 =$ _____	22	$24 \div 3 =$ _____	42	$8 \div 8 =$ _____
3	$8 \div 8 =$ _____	23	$18 \div 3 =$ _____	43	$27 \div 3 =$ _____
4	$16 \div 8 =$ _____	24	$48 \div 4 =$ _____	44	$20 \div 4 =$ _____
5	$15 \div 3 =$ _____	25	$24 \div 4 =$ _____	45	$27 \div 3 =$ _____
6	$8 \div 4 =$ _____	26	$16 \div 4 =$ _____	46	$88 \div 8 =$ _____
7	$24 \div 4 =$ _____	27	$21 \div 3 =$ _____	47	$24 \div 8 =$ _____
8	$64 \div 8 =$ _____	28	$32 \div 4 =$ _____	48	$8 \div 8 =$ _____
9	$12 \div 4 =$ _____	29	$20 \div 4 =$ _____	49	$27 \div 3 =$ _____
10	$3 \div 3 =$ _____	30	$15 \div 3 =$ _____	50	$18 \div 3 =$ _____
11	$20 \div 4 =$ _____	31	$18 \div 3 =$ _____	51	$32 \div 8 =$ _____
12	$21 \div 3 =$ _____	32	$36 \div 3 =$ _____	52	$8 \div 4 =$ _____
13	$48 \div 8 =$ _____	33	$15 \div 3 =$ _____	53	$18 \div 3 =$ _____
14	$64 \div 8 =$ _____	34	$56 \div 8 =$ _____	54	$12 \div 4 =$ _____
15	$3 \div 3 =$ _____	35	$20 \div 4 =$ _____	55	$6 \div 3 =$ _____
16	$9 \div 3 =$ _____	36	$24 \div 3 =$ _____	56	$40 \div 4 =$ _____
17	$48 \div 4 =$ _____	37	$12 \div 3 =$ _____	57	$44 \div 4 =$ _____
18	$3 \div 3 =$ _____	38	$80 \div 8 =$ _____	58	$12 \div 4 =$ _____
19	$80 \div 8 =$ _____	39	$30 \div 3 =$ _____	59	$96 \div 8 =$ _____
20	$32 \div 8 =$ _____	40	$56 \div 8 =$ _____	60	$72 \div 8 =$ _____

Time taken

:

🕒 3 minute time limit 🕒

Score

60

What's your rock status?

WANNABE

< 18 correct in 3 mins

GARAGE ROCKER

18-19 correct in 3 mins

BUSKER

20-21 correct in 3 mins

GIGGER

22-24 correct in 3 mins

UNSIGNED ACT

25-29 correct in 3 mins

BREAKTHROUGH ARTIST

30-35 correct in 3 mins

SUPPORT ACT

36-44 correct in 3 mins

HEADLINER

45-59 correct in 3 mins

ROCK STAR

All correct in \leq 3mins

ROCK LEGEND

All correct in \leq 2min

ROCK HERO

All correct in \leq 1 min

**TIMES TABLES
ROCK STARS**

Name: _____

Week 31 Session 3

2020-21

3s 4s and 8s

3 a week

Times Tables Rock Stars

3,4,8 Times Tables

Licensed to Ashton Vale Primary School

1	$3 \times 8 =$ _____	21	$8 \times 9 =$ _____	41	$15 \div 3 =$ _____
2	$4 \times 2 =$ _____	22	$8 \times 5 =$ _____	42	$16 \div 8 =$ _____
3	$3 \times 10 =$ _____	23	$4 \times 5 =$ _____	43	$44 \div 4 =$ _____
4	$8 \times 8 =$ _____	24	$8 \times 3 =$ _____	44	$12 \div 4 =$ _____
5	$4 \times 4 =$ _____	25	$8 \times 3 =$ _____	45	$64 \div 8 =$ _____
6	$8 \times 2 =$ _____	26	$4 \times 6 =$ _____	46	$8 \div 4 =$ _____
7	$4 \times 9 =$ _____	27	$8 \times 12 =$ _____	47	$15 \div 3 =$ _____
8	$8 \times 4 =$ _____	28	$4 \times 3 =$ _____	48	$64 \div 8 =$ _____
9	$4 \times 9 =$ _____	29	$3 \times 10 =$ _____	49	$8 \div 8 =$ _____
10	$3 \times 10 =$ _____	30	$4 \times 7 =$ _____	50	$9 \div 3 =$ _____
11	$4 \times 11 =$ _____	31	$15 \div 3 =$ _____	51	$12 \div 3 =$ _____
12	$3 \times 5 =$ _____	32	$12 \div 3 =$ _____	52	$16 \div 4 =$ _____
13	$4 \times 7 =$ _____	33	$48 \div 4 =$ _____	53	$6 \div 3 =$ _____
14	$4 \times 2 =$ _____	34	$88 \div 8 =$ _____	54	$80 \div 8 =$ _____
15	$4 \times 8 =$ _____	35	$72 \div 8 =$ _____	55	$88 \div 8 =$ _____
16	$4 \times 10 =$ _____	36	$56 \div 8 =$ _____	56	$36 \div 4 =$ _____
17	$8 \times 7 =$ _____	37	$24 \div 4 =$ _____	57	$8 \div 4 =$ _____
18	$3 \times 12 =$ _____	38	$88 \div 8 =$ _____	58	$33 \div 3 =$ _____
19	$4 \times 7 =$ _____	39	$44 \div 4 =$ _____	59	$64 \div 8 =$ _____
20	$8 \times 5 =$ _____	40	$21 \div 3 =$ _____	60	$32 \div 8 =$ _____

Time taken

:

🕒 3 minute time limit 🕒

Score

60

Add up your time

Mins

S1 _____

S2 _____

S3 _____

Total _____

Secs

S1 _____

S2 _____

S3 _____

Total _____

Add up your score

S1 _____

S2 _____

S3 _____

Total _____

Name: _____

Week 32 Session 1

2020-21

3s 4s and 8s

3 a week

Times Tables Rock Stars

3,4,8 Times Tables

Licensed to Ashton Vale Primary School

1	$8 \times 7 =$ _____	21	$8 \times 10 =$ _____	41	$6 \times 3 =$ _____
2	$4 \times 5 =$ _____	22	$4 \times 6 =$ _____	42	$5 \times 8 =$ _____
3	$8 \times 10 =$ _____	23	$8 \times 10 =$ _____	43	$11 \times 4 =$ _____
4	$4 \times 2 =$ _____	24	$4 \times 12 =$ _____	44	$1 \times 3 =$ _____
5	$3 \times 3 =$ _____	25	$8 \times 4 =$ _____	45	$3 \times 4 =$ _____
6	$8 \times 9 =$ _____	26	$8 \times 6 =$ _____	46	$1 \times 8 =$ _____
7	$3 \times 6 =$ _____	27	$4 \times 11 =$ _____	47	$10 \times 8 =$ _____
8	$8 \times 9 =$ _____	28	$8 \times 7 =$ _____	48	$8 \times 3 =$ _____
9	$8 \times 12 =$ _____	29	$4 \times 7 =$ _____	49	$3 \times 4 =$ _____
10	$8 \times 9 =$ _____	30	$8 \times 4 =$ _____	50	$11 \times 4 =$ _____
11	$3 \times 10 =$ _____	31	$11 \times 3 =$ _____	51	$6 \times 4 =$ _____
12	$8 \times 2 =$ _____	32	$2 \times 4 =$ _____	52	$9 \times 3 =$ _____
13	$3 \times 4 =$ _____	33	$5 \times 4 =$ _____	53	$7 \times 8 =$ _____
14	$8 \times 10 =$ _____	34	$8 \times 3 =$ _____	54	$2 \times 3 =$ _____
15	$8 \times 1 =$ _____	35	$4 \times 8 =$ _____	55	$8 \times 4 =$ _____
16	$4 \times 2 =$ _____	36	$10 \times 3 =$ _____	56	$9 \times 8 =$ _____
17	$8 \times 9 =$ _____	37	$6 \times 3 =$ _____	57	$2 \times 3 =$ _____
18	$4 \times 10 =$ _____	38	$8 \times 8 =$ _____	58	$5 \times 4 =$ _____
19	$3 \times 1 =$ _____	39	$7 \times 8 =$ _____	59	$1 \times 3 =$ _____
20	$4 \times 9 =$ _____	40	$6 \times 4 =$ _____	60	$4 \times 4 =$ _____

Time taken

:

🕒 3 minute time limit 🕒

Score

60

What's your rock status?

WANNABE

< 18 correct in 3 mins

GARAGE ROCKER

18-19 correct in 3 mins

BUSKER

20-21 correct in 3 mins

GIGGER

22-24 correct in 3 mins

UNSIGNED ACT

25-29 correct in 3 mins

BREAKTHROUGH ARTIST

30-35 correct in 3 mins

SUPPORT ACT

36-44 correct in 3 mins

HEADLINER

45-59 correct in 3 mins

ROCK STAR

All correct in \leq 3mins

ROCK LEGEND

All correct in \leq 2min

ROCK HERO

All correct in \leq 1 min

**TIMES TABLES
ROCK STARS**

Name: _____

Week 32 Session 2

2020-21

3s 4s and 8s

3 a week

Times Tables Rock Stars

3,4,8 Times Tables

Licensed to Ashton Vale Primary School

1	$28 \div 4 =$ _____	21	$36 \div 4 =$ _____	41	$72 \div 8 =$ _____
2	$4 \div 4 =$ _____	22	$24 \div 8 =$ _____	42	$3 \div 3 =$ _____
3	$36 \div 4 =$ _____	23	$27 \div 3 =$ _____	43	$32 \div 4 =$ _____
4	$96 \div 8 =$ _____	24	$4 \div 4 =$ _____	44	$24 \div 4 =$ _____
5	$18 \div 3 =$ _____	25	$27 \div 3 =$ _____	45	$80 \div 8 =$ _____
6	$18 \div 3 =$ _____	26	$8 \div 8 =$ _____	46	$44 \div 4 =$ _____
7	$44 \div 4 =$ _____	27	$6 \div 3 =$ _____	47	$72 \div 8 =$ _____
8	$40 \div 8 =$ _____	28	$30 \div 3 =$ _____	48	$30 \div 3 =$ _____
9	$4 \div 4 =$ _____	29	$8 \div 4 =$ _____	49	$18 \div 3 =$ _____
10	$24 \div 4 =$ _____	30	$40 \div 4 =$ _____	50	$16 \div 4 =$ _____
11	$48 \div 4 =$ _____	31	$36 \div 3 =$ _____	51	$15 \div 3 =$ _____
12	$24 \div 8 =$ _____	32	$27 \div 3 =$ _____	52	$20 \div 4 =$ _____
13	$15 \div 3 =$ _____	33	$44 \div 4 =$ _____	53	$21 \div 3 =$ _____
14	$48 \div 4 =$ _____	34	$16 \div 4 =$ _____	54	$27 \div 3 =$ _____
15	$40 \div 8 =$ _____	35	$32 \div 4 =$ _____	55	$18 \div 3 =$ _____
16	$32 \div 4 =$ _____	36	$48 \div 4 =$ _____	56	$32 \div 8 =$ _____
17	$21 \div 3 =$ _____	37	$24 \div 8 =$ _____	57	$88 \div 8 =$ _____
18	$28 \div 4 =$ _____	38	$16 \div 8 =$ _____	58	$36 \div 4 =$ _____
19	$6 \div 3 =$ _____	39	$12 \div 3 =$ _____	59	$15 \div 3 =$ _____
20	$3 \div 3 =$ _____	40	$56 \div 8 =$ _____	60	$6 \div 3 =$ _____

Time taken

:

🕒 3 minute time limit 🕒

Score

60

What's your rock status?

WANNABE

< 18 correct in 3 mins

GARAGE ROCKER

18-19 correct in 3 mins

BUSKER

20-21 correct in 3 mins

GIGGER

22-24 correct in 3 mins

UNSIGNED ACT

25-29 correct in 3 mins

BREAKTHROUGH ARTIST

30-35 correct in 3 mins

SUPPORT ACT

36-44 correct in 3 mins

HEADLINER

45-59 correct in 3 mins

ROCK STAR

All correct in \leq 3mins

ROCK LEGEND

All correct in \leq 2min

ROCK HERO

All correct in \leq 1 min

**TIMES TABLES
ROCK STARS**

Name: _____

Week 32 Session 3

2020-21

3s 4s and 8s

3 a week

Times Tables Rock Stars



3,4,8 Times Tables

Licensed to Ashton Vale Primary School

1	$4 \times 9 =$ _____	21	$8 \times 10 =$ _____	41	$21 \div 3 =$ _____
2	$4 \times 11 =$ _____	22	$3 \times 12 =$ _____	42	$36 \div 4 =$ _____
3	$3 \times 1 =$ _____	23	$8 \times 12 =$ _____	43	$80 \div 8 =$ _____
4	$8 \times 7 =$ _____	24	$3 \times 4 =$ _____	44	$48 \div 4 =$ _____
5	$4 \times 9 =$ _____	25	$4 \times 4 =$ _____	45	$27 \div 3 =$ _____
6	$3 \times 8 =$ _____	26	$4 \times 11 =$ _____	46	$24 \div 4 =$ _____
7	$8 \times 12 =$ _____	27	$4 \times 7 =$ _____	47	$32 \div 4 =$ _____
8	$8 \times 7 =$ _____	28	$3 \times 9 =$ _____	48	$12 \div 4 =$ _____
9	$8 \times 12 =$ _____	29	$8 \times 1 =$ _____	49	$4 \div 4 =$ _____
10	$8 \times 12 =$ _____	30	$3 \times 12 =$ _____	50	$36 \div 3 =$ _____
11	$3 \times 2 =$ _____	31	$48 \div 4 =$ _____	51	$8 \div 4 =$ _____
12	$4 \times 10 =$ _____	32	$24 \div 3 =$ _____	52	$36 \div 3 =$ _____
13	$4 \times 11 =$ _____	33	$4 \div 4 =$ _____	53	$24 \div 4 =$ _____
14	$3 \times 1 =$ _____	34	$32 \div 4 =$ _____	54	$33 \div 3 =$ _____
15	$3 \times 11 =$ _____	35	$4 \div 4 =$ _____	55	$24 \div 4 =$ _____
16	$8 \times 8 =$ _____	36	$80 \div 8 =$ _____	56	$20 \div 4 =$ _____
17	$4 \times 10 =$ _____	37	$18 \div 3 =$ _____	57	$24 \div 8 =$ _____
18	$3 \times 2 =$ _____	38	$72 \div 8 =$ _____	58	$56 \div 8 =$ _____
19	$4 \times 10 =$ _____	39	$36 \div 3 =$ _____	59	$20 \div 4 =$ _____
20	$3 \times 2 =$ _____	40	$32 \div 4 =$ _____	60	$4 \div 4 =$ _____

Time taken

:

 3 minute time limit 

Score

60

Add up your time

Mins

S1 _____

S2 _____

S3 _____

Total _____

Secs

S1 _____

S2 _____

S3 _____

Total _____

Add up your score

S1 _____

S2 _____

S3 _____

Total _____

Name: _____

Week 33 Session 1

2020-21

3s 4s and 8s

3 a week

Times Tables Rock Stars

3,4,8 Times Tables

Licensed to Ashton Vale Primary School

1	$4 \times 2 =$ _____	21	$8 \times 12 =$ _____	41	$7 \times 4 =$ _____
2	$4 \times 9 =$ _____	22	$8 \times 10 =$ _____	42	$9 \times 8 =$ _____
3	$4 \times 4 =$ _____	23	$8 \times 2 =$ _____	43	$6 \times 3 =$ _____
4	$4 \times 9 =$ _____	24	$3 \times 6 =$ _____	44	$9 \times 3 =$ _____
5	$4 \times 6 =$ _____	25	$8 \times 2 =$ _____	45	$7 \times 8 =$ _____
6	$8 \times 8 =$ _____	26	$8 \times 10 =$ _____	46	$9 \times 4 =$ _____
7	$4 \times 11 =$ _____	27	$3 \times 11 =$ _____	47	$3 \times 8 =$ _____
8	$3 \times 10 =$ _____	28	$8 \times 6 =$ _____	48	$10 \times 3 =$ _____
9	$4 \times 6 =$ _____	29	$4 \times 6 =$ _____	49	$4 \times 8 =$ _____
10	$3 \times 12 =$ _____	30	$8 \times 1 =$ _____	50	$5 \times 4 =$ _____
11	$3 \times 7 =$ _____	31	$1 \times 8 =$ _____	51	$4 \times 4 =$ _____
12	$3 \times 4 =$ _____	32	$10 \times 3 =$ _____	52	$5 \times 3 =$ _____
13	$8 \times 1 =$ _____	33	$9 \times 3 =$ _____	53	$6 \times 4 =$ _____
14	$3 \times 9 =$ _____	34	$3 \times 3 =$ _____	54	$2 \times 3 =$ _____
15	$4 \times 9 =$ _____	35	$2 \times 8 =$ _____	55	$5 \times 4 =$ _____
16	$4 \times 5 =$ _____	36	$10 \times 8 =$ _____	56	$3 \times 8 =$ _____
17	$4 \times 8 =$ _____	37	$3 \times 8 =$ _____	57	$7 \times 4 =$ _____
18	$8 \times 3 =$ _____	38	$3 \times 4 =$ _____	58	$10 \times 4 =$ _____
19	$3 \times 2 =$ _____	39	$4 \times 4 =$ _____	59	$3 \times 4 =$ _____
20	$4 \times 7 =$ _____	40	$12 \times 4 =$ _____	60	$1 \times 3 =$ _____

Time taken

:

🕒 3 minute time limit 🕒

Score

60

What's your rock status?

WANNABE

< 18 correct in 3 mins

GARAGE ROCKER

18-19 correct in 3 mins

BUSKER

20-21 correct in 3 mins

GIGGER

22-24 correct in 3 mins

UNSIGNED ACT

25-29 correct in 3 mins

BREAKTHROUGH ARTIST

30-35 correct in 3 mins

SUPPORT ACT

36-44 correct in 3 mins

HEADLINER

45-59 correct in 3 mins

ROCK STAR

All correct in \leq 3mins

ROCK LEGEND

All correct in \leq 2min

ROCK HERO

All correct in \leq 1 min

**TIMES TABLES
ROCK STARS**

Name: _____

Week 33 Session 2

2020-21

3s 4s and 8s

3 a week

Times Tables Rock Stars

3,4,8 Times Tables

Licensed to Ashton Vale Primary School

1	$15 \div 3 =$ _____	21	$16 \div 8 =$ _____	41	$16 \div 8 =$ _____
2	$64 \div 8 =$ _____	22	$21 \div 3 =$ _____	42	$24 \div 4 =$ _____
3	$80 \div 8 =$ _____	23	$28 \div 4 =$ _____	43	$48 \div 8 =$ _____
4	$44 \div 4 =$ _____	24	$88 \div 8 =$ _____	44	$4 \div 4 =$ _____
5	$32 \div 8 =$ _____	25	$48 \div 8 =$ _____	45	$32 \div 8 =$ _____
6	$20 \div 4 =$ _____	26	$96 \div 8 =$ _____	46	$24 \div 3 =$ _____
7	$44 \div 4 =$ _____	27	$48 \div 8 =$ _____	47	$48 \div 8 =$ _____
8	$48 \div 4 =$ _____	28	$32 \div 4 =$ _____	48	$24 \div 3 =$ _____
9	$40 \div 8 =$ _____	29	$8 \div 4 =$ _____	49	$21 \div 3 =$ _____
10	$8 \div 8 =$ _____	30	$16 \div 8 =$ _____	50	$40 \div 4 =$ _____
11	$44 \div 4 =$ _____	31	$9 \div 3 =$ _____	51	$32 \div 8 =$ _____
12	$56 \div 8 =$ _____	32	$33 \div 3 =$ _____	52	$48 \div 4 =$ _____
13	$28 \div 4 =$ _____	33	$9 \div 3 =$ _____	53	$32 \div 8 =$ _____
14	$21 \div 3 =$ _____	34	$24 \div 8 =$ _____	54	$30 \div 3 =$ _____
15	$3 \div 3 =$ _____	35	$24 \div 3 =$ _____	55	$15 \div 3 =$ _____
16	$36 \div 4 =$ _____	36	$4 \div 4 =$ _____	56	$12 \div 3 =$ _____
17	$33 \div 3 =$ _____	37	$32 \div 4 =$ _____	57	$16 \div 4 =$ _____
18	$48 \div 8 =$ _____	38	$72 \div 8 =$ _____	58	$8 \div 8 =$ _____
19	$36 \div 4 =$ _____	39	$56 \div 8 =$ _____	59	$32 \div 4 =$ _____
20	$24 \div 8 =$ _____	40	$27 \div 3 =$ _____	60	$8 \div 4 =$ _____

Time taken

:

🕒 3 minute time limit 🕒

Score

60

What's your rock status?

WANNABE

< 18 correct in 3 mins

GARAGE ROCKER

18-19 correct in 3 mins

BUSKER

20-21 correct in 3 mins

GIGGER

22-24 correct in 3 mins

UNSIGNED ACT

25-29 correct in 3 mins

BREAKTHROUGH ARTIST

30-35 correct in 3 mins

SUPPORT ACT

36-44 correct in 3 mins

HEADLINER

45-59 correct in 3 mins

ROCK STAR

All correct in \leq 3mins

ROCK LEGEND

All correct in \leq 2min

ROCK HERO

All correct in \leq 1 min

**TIMES TABLES
ROCK STARS**

Name: _____

Week 33 Session 3

2020-21

3s 4s and 8s

3 a week

Times Tables Rock Stars



3,4,8 Times Tables

Licensed to Ashton Vale Primary School

1	$3 \times 1 =$ _____	21	$3 \times 10 =$ _____	41	$3 \div 3 =$ _____
2	$3 \times 5 =$ _____	22	$8 \times 4 =$ _____	42	$3 \div 3 =$ _____
3	$4 \times 2 =$ _____	23	$4 \times 6 =$ _____	43	$40 \div 4 =$ _____
4	$3 \times 2 =$ _____	24	$3 \times 6 =$ _____	44	$40 \div 8 =$ _____
5	$8 \times 12 =$ _____	25	$3 \times 9 =$ _____	45	$24 \div 4 =$ _____
6	$3 \times 6 =$ _____	26	$3 \times 2 =$ _____	46	$8 \div 4 =$ _____
7	$3 \times 10 =$ _____	27	$4 \times 4 =$ _____	47	$16 \div 8 =$ _____
8	$3 \times 3 =$ _____	28	$8 \times 12 =$ _____	48	$32 \div 4 =$ _____
9	$3 \times 1 =$ _____	29	$3 \times 5 =$ _____	49	$80 \div 8 =$ _____
10	$4 \times 7 =$ _____	30	$4 \times 5 =$ _____	50	$36 \div 3 =$ _____
11	$4 \times 1 =$ _____	31	$30 \div 3 =$ _____	51	$40 \div 4 =$ _____
12	$8 \times 11 =$ _____	32	$88 \div 8 =$ _____	52	$80 \div 8 =$ _____
13	$3 \times 7 =$ _____	33	$88 \div 8 =$ _____	53	$48 \div 4 =$ _____
14	$8 \times 11 =$ _____	34	$80 \div 8 =$ _____	54	$27 \div 3 =$ _____
15	$8 \times 4 =$ _____	35	$21 \div 3 =$ _____	55	$40 \div 8 =$ _____
16	$3 \times 12 =$ _____	36	$15 \div 3 =$ _____	56	$24 \div 3 =$ _____
17	$8 \times 5 =$ _____	37	$16 \div 4 =$ _____	57	$8 \div 8 =$ _____
18	$4 \times 5 =$ _____	38	$48 \div 4 =$ _____	58	$64 \div 8 =$ _____
19	$3 \times 10 =$ _____	39	$21 \div 3 =$ _____	59	$8 \div 4 =$ _____
20	$8 \times 9 =$ _____	40	$96 \div 8 =$ _____	60	$24 \div 8 =$ _____

Time taken

:

 3 minute time limit 

Score

60

Add up your time

Mins

S1 _____

S2 _____

S3 _____

Total _____

Secs

S1 _____

S2 _____

S3 _____

Total _____

Add up your score

S1 _____

S2 _____

S3 _____

Total _____

Name: _____

Week 34 Session 1

2020-21

3s 4s and 8s

3 a week

Times Tables Rock Stars

3 Times Tables

Licensed to Ashton Vale Primary School

1	$3 \times 3 =$ _____	21	$3 \times 1 =$ _____	41	$12 \times 3 =$ _____
2	$3 \times 1 =$ _____	22	$3 \times 8 =$ _____	42	$11 \times 3 =$ _____
3	$3 \times 4 =$ _____	23	$3 \times 10 =$ _____	43	$3 \times 3 =$ _____
4	$3 \times 8 =$ _____	24	$3 \times 5 =$ _____	44	$2 \times 3 =$ _____
5	$3 \times 4 =$ _____	25	$3 \times 8 =$ _____	45	$9 \times 3 =$ _____
6	$3 \times 10 =$ _____	26	$3 \times 6 =$ _____	46	$10 \times 3 =$ _____
7	$3 \times 9 =$ _____	27	$3 \times 5 =$ _____	47	$11 \times 3 =$ _____
8	$3 \times 3 =$ _____	28	$3 \times 3 =$ _____	48	$4 \times 3 =$ _____
9	$3 \times 4 =$ _____	29	$3 \times 5 =$ _____	49	$11 \times 3 =$ _____
10	$3 \times 10 =$ _____	30	$3 \times 11 =$ _____	50	$7 \times 3 =$ _____
11	$3 \times 2 =$ _____	31	$10 \times 3 =$ _____	51	$11 \times 3 =$ _____
12	$3 \times 5 =$ _____	32	$5 \times 3 =$ _____	52	$9 \times 3 =$ _____
13	$3 \times 11 =$ _____	33	$10 \times 3 =$ _____	53	$11 \times 3 =$ _____
14	$3 \times 7 =$ _____	34	$10 \times 3 =$ _____	54	$7 \times 3 =$ _____
15	$3 \times 4 =$ _____	35	$3 \times 3 =$ _____	55	$9 \times 3 =$ _____
16	$3 \times 4 =$ _____	36	$7 \times 3 =$ _____	56	$10 \times 3 =$ _____
17	$3 \times 5 =$ _____	37	$6 \times 3 =$ _____	57	$4 \times 3 =$ _____
18	$3 \times 5 =$ _____	38	$4 \times 3 =$ _____	58	$9 \times 3 =$ _____
19	$3 \times 4 =$ _____	39	$1 \times 3 =$ _____	59	$9 \times 3 =$ _____
20	$3 \times 10 =$ _____	40	$5 \times 3 =$ _____	60	$3 \times 3 =$ _____

Time taken

:

🕒 3 minute time limit 🕒

Score

60

What's your rock status?

WANNABE

< 18 correct in 3 mins

GARAGE ROCKER

18-19 correct in 3 mins

BUSKER

20-21 correct in 3 mins

GIGGER

22-24 correct in 3 mins

UNSIGNED ACT

25-29 correct in 3 mins

BREAKTHROUGH ARTIST

30-35 correct in 3 mins

SUPPORT ACT

36-44 correct in 3 mins

HEADLINER

45-59 correct in 3 mins

ROCK STAR

All correct in \leq 3mins

ROCK LEGEND

All correct in \leq 2min

ROCK HERO

All correct in \leq 1 min

**TIMES TABLES
ROCK STARS**

Name: _____

Week 34 Session 2

2020-21

3s 4s and 8s

3 a week

Times Tables Rock Stars

3 Times Tables

Licensed to Ashton Vale Primary School

1	$27 \div 3 =$ _____	21	$15 \div 3 =$ _____	41	$33 \div 3 =$ _____
2	$12 \div 3 =$ _____	22	$27 \div 3 =$ _____	42	$21 \div 3 =$ _____
3	$6 \div 3 =$ _____	23	$6 \div 3 =$ _____	43	$33 \div 3 =$ _____
4	$3 \div 3 =$ _____	24	$18 \div 3 =$ _____	44	$24 \div 3 =$ _____
5	$36 \div 3 =$ _____	25	$27 \div 3 =$ _____	45	$24 \div 3 =$ _____
6	$27 \div 3 =$ _____	26	$36 \div 3 =$ _____	46	$36 \div 3 =$ _____
7	$12 \div 3 =$ _____	27	$24 \div 3 =$ _____	47	$27 \div 3 =$ _____
8	$18 \div 3 =$ _____	28	$3 \div 3 =$ _____	48	$36 \div 3 =$ _____
9	$18 \div 3 =$ _____	29	$12 \div 3 =$ _____	49	$24 \div 3 =$ _____
10	$36 \div 3 =$ _____	30	$9 \div 3 =$ _____	50	$18 \div 3 =$ _____
11	$36 \div 3 =$ _____	31	$12 \div 3 =$ _____	51	$21 \div 3 =$ _____
12	$3 \div 3 =$ _____	32	$3 \div 3 =$ _____	52	$36 \div 3 =$ _____
13	$18 \div 3 =$ _____	33	$30 \div 3 =$ _____	53	$18 \div 3 =$ _____
14	$36 \div 3 =$ _____	34	$27 \div 3 =$ _____	54	$9 \div 3 =$ _____
15	$9 \div 3 =$ _____	35	$18 \div 3 =$ _____	55	$27 \div 3 =$ _____
16	$3 \div 3 =$ _____	36	$9 \div 3 =$ _____	56	$15 \div 3 =$ _____
17	$15 \div 3 =$ _____	37	$9 \div 3 =$ _____	57	$33 \div 3 =$ _____
18	$6 \div 3 =$ _____	38	$27 \div 3 =$ _____	58	$30 \div 3 =$ _____
19	$27 \div 3 =$ _____	39	$12 \div 3 =$ _____	59	$6 \div 3 =$ _____
20	$30 \div 3 =$ _____	40	$15 \div 3 =$ _____	60	$36 \div 3 =$ _____

Time taken

:

🕒 3 minute time limit 🕒

Score

60

What's your rock status?

WANNABE

< 18 correct in 3 mins

GARAGE ROCKER

18-19 correct in 3 mins

BUSKER

20-21 correct in 3 mins

GIGGER

22-24 correct in 3 mins

UNSIGNED ACT

25-29 correct in 3 mins

BREAKTHROUGH ARTIST

30-35 correct in 3 mins

SUPPORT ACT

36-44 correct in 3 mins

HEADLINER

45-59 correct in 3 mins

ROCK STAR

All correct in \leq 3mins

ROCK LEGEND

All correct in \leq 2min

ROCK HERO

All correct in \leq 1 min

**TIMES TABLES
ROCK STARS**

Name: _____

Week 34 Session 3

2020-21

3s 4s and 8s

3 a week

Times Tables Rock Stars



3 Times Tables

Licensed to Ashton Vale Primary School

1	$3 \times 1 =$ _____	21	$3 \times 12 =$ _____	41	$6 \div 3 =$ _____
2	$3 \times 3 =$ _____	22	$3 \times 6 =$ _____	42	$12 \div 3 =$ _____
3	$3 \times 2 =$ _____	23	$3 \times 5 =$ _____	43	$18 \div 3 =$ _____
4	$3 \times 4 =$ _____	24	$3 \times 11 =$ _____	44	$36 \div 3 =$ _____
5	$3 \times 5 =$ _____	25	$3 \times 10 =$ _____	45	$3 \div 3 =$ _____
6	$3 \times 7 =$ _____	26	$3 \times 3 =$ _____	46	$24 \div 3 =$ _____
7	$3 \times 2 =$ _____	27	$3 \times 3 =$ _____	47	$27 \div 3 =$ _____
8	$3 \times 11 =$ _____	28	$3 \times 8 =$ _____	48	$36 \div 3 =$ _____
9	$3 \times 6 =$ _____	29	$3 \times 11 =$ _____	49	$27 \div 3 =$ _____
10	$3 \times 9 =$ _____	30	$3 \times 9 =$ _____	50	$18 \div 3 =$ _____
11	$3 \times 4 =$ _____	31	$9 \div 3 =$ _____	51	$33 \div 3 =$ _____
12	$3 \times 5 =$ _____	32	$27 \div 3 =$ _____	52	$9 \div 3 =$ _____
13	$3 \times 9 =$ _____	33	$3 \div 3 =$ _____	53	$18 \div 3 =$ _____
14	$3 \times 3 =$ _____	34	$33 \div 3 =$ _____	54	$33 \div 3 =$ _____
15	$3 \times 3 =$ _____	35	$15 \div 3 =$ _____	55	$36 \div 3 =$ _____
16	$3 \times 6 =$ _____	36	$36 \div 3 =$ _____	56	$6 \div 3 =$ _____
17	$3 \times 4 =$ _____	37	$21 \div 3 =$ _____	57	$9 \div 3 =$ _____
18	$3 \times 3 =$ _____	38	$12 \div 3 =$ _____	58	$6 \div 3 =$ _____
19	$3 \times 9 =$ _____	39	$15 \div 3 =$ _____	59	$21 \div 3 =$ _____
20	$3 \times 4 =$ _____	40	$18 \div 3 =$ _____	60	$30 \div 3 =$ _____

Time taken

:

 3 minute time limit 

Score

60

Add up your time

Mins

S1 _____

S2 _____

S3 _____

Total _____

Secs

S1 _____

S2 _____

S3 _____

Total _____

Add up your score

S1 _____

S2 _____

S3 _____

Total _____

Name: _____

Week 35 Session 1

2020-21

3s 4s and 8s

3 a week

Times Tables Rock Stars

4

Times Tables

Licensed to Ashton Vale Primary School

1	$4 \times 6 =$ _____	21	$4 \times 8 =$ _____	41	$7 \times 4 =$ _____
2	$4 \times 11 =$ _____	22	$4 \times 5 =$ _____	42	$3 \times 4 =$ _____
3	$4 \times 10 =$ _____	23	$4 \times 11 =$ _____	43	$7 \times 4 =$ _____
4	$4 \times 7 =$ _____	24	$4 \times 1 =$ _____	44	$5 \times 4 =$ _____
5	$4 \times 7 =$ _____	25	$4 \times 4 =$ _____	45	$4 \times 4 =$ _____
6	$4 \times 4 =$ _____	26	$4 \times 6 =$ _____	46	$6 \times 4 =$ _____
7	$4 \times 3 =$ _____	27	$4 \times 7 =$ _____	47	$4 \times 4 =$ _____
8	$4 \times 6 =$ _____	28	$4 \times 8 =$ _____	48	$11 \times 4 =$ _____
9	$4 \times 2 =$ _____	29	$4 \times 6 =$ _____	49	$2 \times 4 =$ _____
10	$4 \times 2 =$ _____	30	$4 \times 1 =$ _____	50	$3 \times 4 =$ _____
11	$4 \times 8 =$ _____	31	$7 \times 4 =$ _____	51	$3 \times 4 =$ _____
12	$4 \times 8 =$ _____	32	$7 \times 4 =$ _____	52	$1 \times 4 =$ _____
13	$4 \times 2 =$ _____	33	$7 \times 4 =$ _____	53	$4 \times 4 =$ _____
14	$4 \times 5 =$ _____	34	$8 \times 4 =$ _____	54	$4 \times 4 =$ _____
15	$4 \times 7 =$ _____	35	$5 \times 4 =$ _____	55	$4 \times 4 =$ _____
16	$4 \times 8 =$ _____	36	$1 \times 4 =$ _____	56	$7 \times 4 =$ _____
17	$4 \times 9 =$ _____	37	$6 \times 4 =$ _____	57	$4 \times 4 =$ _____
18	$4 \times 5 =$ _____	38	$9 \times 4 =$ _____	58	$11 \times 4 =$ _____
19	$4 \times 10 =$ _____	39	$2 \times 4 =$ _____	59	$4 \times 4 =$ _____
20	$4 \times 12 =$ _____	40	$6 \times 4 =$ _____	60	$3 \times 4 =$ _____

Time taken

:

🕒 3 minute time limit 🕒

Score

60

What's your rock status?

WANNABE

< 18 correct in 3 mins

GARAGE ROCKER

18-19 correct in 3 mins

BUSKER

20-21 correct in 3 mins

GIGGER

22-24 correct in 3 mins

UNSIGNED ACT

25-29 correct in 3 mins

BREAKTHROUGH ARTIST

30-35 correct in 3 mins

SUPPORT ACT

36-44 correct in 3 mins

HEADLINER

45-59 correct in 3 mins

ROCK STAR

All correct in \leq 3mins

ROCK LEGEND

All correct in \leq 2min

ROCK HERO

All correct in \leq 1 min

**TIMES TABLES
ROCK STARS**

Name: _____

Week 35 Session 2

2020-21

3s 4s and 8s

3 a week

Times Tables Rock Stars

4

Times Tables

Licensed to Ashton Vale Primary School

1	$36 \div 4 =$ _____	21	$16 \div 4 =$ _____	41	$24 \div 4 =$ _____
2	$8 \div 4 =$ _____	22	$24 \div 4 =$ _____	42	$48 \div 4 =$ _____
3	$40 \div 4 =$ _____	23	$48 \div 4 =$ _____	43	$44 \div 4 =$ _____
4	$32 \div 4 =$ _____	24	$16 \div 4 =$ _____	44	$8 \div 4 =$ _____
5	$48 \div 4 =$ _____	25	$28 \div 4 =$ _____	45	$40 \div 4 =$ _____
6	$48 \div 4 =$ _____	26	$8 \div 4 =$ _____	46	$16 \div 4 =$ _____
7	$12 \div 4 =$ _____	27	$48 \div 4 =$ _____	47	$44 \div 4 =$ _____
8	$4 \div 4 =$ _____	28	$12 \div 4 =$ _____	48	$40 \div 4 =$ _____
9	$32 \div 4 =$ _____	29	$40 \div 4 =$ _____	49	$12 \div 4 =$ _____
10	$40 \div 4 =$ _____	30	$48 \div 4 =$ _____	50	$48 \div 4 =$ _____
11	$40 \div 4 =$ _____	31	$20 \div 4 =$ _____	51	$48 \div 4 =$ _____
12	$16 \div 4 =$ _____	32	$20 \div 4 =$ _____	52	$24 \div 4 =$ _____
13	$48 \div 4 =$ _____	33	$44 \div 4 =$ _____	53	$8 \div 4 =$ _____
14	$4 \div 4 =$ _____	34	$12 \div 4 =$ _____	54	$48 \div 4 =$ _____
15	$12 \div 4 =$ _____	35	$44 \div 4 =$ _____	55	$28 \div 4 =$ _____
16	$4 \div 4 =$ _____	36	$40 \div 4 =$ _____	56	$24 \div 4 =$ _____
17	$48 \div 4 =$ _____	37	$20 \div 4 =$ _____	57	$8 \div 4 =$ _____
18	$36 \div 4 =$ _____	38	$48 \div 4 =$ _____	58	$12 \div 4 =$ _____
19	$8 \div 4 =$ _____	39	$44 \div 4 =$ _____	59	$48 \div 4 =$ _____
20	$48 \div 4 =$ _____	40	$12 \div 4 =$ _____	60	$12 \div 4 =$ _____

Time taken

:

🕒 3 minute time limit 🕒

Score

60

What's your rock status?

WANNABE

< 18 correct in 3 mins

GARAGE ROCKER

18-19 correct in 3 mins

BUSKER

20-21 correct in 3 mins

GIGGER

22-24 correct in 3 mins

UNSIGNED ACT

25-29 correct in 3 mins

BREAKTHROUGH ARTIST

30-35 correct in 3 mins

SUPPORT ACT

36-44 correct in 3 mins

HEADLINER

45-59 correct in 3 mins

ROCK STAR

All correct in \leq 3mins

ROCK LEGEND

All correct in \leq 2min

ROCK HERO

All correct in \leq 1 min

**TIMES TABLES
ROCK STARS**

Name: _____

Week 35 Session 3

2020-21

3s 4s and 8s

3 a week

**Times Tables
Rock Stars**

4



Times Tables

Licensed to Ashton Vale Primary School

1	$4 \times 7 =$ _____	21	$4 \times 6 =$ _____	41	$12 \div 4 =$ _____
2	$4 \times 1 =$ _____	22	$4 \times 3 =$ _____	42	$20 \div 4 =$ _____
3	$4 \times 5 =$ _____	23	$4 \times 1 =$ _____	43	$8 \div 4 =$ _____
4	$4 \times 9 =$ _____	24	$4 \times 3 =$ _____	44	$12 \div 4 =$ _____
5	$4 \times 7 =$ _____	25	$4 \times 6 =$ _____	45	$16 \div 4 =$ _____
6	$4 \times 11 =$ _____	26	$4 \times 4 =$ _____	46	$28 \div 4 =$ _____
7	$4 \times 10 =$ _____	27	$4 \times 8 =$ _____	47	$44 \div 4 =$ _____
8	$4 \times 2 =$ _____	28	$4 \times 9 =$ _____	48	$24 \div 4 =$ _____
9	$4 \times 4 =$ _____	29	$4 \times 8 =$ _____	49	$8 \div 4 =$ _____
10	$4 \times 11 =$ _____	30	$4 \times 4 =$ _____	50	$44 \div 4 =$ _____
11	$4 \times 6 =$ _____	31	$12 \div 4 =$ _____	51	$20 \div 4 =$ _____
12	$4 \times 2 =$ _____	32	$32 \div 4 =$ _____	52	$48 \div 4 =$ _____
13	$4 \times 6 =$ _____	33	$36 \div 4 =$ _____	53	$24 \div 4 =$ _____
14	$4 \times 3 =$ _____	34	$36 \div 4 =$ _____	54	$48 \div 4 =$ _____
15	$4 \times 9 =$ _____	35	$16 \div 4 =$ _____	55	$40 \div 4 =$ _____
16	$4 \times 8 =$ _____	36	$20 \div 4 =$ _____	56	$32 \div 4 =$ _____
17	$4 \times 2 =$ _____	37	$20 \div 4 =$ _____	57	$12 \div 4 =$ _____
18	$4 \times 6 =$ _____	38	$12 \div 4 =$ _____	58	$40 \div 4 =$ _____
19	$4 \times 10 =$ _____	39	$12 \div 4 =$ _____	59	$40 \div 4 =$ _____
20	$4 \times 6 =$ _____	40	$24 \div 4 =$ _____	60	$40 \div 4 =$ _____

Time taken

:

 3 minute time limit 

Score

60

Add up your time

Mins

S1 _____

S2 _____

S3 _____

Total _____

Secs

S1 _____

S2 _____

S3 _____

Total _____

Add up your score

S1 _____

S2 _____

S3 _____

Total _____

Name: _____

Week 36 Session 1

2020-21

3s 4s and 8s

3 a week

8

Times Tables

Times Tables Rock Stars

Licensed to Ashton Vale Primary School

1	$8 \times 8 =$ _____	21	$8 \times 11 =$ _____	41	$11 \times 8 =$ _____
2	$8 \times 6 =$ _____	22	$8 \times 4 =$ _____	42	$5 \times 8 =$ _____
3	$8 \times 4 =$ _____	23	$8 \times 6 =$ _____	43	$11 \times 8 =$ _____
4	$8 \times 3 =$ _____	24	$8 \times 1 =$ _____	44	$2 \times 8 =$ _____
5	$8 \times 6 =$ _____	25	$8 \times 5 =$ _____	45	$9 \times 8 =$ _____
6	$8 \times 1 =$ _____	26	$8 \times 5 =$ _____	46	$6 \times 8 =$ _____
7	$8 \times 5 =$ _____	27	$8 \times 2 =$ _____	47	$3 \times 8 =$ _____
8	$8 \times 1 =$ _____	28	$8 \times 12 =$ _____	48	$3 \times 8 =$ _____
9	$8 \times 4 =$ _____	29	$8 \times 1 =$ _____	49	$5 \times 8 =$ _____
10	$8 \times 3 =$ _____	30	$8 \times 6 =$ _____	50	$9 \times 8 =$ _____
11	$8 \times 9 =$ _____	31	$10 \times 8 =$ _____	51	$4 \times 8 =$ _____
12	$8 \times 9 =$ _____	32	$10 \times 8 =$ _____	52	$12 \times 8 =$ _____
13	$8 \times 9 =$ _____	33	$6 \times 8 =$ _____	53	$9 \times 8 =$ _____
14	$8 \times 8 =$ _____	34	$3 \times 8 =$ _____	54	$8 \times 8 =$ _____
15	$8 \times 10 =$ _____	35	$7 \times 8 =$ _____	55	$4 \times 8 =$ _____
16	$8 \times 7 =$ _____	36	$5 \times 8 =$ _____	56	$8 \times 8 =$ _____
17	$8 \times 6 =$ _____	37	$4 \times 8 =$ _____	57	$7 \times 8 =$ _____
18	$8 \times 7 =$ _____	38	$3 \times 8 =$ _____	58	$3 \times 8 =$ _____
19	$8 \times 6 =$ _____	39	$2 \times 8 =$ _____	59	$9 \times 8 =$ _____
20	$8 \times 2 =$ _____	40	$5 \times 8 =$ _____	60	$7 \times 8 =$ _____

Time taken

:

🕒 3 minute time limit 🕒

Score

60

What's your rock status?

WANNABE

< 18 correct in 3 mins

GARAGE ROCKER

18-19 correct in 3 mins

BUSKER

20-21 correct in 3 mins

GIGGER

22-24 correct in 3 mins

UNSIGNED ACT

25-29 correct in 3 mins

BREAKTHROUGH ARTIST

30-35 correct in 3 mins

SUPPORT ACT

36-44 correct in 3 mins

HEADLINER

45-59 correct in 3 mins

ROCK STAR

All correct in \leq 3mins

ROCK LEGEND

All correct in \leq 2min

ROCK HERO

All correct in \leq 1 min

**TIMES TABLES
ROCK STARS**

Name: _____

Week 36 Session 2

2020-21

3s 4s and 8s

3 a week

Times Tables Rock Stars

8

Times Tables

Licensed to Ashton Vale Primary School

1	$72 \div 8 =$ _____	21	$96 \div 8 =$ _____	41	$16 \div 8 =$ _____
2	$56 \div 8 =$ _____	22	$16 \div 8 =$ _____	42	$64 \div 8 =$ _____
3	$56 \div 8 =$ _____	23	$64 \div 8 =$ _____	43	$8 \div 8 =$ _____
4	$48 \div 8 =$ _____	24	$8 \div 8 =$ _____	44	$56 \div 8 =$ _____
5	$32 \div 8 =$ _____	25	$80 \div 8 =$ _____	45	$40 \div 8 =$ _____
6	$24 \div 8 =$ _____	26	$8 \div 8 =$ _____	46	$40 \div 8 =$ _____
7	$80 \div 8 =$ _____	27	$48 \div 8 =$ _____	47	$72 \div 8 =$ _____
8	$88 \div 8 =$ _____	28	$24 \div 8 =$ _____	48	$56 \div 8 =$ _____
9	$56 \div 8 =$ _____	29	$32 \div 8 =$ _____	49	$48 \div 8 =$ _____
10	$24 \div 8 =$ _____	30	$24 \div 8 =$ _____	50	$80 \div 8 =$ _____
11	$96 \div 8 =$ _____	31	$32 \div 8 =$ _____	51	$40 \div 8 =$ _____
12	$40 \div 8 =$ _____	32	$32 \div 8 =$ _____	52	$48 \div 8 =$ _____
13	$56 \div 8 =$ _____	33	$96 \div 8 =$ _____	53	$96 \div 8 =$ _____
14	$40 \div 8 =$ _____	34	$64 \div 8 =$ _____	54	$16 \div 8 =$ _____
15	$16 \div 8 =$ _____	35	$96 \div 8 =$ _____	55	$64 \div 8 =$ _____
16	$96 \div 8 =$ _____	36	$96 \div 8 =$ _____	56	$16 \div 8 =$ _____
17	$8 \div 8 =$ _____	37	$32 \div 8 =$ _____	57	$24 \div 8 =$ _____
18	$32 \div 8 =$ _____	38	$56 \div 8 =$ _____	58	$88 \div 8 =$ _____
19	$88 \div 8 =$ _____	39	$96 \div 8 =$ _____	59	$96 \div 8 =$ _____
20	$24 \div 8 =$ _____	40	$56 \div 8 =$ _____	60	$48 \div 8 =$ _____

Time taken

:

🕒 3 minute time limit 🕒

Score

60

What's your rock status?

WANNABE

< 18 correct in 3 mins

GARAGE ROCKER

18-19 correct in 3 mins

BUSKER

20-21 correct in 3 mins

GIGGER

22-24 correct in 3 mins

UNSIGNED ACT

25-29 correct in 3 mins

BREAKTHROUGH ARTIST

30-35 correct in 3 mins

SUPPORT ACT

36-44 correct in 3 mins

HEADLINER

45-59 correct in 3 mins

ROCK STAR

All correct in \leq 3mins

ROCK LEGEND

All correct in \leq 2min

ROCK HERO

All correct in \leq 1 min

**TIMES TABLES
ROCK STARS**

Name: _____

Week 36 Session 3

2020-21

3s 4s and 8s

3 a week

Times Tables Rock Stars

8 Times Tables

Licensed to Ashton Vale Primary School

1	$8 \times 12 =$ _____	21	$8 \times 8 =$ _____	41	$16 \div 8 =$ _____
2	$8 \times 8 =$ _____	22	$8 \times 5 =$ _____	42	$8 \div 8 =$ _____
3	$8 \times 8 =$ _____	23	$8 \times 9 =$ _____	43	$16 \div 8 =$ _____
4	$8 \times 8 =$ _____	24	$8 \times 11 =$ _____	44	$48 \div 8 =$ _____
5	$8 \times 1 =$ _____	25	$8 \times 9 =$ _____	45	$48 \div 8 =$ _____
6	$8 \times 8 =$ _____	26	$8 \times 7 =$ _____	46	$80 \div 8 =$ _____
7	$8 \times 1 =$ _____	27	$8 \times 6 =$ _____	47	$48 \div 8 =$ _____
8	$8 \times 4 =$ _____	28	$8 \times 8 =$ _____	48	$16 \div 8 =$ _____
9	$8 \times 5 =$ _____	29	$8 \times 10 =$ _____	49	$16 \div 8 =$ _____
10	$8 \times 1 =$ _____	30	$8 \times 11 =$ _____	50	$96 \div 8 =$ _____
11	$8 \times 10 =$ _____	31	$48 \div 8 =$ _____	51	$16 \div 8 =$ _____
12	$8 \times 11 =$ _____	32	$32 \div 8 =$ _____	52	$80 \div 8 =$ _____
13	$8 \times 1 =$ _____	33	$24 \div 8 =$ _____	53	$64 \div 8 =$ _____
14	$8 \times 1 =$ _____	34	$64 \div 8 =$ _____	54	$48 \div 8 =$ _____
15	$8 \times 3 =$ _____	35	$24 \div 8 =$ _____	55	$96 \div 8 =$ _____
16	$8 \times 1 =$ _____	36	$56 \div 8 =$ _____	56	$80 \div 8 =$ _____
17	$8 \times 5 =$ _____	37	$24 \div 8 =$ _____	57	$64 \div 8 =$ _____
18	$8 \times 3 =$ _____	38	$80 \div 8 =$ _____	58	$8 \div 8 =$ _____
19	$8 \times 11 =$ _____	39	$96 \div 8 =$ _____	59	$40 \div 8 =$ _____
20	$8 \times 12 =$ _____	40	$64 \div 8 =$ _____	60	$64 \div 8 =$ _____

Time taken

:

🕒 3 minute time limit 🕒

Score

60

Add up your time

Mins

S1 _____

S2 _____

S3 _____

Total _____

Secs

S1 _____

S2 _____

S3 _____

Total _____

Add up your score

S1 _____

S2 _____

S3 _____

Total _____

Name: _____

Week 37 Session 1

2020-21

3s 4s and 8s

3 a week

Times Tables Rock Stars

3,4,8 Times Tables

Licensed to Ashton Vale Primary School

1	$8 \times 3 =$ _____	21	$8 \times 1 =$ _____	41	$12 \times 4 =$ _____
2	$3 \times 7 =$ _____	22	$8 \times 12 =$ _____	42	$12 \times 3 =$ _____
3	$4 \times 12 =$ _____	23	$4 \times 7 =$ _____	43	$8 \times 3 =$ _____
4	$8 \times 9 =$ _____	24	$3 \times 9 =$ _____	44	$7 \times 8 =$ _____
5	$3 \times 3 =$ _____	25	$3 \times 9 =$ _____	45	$1 \times 8 =$ _____
6	$4 \times 4 =$ _____	26	$8 \times 3 =$ _____	46	$3 \times 3 =$ _____
7	$8 \times 10 =$ _____	27	$3 \times 1 =$ _____	47	$3 \times 4 =$ _____
8	$4 \times 3 =$ _____	28	$8 \times 12 =$ _____	48	$1 \times 4 =$ _____
9	$4 \times 3 =$ _____	29	$4 \times 8 =$ _____	49	$4 \times 3 =$ _____
10	$4 \times 1 =$ _____	30	$3 \times 7 =$ _____	50	$5 \times 3 =$ _____
11	$8 \times 8 =$ _____	31	$5 \times 3 =$ _____	51	$2 \times 4 =$ _____
12	$3 \times 7 =$ _____	32	$5 \times 4 =$ _____	52	$6 \times 8 =$ _____
13	$4 \times 11 =$ _____	33	$11 \times 3 =$ _____	53	$1 \times 8 =$ _____
14	$8 \times 6 =$ _____	34	$12 \times 8 =$ _____	54	$1 \times 8 =$ _____
15	$8 \times 9 =$ _____	35	$7 \times 4 =$ _____	55	$5 \times 3 =$ _____
16	$4 \times 9 =$ _____	36	$4 \times 8 =$ _____	56	$11 \times 4 =$ _____
17	$3 \times 12 =$ _____	37	$5 \times 3 =$ _____	57	$5 \times 8 =$ _____
18	$4 \times 3 =$ _____	38	$6 \times 3 =$ _____	58	$2 \times 8 =$ _____
19	$8 \times 1 =$ _____	39	$7 \times 4 =$ _____	59	$11 \times 3 =$ _____
20	$3 \times 7 =$ _____	40	$2 \times 8 =$ _____	60	$8 \times 8 =$ _____

Time taken

:

3 minute time limit

Score

60

What's your rock status?

WANNABE

< 18 correct in 3 mins

GARAGE ROCKER

18-19 correct in 3 mins

BUSKER

20-21 correct in 3 mins

GIGGER

22-24 correct in 3 mins

UNSIGNED ACT

25-29 correct in 3 mins

BREAKTHROUGH ARTIST

30-35 correct in 3 mins

SUPPORT ACT

36-44 correct in 3 mins

HEADLINER

45-59 correct in 3 mins

ROCK STAR

All correct in \leq 3mins

ROCK LEGEND

All correct in \leq 2min

ROCK HERO

All correct in \leq 1 min

**TIMES TABLES
ROCK STARS**

Name: _____

Week 37 Session 2

2020-21

3s 4s and 8s

3 a week

Times Tables Rock Stars

3,4,8 Times Tables

Licensed to Ashton Vale Primary School

1	$30 \div 3 =$ _____	21	$27 \div 3 =$ _____	41	$4 \div 4 =$ _____
2	$8 \div 4 =$ _____	22	$27 \div 3 =$ _____	42	$40 \div 8 =$ _____
3	$72 \div 8 =$ _____	23	$48 \div 8 =$ _____	43	$18 \div 3 =$ _____
4	$56 \div 8 =$ _____	24	$15 \div 3 =$ _____	44	$3 \div 3 =$ _____
5	$3 \div 3 =$ _____	25	$56 \div 8 =$ _____	45	$20 \div 4 =$ _____
6	$9 \div 3 =$ _____	26	$20 \div 4 =$ _____	46	$48 \div 8 =$ _____
7	$16 \div 4 =$ _____	27	$24 \div 4 =$ _____	47	$20 \div 4 =$ _____
8	$3 \div 3 =$ _____	28	$80 \div 8 =$ _____	48	$24 \div 4 =$ _____
9	$32 \div 8 =$ _____	29	$18 \div 3 =$ _____	49	$3 \div 3 =$ _____
10	$8 \div 4 =$ _____	30	$21 \div 3 =$ _____	50	$8 \div 4 =$ _____
11	$44 \div 4 =$ _____	31	$27 \div 3 =$ _____	51	$16 \div 4 =$ _____
12	$40 \div 8 =$ _____	32	$30 \div 3 =$ _____	52	$48 \div 8 =$ _____
13	$48 \div 4 =$ _____	33	$3 \div 3 =$ _____	53	$36 \div 3 =$ _____
14	$9 \div 3 =$ _____	34	$24 \div 8 =$ _____	54	$80 \div 8 =$ _____
15	$8 \div 4 =$ _____	35	$48 \div 8 =$ _____	55	$80 \div 8 =$ _____
16	$8 \div 8 =$ _____	36	$72 \div 8 =$ _____	56	$20 \div 4 =$ _____
17	$3 \div 3 =$ _____	37	$72 \div 8 =$ _____	57	$30 \div 3 =$ _____
18	$24 \div 8 =$ _____	38	$44 \div 4 =$ _____	58	$27 \div 3 =$ _____
19	$21 \div 3 =$ _____	39	$88 \div 8 =$ _____	59	$36 \div 3 =$ _____
20	$32 \div 8 =$ _____	40	$44 \div 4 =$ _____	60	$48 \div 4 =$ _____

Time taken

:

🕒 3 minute time limit 🕒

Score

60

What's your rock status?

WANNABE

< 18 correct in 3 mins

GARAGE ROCKER

18-19 correct in 3 mins

BUSKER

20-21 correct in 3 mins

GIGGER

22-24 correct in 3 mins

UNSIGNED ACT

25-29 correct in 3 mins

BREAKTHROUGH ARTIST

30-35 correct in 3 mins

SUPPORT ACT

36-44 correct in 3 mins

HEADLINER

45-59 correct in 3 mins

ROCK STAR

All correct in \leq 3mins

ROCK LEGEND

All correct in \leq 2min

ROCK HERO

All correct in \leq 1 min

**TIMES TABLES
ROCK STARS**

Name: _____

Week 37 Session 3

2020-21

3s 4s and 8s

3 a week

Times Tables Rock Stars

3,4,8 Times Tables

Licensed to Ashton Vale Primary School

1	$3 \times 5 =$ _____	21	$4 \times 11 =$ _____	41	$24 \div 3 =$ _____
2	$8 \times 1 =$ _____	22	$8 \times 6 =$ _____	42	$24 \div 4 =$ _____
3	$8 \times 4 =$ _____	23	$4 \times 4 =$ _____	43	$64 \div 8 =$ _____
4	$3 \times 3 =$ _____	24	$3 \times 3 =$ _____	44	$40 \div 8 =$ _____
5	$3 \times 1 =$ _____	25	$4 \times 5 =$ _____	45	$40 \div 4 =$ _____
6	$4 \times 1 =$ _____	26	$3 \times 9 =$ _____	46	$56 \div 8 =$ _____
7	$8 \times 12 =$ _____	27	$8 \times 12 =$ _____	47	$6 \div 3 =$ _____
8	$4 \times 10 =$ _____	28	$8 \times 7 =$ _____	48	$15 \div 3 =$ _____
9	$3 \times 6 =$ _____	29	$8 \times 6 =$ _____	49	$24 \div 4 =$ _____
10	$4 \times 8 =$ _____	30	$3 \times 10 =$ _____	50	$9 \div 3 =$ _____
11	$3 \times 4 =$ _____	31	$12 \div 4 =$ _____	51	$72 \div 8 =$ _____
12	$4 \times 5 =$ _____	32	$36 \div 3 =$ _____	52	$20 \div 4 =$ _____
13	$8 \times 11 =$ _____	33	$36 \div 4 =$ _____	53	$8 \div 4 =$ _____
14	$4 \times 6 =$ _____	34	$88 \div 8 =$ _____	54	$9 \div 3 =$ _____
15	$8 \times 2 =$ _____	35	$24 \div 3 =$ _____	55	$9 \div 3 =$ _____
16	$3 \times 1 =$ _____	36	$32 \div 4 =$ _____	56	$40 \div 4 =$ _____
17	$3 \times 9 =$ _____	37	$48 \div 8 =$ _____	57	$44 \div 4 =$ _____
18	$8 \times 2 =$ _____	38	$40 \div 8 =$ _____	58	$30 \div 3 =$ _____
19	$4 \times 12 =$ _____	39	$9 \div 3 =$ _____	59	$12 \div 4 =$ _____
20	$8 \times 6 =$ _____	40	$27 \div 3 =$ _____	60	$4 \div 4 =$ _____

Time taken

:

 3 minute time limit 

Score

60

Add up your time

Mins

S1 _____

S2 _____

S3 _____

Total _____

Secs

S1 _____

S2 _____

S3 _____

Total _____

Add up your score

S1 _____

S2 _____

S3 _____

Total _____